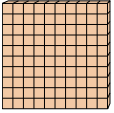
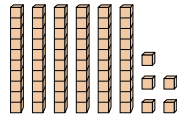





Используйте блок слева для нахождения значения наборов блоков справа.

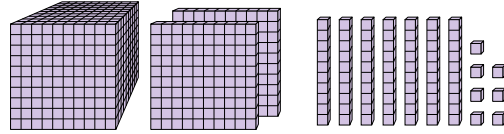
ОТВЕТЫ

1)  = 1

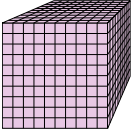


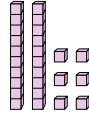
1. _____

2)  = 1

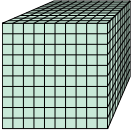


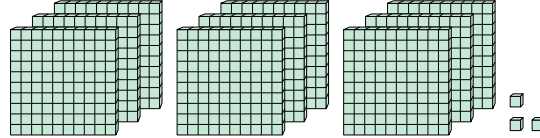
2. _____

3)  = 1




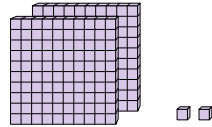
3. _____

4)  = 1




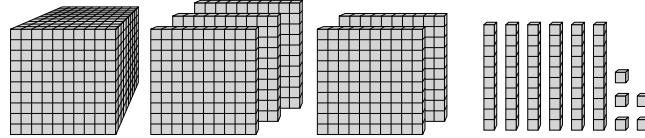
4. _____

5)  = 1

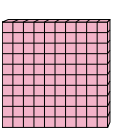


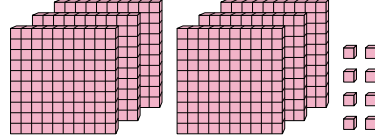
5. _____

6)  = 1

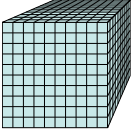


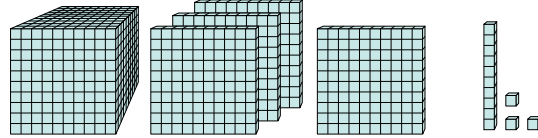
6. _____

7)  = 1

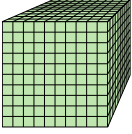


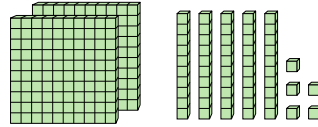
7. _____

8)  = 1

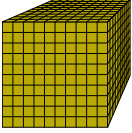


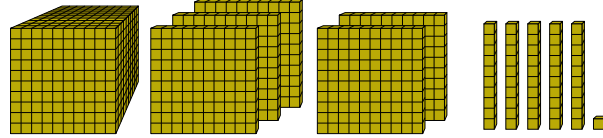
8. _____

9)  = 1



9. _____

10)  = 1



10. _____

10. _____



Используйте блок слева для нахождения значения наборов блоков справа.

Ответы

1) = 1

2) = 1

3) = 1

4) = 1

5) = 1

6) = 1

7) = 1

8) = 1

9) = 1

10) = 1

1. 0,65
2. 1,277
3. 0,026
4. 0,903
5. 2,02
6. 1,565
7. 6,08
8. 1,413
9. 0,255
10. 1,551