
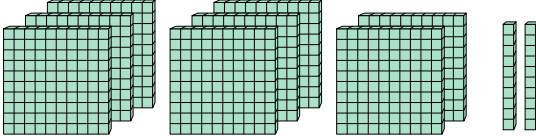


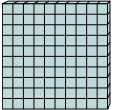


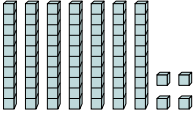
Используйте блок слева для нахождения значения наборов блоков справа.

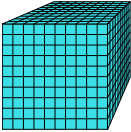
ОТВЕТЫ

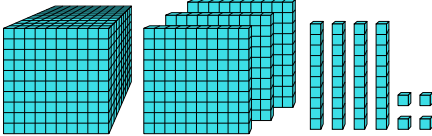
1)  = 1

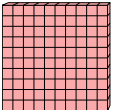


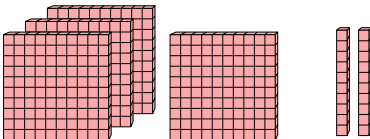
2)  = 1

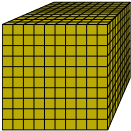


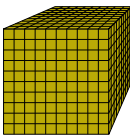
3)  = 1

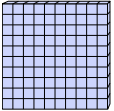


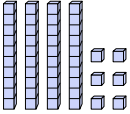
4)  = 1




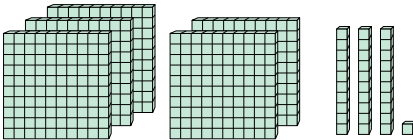
5)  = 1




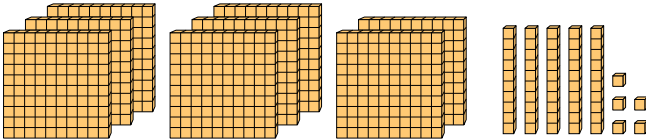
6)  = 1

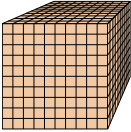


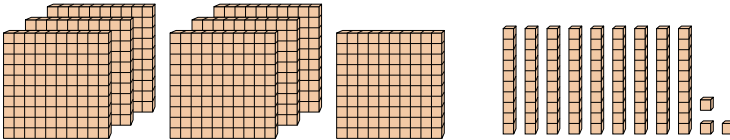
7)  = 1

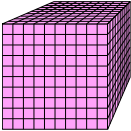


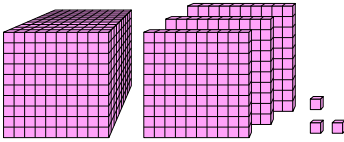
8)  = 1



9)  = 1



10)  = 1

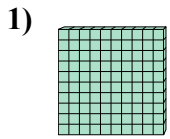


1. _____
2. _____
3. _____
4. _____
5. _____
6. _____
7. _____
8. _____
9. _____
10. _____

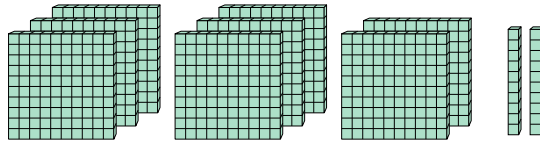


Используйте блок слева для нахождения значения наборов блоков справа.

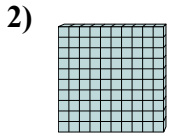
Ответы



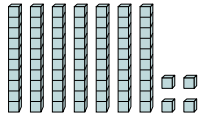
= 1



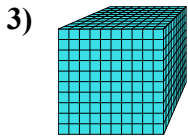
1. 8,2



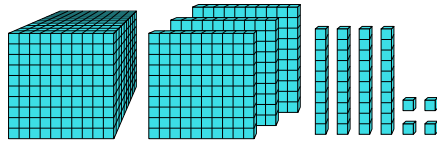
= 1



2. 0,74

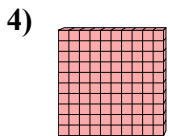


= 1

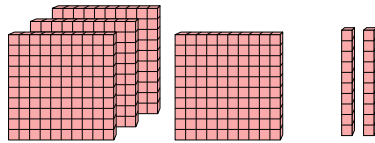


4. 4,2

5. 1

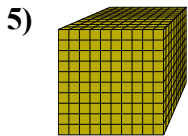


= 1

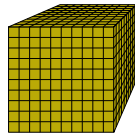


6. 0,46

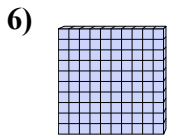
7. 5,31



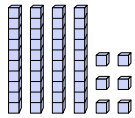
= 1



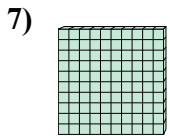
8. 8,55



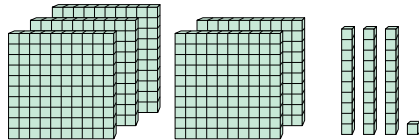
= 1



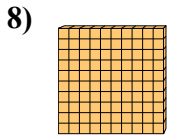
9. 0,793



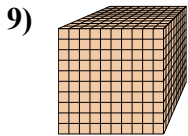
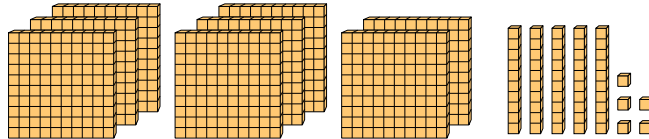
= 1



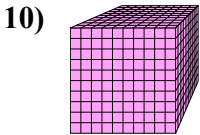
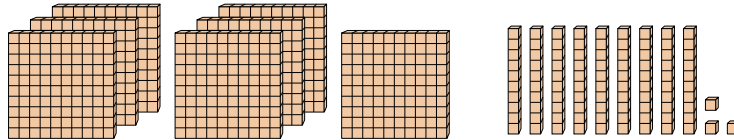
10. 1,303



= 1



= 1



= 1

