



Используйте блок слева для нахождения значения наборов блоков справа.

ОТВЕТЫ

1) = 1

1. _____

2) = 1

2. _____

3) = 1

3. _____

4) = 1

4. _____

5) = 1

5. _____

6) = 1

6. _____

7) = 1

7. _____

8) = 1

8. _____

9) = 1


9. _____

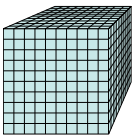
10) = 1

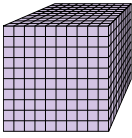
10. _____

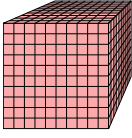


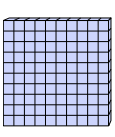
Используйте блок слева для нахождения значения наборов блоков справа.


1)  = 1

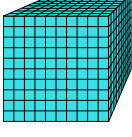
2)  = 1

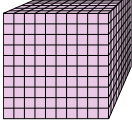
3)  = 1


4)  = 1


5)  = 1

6)  = 1

7)  = 1

8)  = 1

9)  = 1

10)  = 1

Ответы

1. 8,85
2. 0,733
3. 0,22
4. 0,92
5. 3,68
6. 7,6
7. 0,71
8. 1,159
9. 0,38
10. 1,17