





Используйте визуальную модель, чтобы решить задачу.


1) $0,8 \times 0,9 =$




2) $0,4 \times 0,8 =$




3) $0,1 \times 0,4 =$




4) $0,3 \times 0,7 =$




5) $0,9 \times 0,8 =$




6) $0,1 \times 0,2 =$




7) $0,8 \times 0,3 =$




8) $0,2 \times 0,9 =$




9) $0,6 \times 0,9 =$




10) $0,7 \times 0,1 =$




11) $0,3 \times 0,2 =$




12) $0,7 \times 0,7 =$




13) $0,1 \times 0,1 =$



14) $0,9 \times 0,5 =$



15) $0,2 \times 0,4 =$



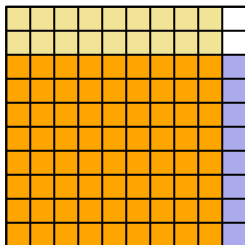
ОТВЕТЫ

1. _____
2. _____
3. _____
4. _____
5. _____
6. _____
7. _____
8. _____
9. _____
10. _____
11. _____
12. _____
13. _____
14. _____
15. _____

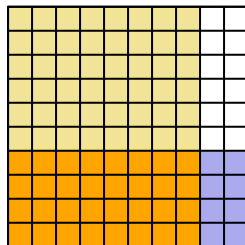


Используйте визуальную модель, чтобы решить задачу.

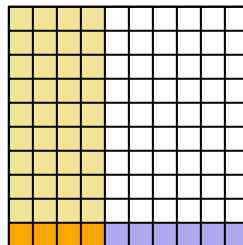
1) $0,8 \times 0,9 =$



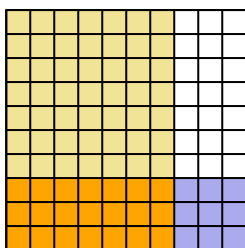
2) $0,4 \times 0,8 =$



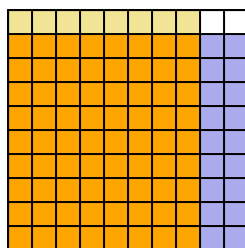
3) $0,1 \times 0,4 =$



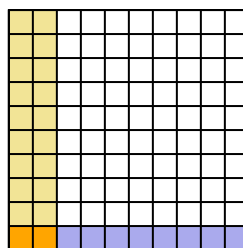
4) $0,3 \times 0,7 =$



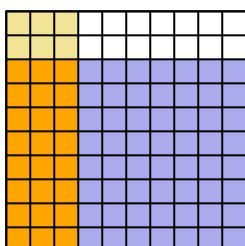
5) $0,9 \times 0,8 =$



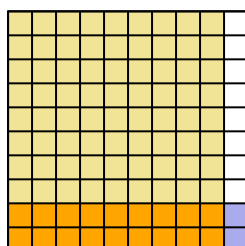
6) $0,1 \times 0,2 =$



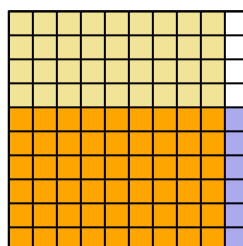
7) $0,8 \times 0,3 =$



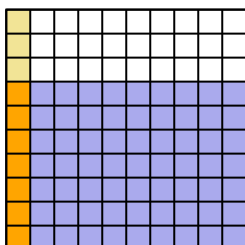
8) $0,2 \times 0,9 =$



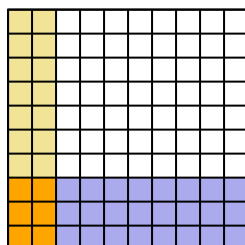
9) $0,6 \times 0,9 =$



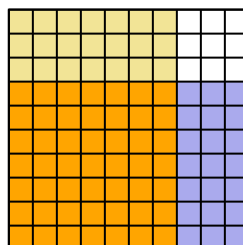
10) $0,7 \times 0,1 =$



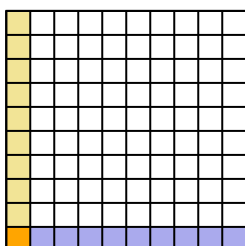
11) $0,3 \times 0,2 =$



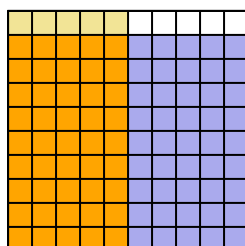
12) $0,7 \times 0,7 =$



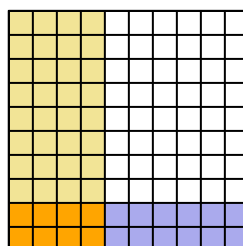
13) $0,1 \times 0,1 =$



14) $0,9 \times 0,5 =$



15) $0,2 \times 0,4 =$



ОТВЕТЫ

1. $\frac{72}{100} = 0,72$
2. $\frac{32}{100} = 0,32$
3. $\frac{4}{100} = 0,04$
4. $\frac{21}{100} = 0,21$
5. $\frac{72}{100} = 0,72$
6. $\frac{2}{100} = 0,02$
7. $\frac{24}{100} = 0,24$
8. $\frac{18}{100} = 0,18$
9. $\frac{54}{100} = 0,54$
10. $\frac{7}{100} = 0,07$
11. $\frac{6}{100} = 0,06$
12. $\frac{49}{100} = 0,49$
13. $\frac{1}{100} = 0,01$
14. $\frac{45}{100} = 0,45$
15. $\frac{8}{100} = 0,08$