





Используйте визуальную модель, чтобы решить задачу.


1) $0,5 \times 0,7 =$




2) $0,7 \times 0,5 =$




3) $0,1 \times 0,4 =$




4) $0,7 \times 0,9 =$




5) $0,1 \times 0,7 =$




6) $0,9 \times 0,8 =$




7) $0,7 \times 0,2 =$




8) $0,8 \times 0,7 =$




9) $0,8 \times 0,2 =$




10) $0,8 \times 0,8 =$




11) $0,3 \times 0,5 =$




12) $0,6 \times 0,6 =$




13) $0,2 \times 0,2 =$



14) $0,1 \times 0,6 =$



15) $0,6 \times 0,8 =$



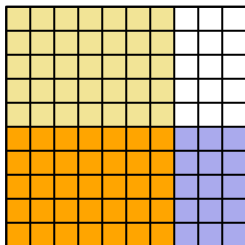
ОТВЕТЫ

1. _____
2. _____
3. _____
4. _____
5. _____
6. _____
7. _____
8. _____
9. _____
10. _____
11. _____
12. _____
13. _____
14. _____
15. _____

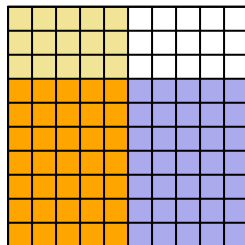


Используйте визуальную модель, чтобы решить задачу.

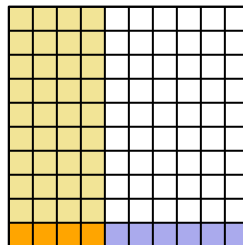
1) $0,5 \times 0,7 =$



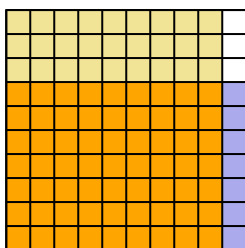
2) $0,7 \times 0,5 =$



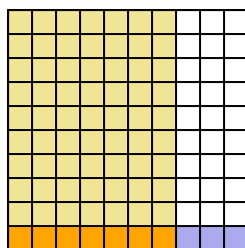
3) $0,1 \times 0,4 =$



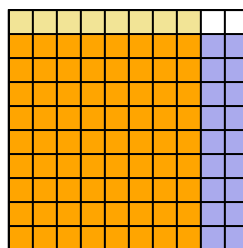
4) $0,7 \times 0,9 =$



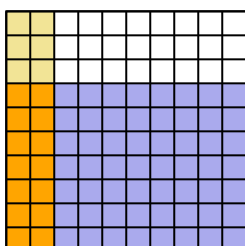
5) $0,1 \times 0,7 =$



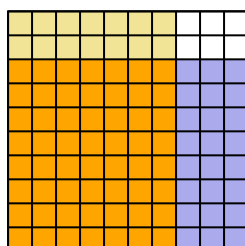
6) $0,9 \times 0,8 =$



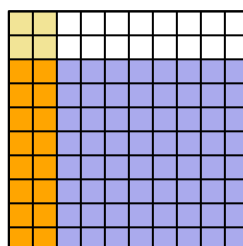
7) $0,7 \times 0,2 =$



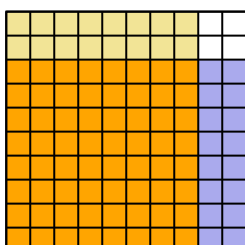
8) $0,8 \times 0,7 =$



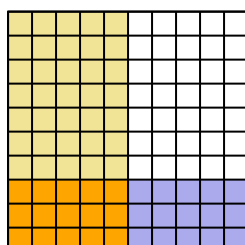
9) $0,8 \times 0,2 =$



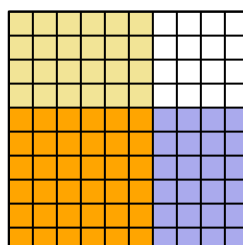
10) $0,8 \times 0,8 =$



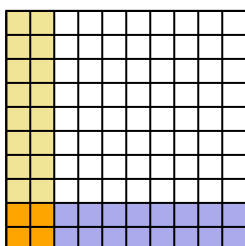
11) $0,3 \times 0,5 =$



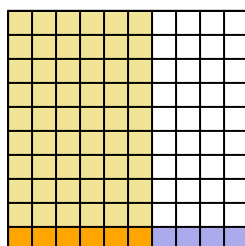
12) $0,6 \times 0,6 =$



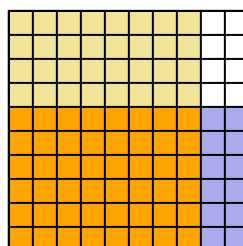
13) $0,2 \times 0,2 =$



14) $0,1 \times 0,6 =$



15) $0,6 \times 0,8 =$



ОТВЕТЫ

1. $\frac{35}{100} = 0,35$
2. $\frac{35}{100} = 0,35$
3. $\frac{4}{100} = 0,04$
4. $\frac{63}{100} = 0,63$
5. $\frac{7}{100} = 0,07$
6. $\frac{72}{100} = 0,72$
7. $\frac{14}{100} = 0,14$
8. $\frac{56}{100} = 0,56$
9. $\frac{16}{100} = 0,16$
10. $\frac{64}{100} = 0,64$
11. $\frac{15}{100} = 0,15$
12. $\frac{36}{100} = 0,36$
13. $\frac{4}{100} = 0,04$
14. $\frac{6}{100} = 0,06$
15. $\frac{48}{100} = 0,48$