




Используйте визуальную модель, чтобы решить задачу.

ОТВЕТЫ

1) $3 \times 0,35 =$

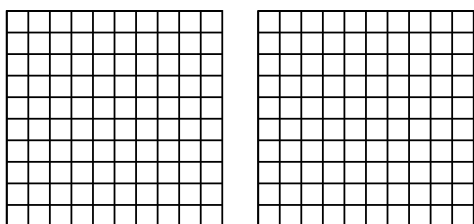


1. _____

2. _____

3. _____

2) $2 \times 0,41 =$

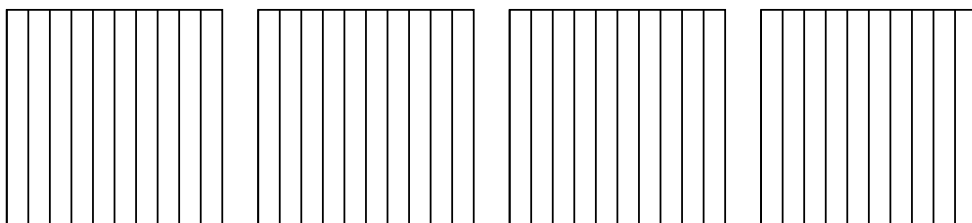


4. _____

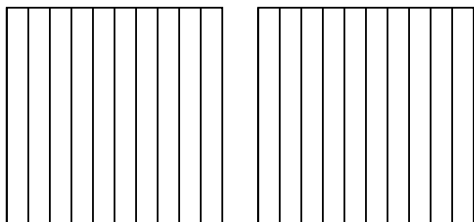
5. _____

6. _____

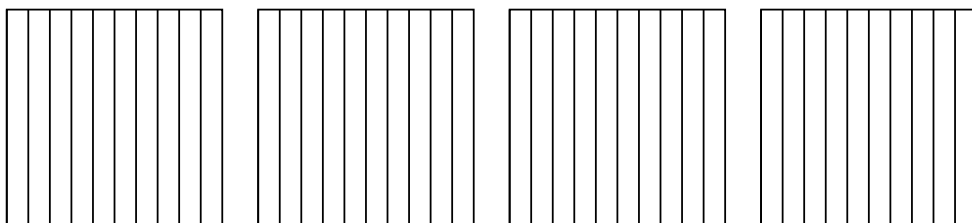
3) $4 \times 0,8 =$



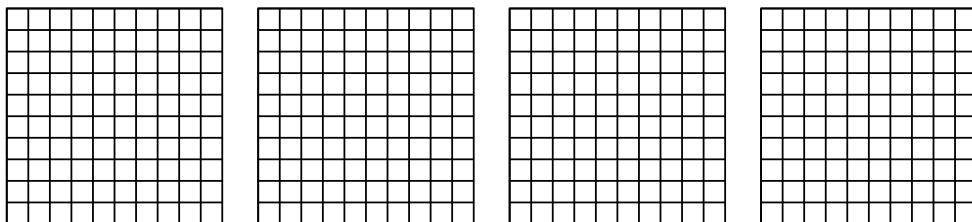
4) $2 \times 0,5 =$



5) $4 \times 0,8 =$



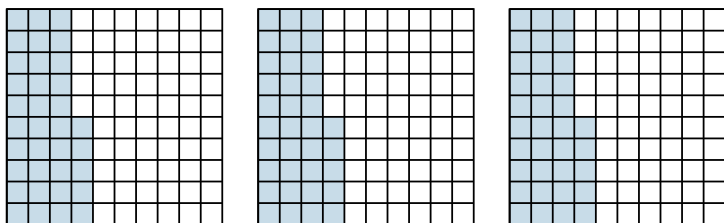
6) $4 \times 0,68 =$



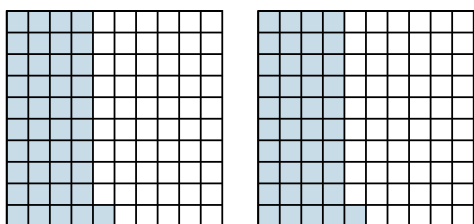


Используйте визуальную модель, чтобы решить задачу.

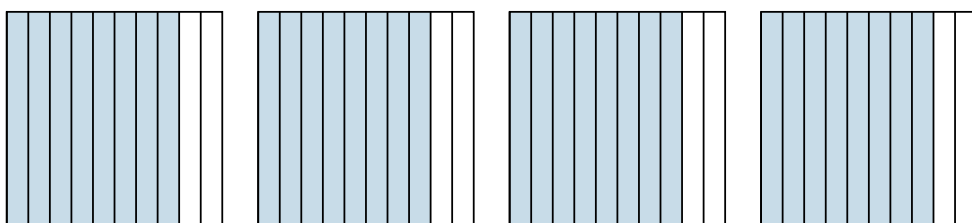
1) $3 \times 0,35 =$



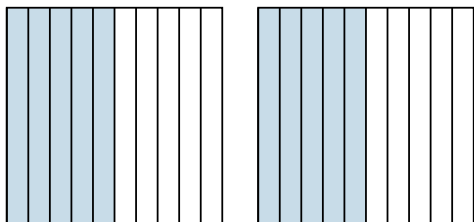
2) $2 \times 0,41 =$



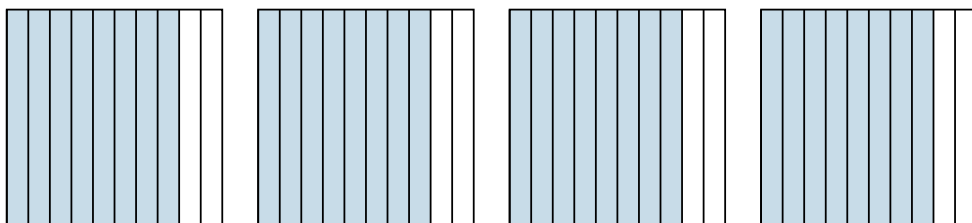
3) $4 \times 0,8 =$



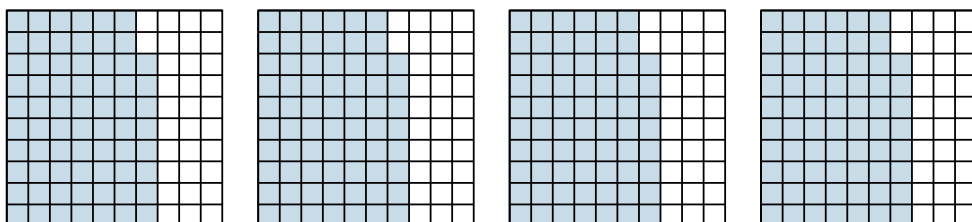
4) $2 \times 0,5 =$



5) $4 \times 0,8 =$



6) $4 \times 0,68 =$



ОТВЕТЫ

1. $\frac{105}{100} = 1,05$

2. $\frac{82}{100} = 0,82$

3. $\frac{32}{10} = 3,2$

4. $\frac{10}{10} = 1$

5. $\frac{32}{10} = 3,2$

6. $\frac{272}{100} = 2,72$