



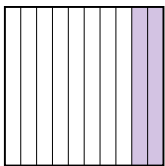
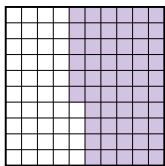
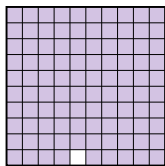
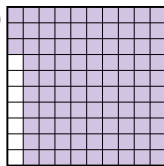




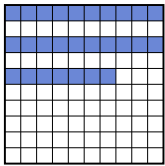


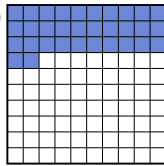
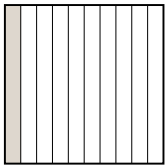

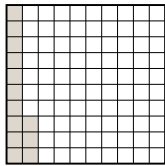
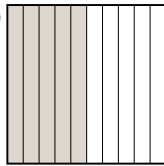

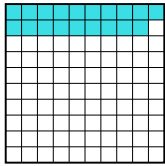
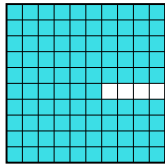
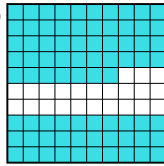
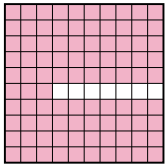
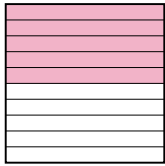
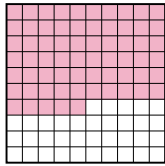
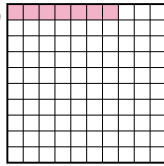

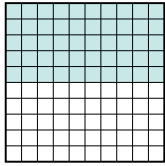


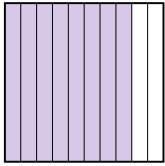
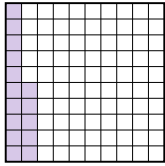
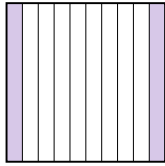
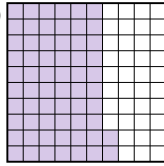
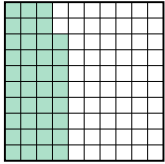
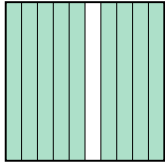
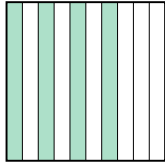
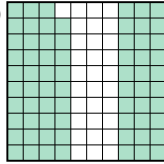
Расположите данные сектора по возрастанию, по наличию закрашенных частей.

Ответы

об)	A	B	C	D	маленький <u>0.2 - A</u>	<p>об. A,B,D,C</p> <p>1. _____</p> <p>2. _____</p> <p>3. _____</p> <p>4. _____</p> <p>5. _____</p> <p>6. _____</p> <p>7. _____</p> <p>8. _____</p>
					<u>0.56 - B</u>	
					<u>0.93 - D</u>	
					большой <u>0.99 - C</u>	
1)	A	B	C	D	маленький _____	
					большой _____	
2)	A	B	C	D	маленький _____	
					большой _____	
3)	A	B	C	D	маленький _____	
					большой _____	
4)	A	B	C	D	маленький _____	
					большой _____	
5)	A	B	C	D	маленький _____	
					большой _____	
6)	A	B	C	D	маленький _____	
					большой _____	
7)	A	B	C	D	маленький _____	
					большой _____	
8)	A	B	C	D	маленький _____	
					большой _____	



Расположите данные сектора по возрастанию, по наличию закрашенных частей.

об)	A 	B 	C 	D 	маленький <u>0.2 - A</u>
					<u>0.56 - B</u>
					<u>0.93 - D</u>
					большой <u>0.99 - C</u>
1)	A 	B 	C 	D 	маленький <u>0.13 - B</u>
					<u>0.3 - A</u>
					<u>0.4 - C</u>
					большой <u>0.68 - D</u>
2)	A 	B 	C 	D 	маленький <u>0.27 - A</u>
					<u>0.3 - B</u>
					<u>0.32 - D</u>
					большой <u>0.9 - C</u>
3)	A 	B 	C 	D 	маленький <u>0.1 - A</u>
					<u>0.13 - C</u>
					<u>0.5 - D</u>
					большой <u>0.97 - B</u>
4)	A 	B 	C 	D 	маленький <u>0.19 - B</u>
					<u>0.77 - D</u>
					<u>0.8 - A</u>
					большой <u>0.96 - C</u>
5)	A 	B 	C 	D 	маленький <u>0.07 - D</u>
					<u>0.5 - B</u>
					<u>0.65 - C</u>
					большой <u>0.93 - A</u>
6)	A 	B 	C 	D 	маленький <u>0.26 - D</u>
					<u>0.4 - C</u>
					<u>0.5 - A</u>
					большой <u>0.5 - A</u>
7)	A 	B 	C 	D 	маленький <u>0.15 - B</u>
					<u>0.2 - C</u>
					<u>0.62 - D</u>
					большой <u>0.8 - A</u>
8)	A 	B 	C 	D 	маленький <u>0.38 - A</u>
					<u>0.4 - C</u>
					<u>0.69 - D</u>
					большой <u>0.9 - B</u>

ОТВЕТЫ

- об. A,B,D,C
1. B,A,C,D
2. A,B,D,C
3. A,C,D,B
4. B,D,A,C
5. D,B,C,A
6. D,C,A,A
7. B,C,D,A
8. A,C,D,B