
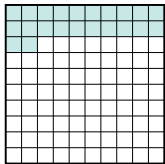







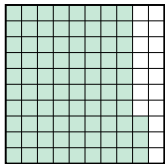
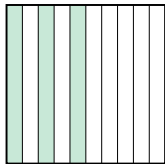
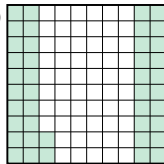
Расположите данные сектора по возрастанию, по наличию закрашенных частей.

ОТВЕТЫ

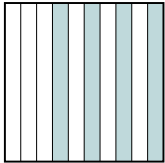
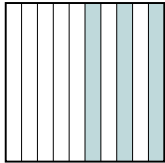
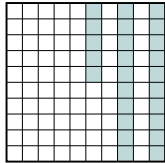
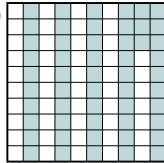
об) A  B  C  D 

маленький 0.22 - B
0.4 - D
0.6 - A
 большой 0.8 - C

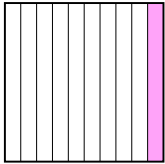
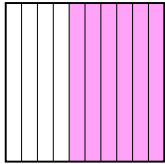
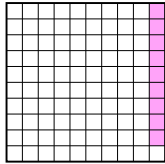
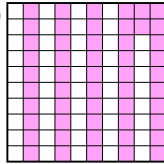
об. **B,D,A,C**

1) A  B  C  D 

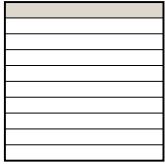

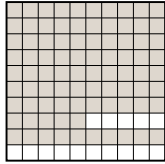
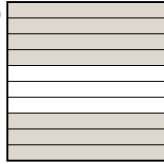
маленький _____
 большой _____

2) A  B  C  D 

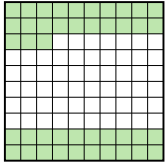


маленький _____
 большой _____

3) A  B  C  D 

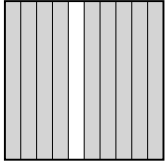


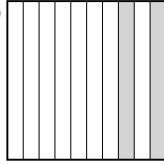
маленький _____
 большой _____

4) A  B  C  D 

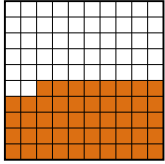
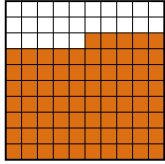

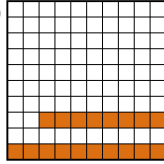
маленький _____
 большой _____

5) A  B  C  D 


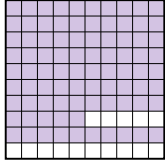
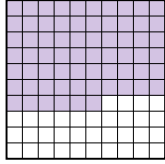
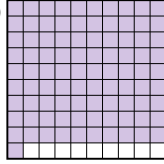
маленький _____
 большой _____

6) A  B  C  D 

маленький _____
 большой _____

7) A  B  C  D 

маленький _____
 большой _____

8) A  B  C  D 

маленький _____
 большой _____

- 1. _____
- 2. _____
- 3. _____
- 4. _____
- 5. _____
- 6. _____
- 7. _____
- 8. _____



Расположите данные сектора по возрастанию, по наличию закрашенных частей.

ОТВЕТЫ

об)	A	B	C	D	<p>маленький $\frac{0.22}{0.4} - B$</p> <p>большой $\frac{0.6}{0.8} - A$</p>	об.	B,D,A,C
1)	A	B	C	D	<p>маленький $\frac{0.21}{0.3} - A$</p> <p>большой $\frac{0.42}{0.83} - B$</p>	1.	A,C,D,B
2)	A	B	C	D	<p>маленький $\frac{0.25}{0.3} - C$</p> <p>большой $\frac{0.4}{0.53} - D$</p>	2.	C,B,A,D
3)	A	B	C	D	<p>маленький $\frac{0.09}{0.1} - C$</p> <p>большой $\frac{0.52}{0.6} - D$</p>	3.	C,A,D,B
4)	A	B	C	D	<p>маленький $\frac{0.1}{0.7} - A$</p> <p>большой $\frac{0.85}{0.95} - B$</p>	4.	A,D,C,B
5)	A	B	C	D	<p>маленький $\frac{0.43}{0.5} - A$</p> <p>большой $\frac{0.6}{0.76} - B$</p>	5.	A,D,C,B
6)	A	B	C	D	<p>маленький $\frac{0.2}{0.26} - D$</p> <p>большой $\frac{0.9}{0.9} - A$</p>	6.	D,B,A,A
7)	A	B	C	D	<p>маленький $\frac{0.18}{0.48} - D$</p> <p>большой $\frac{0.75}{0.8} - C$</p>	7.	D,A,B,C
8)	A	B	C	D	<p>маленький $\frac{0.66}{0.7} - C$</p> <p>большой $\frac{0.85}{0.91} - D$</p>	8.	C,A,B,D