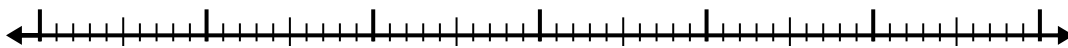





Используйте числовую линию для решения каждой проблемы.

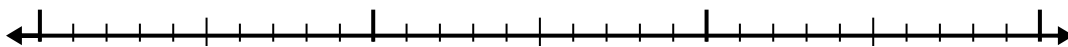
1)  $5,5 - 3,4 =$



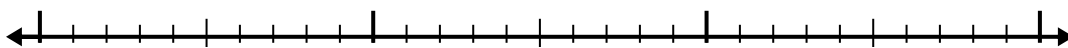
2)  $4,6 - 2,1 =$



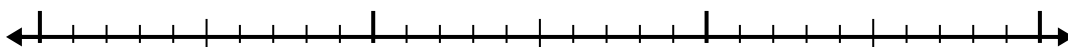
3)  $8,1 - 1,2 =$



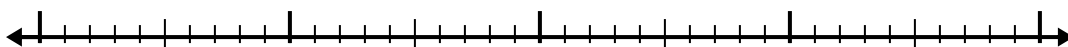
4)  $8,1 - 1,3 =$



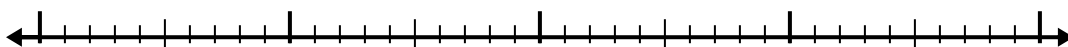
5)  $8,9 - 1,8 =$




6)  $5,9 - 2,1 =$



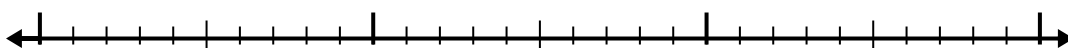
7)  $9,3 - 2,1 =$




8)  $7,8 - 1,8 =$



9)  $5,6 - 1,1 =$



10)  $6 - 2,7 =$



Ответы

1. \_\_\_\_\_

2. \_\_\_\_\_

3. \_\_\_\_\_

4. \_\_\_\_\_

5. \_\_\_\_\_

6. \_\_\_\_\_

7. \_\_\_\_\_

8. \_\_\_\_\_

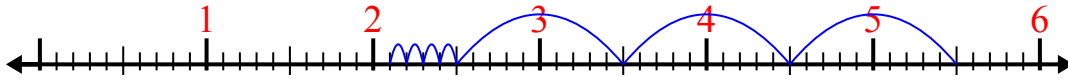
9. \_\_\_\_\_

10. \_\_\_\_\_

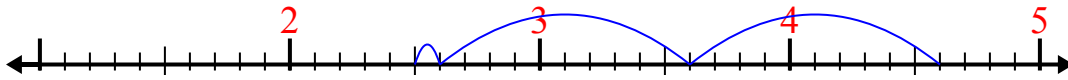


Используйте числовую линию для решения каждой проблемы.

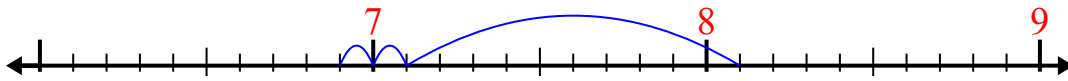
1)  $5,5 - 3,4 =$



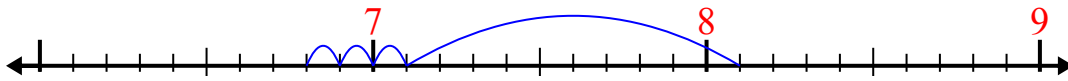
2)  $4,6 - 2,1 =$



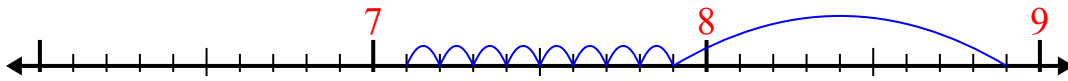
3)  $8,1 - 1,2 =$



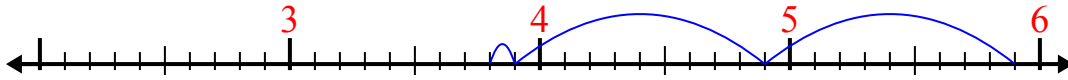
4)  $8,1 - 1,3 =$



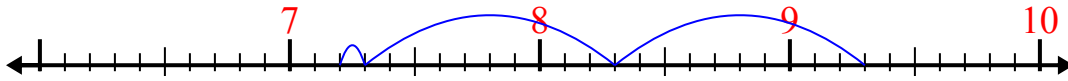
5)  $8,9 - 1,8 =$



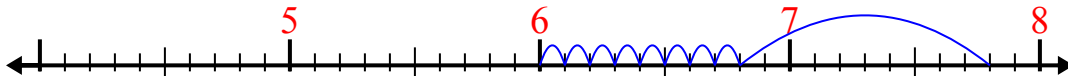
6)  $5,9 - 2,1 =$



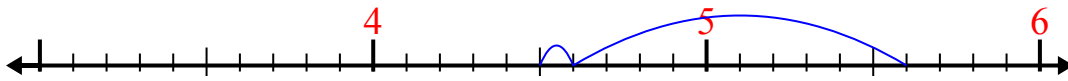
7)  $9,3 - 2,1 =$



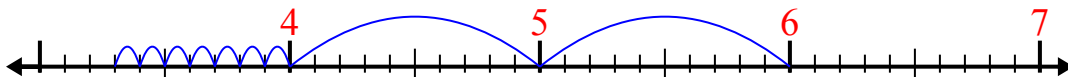
8)  $7,8 - 1,8 =$



9)  $5,6 - 1,1 =$



10)  $6 - 2,7 =$



**ОТВЕТЫ**

1. 2,1
2. 2,5
3. 6,9
4. 6,8
5. 7,1
6. 3,8
7. 7,2
8. 6
9. 4,5
10. 3,3