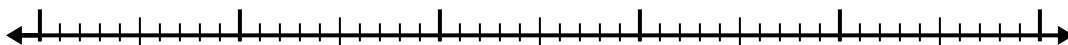


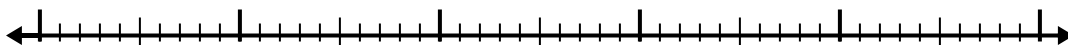


Используйте числовую линию для решения каждой проблемы.

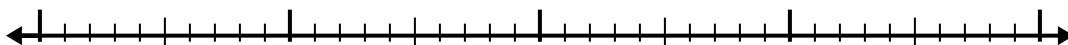
1)  $6,2 - 3,6 =$



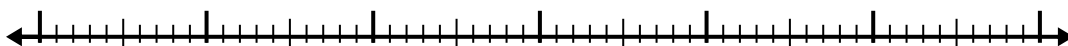
2)  $5,2 - 2,2 =$



3)  $3,3 - 2,2 =$



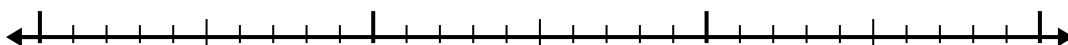
4)  $7,6 - 3,9 =$



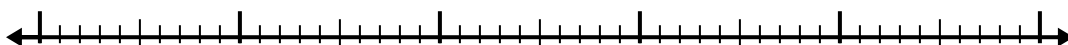
5)  $10,4 - 2,2 =$




6)  $7,2 - 1,8 =$



7)  $5,8 - 3,6 =$



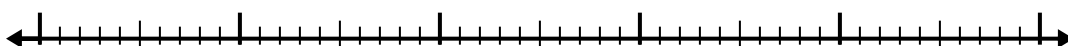
8)  $8,2 - 2,8 =$



9)  $5,7 - 2,2 =$



10)  $4,1 - 2,2 =$



Ответы

1. \_\_\_\_\_

2. \_\_\_\_\_

3. \_\_\_\_\_

4. \_\_\_\_\_

5. \_\_\_\_\_

6. \_\_\_\_\_

7. \_\_\_\_\_

8. \_\_\_\_\_

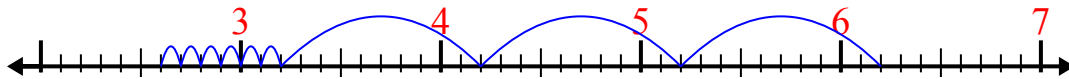
9. \_\_\_\_\_

10. \_\_\_\_\_

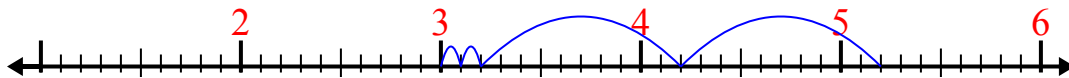


Используйте числовую линию для решения каждой проблемы.

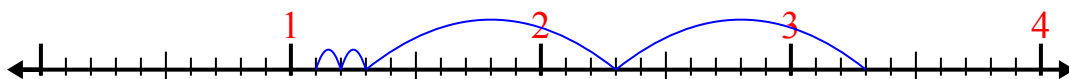
1)  $6,2 - 3,6 =$



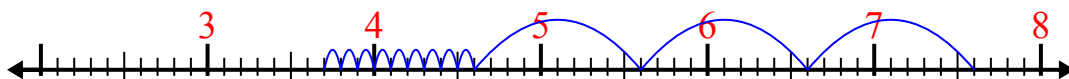
2)  $5,2 - 2,2 =$



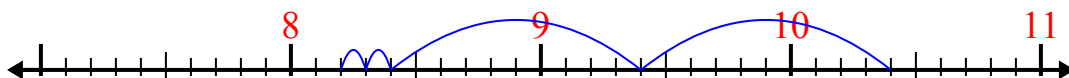
3)  $3,3 - 2,2 =$



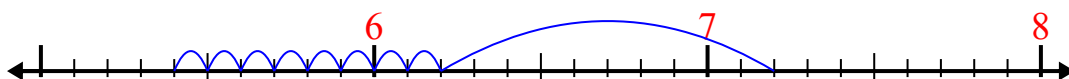
4)  $7,6 - 3,9 =$



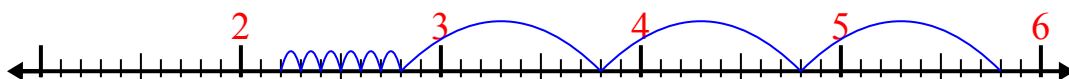
5)  $10,4 - 2,2 =$



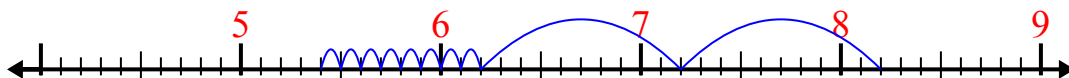
6)  $7,2 - 1,8 =$



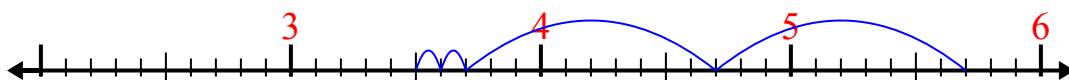
7)  $5,8 - 3,6 =$



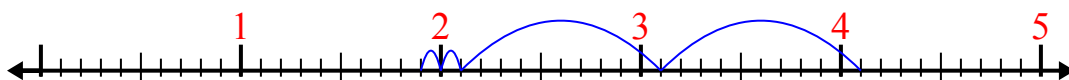
8)  $8,2 - 2,8 =$



9)  $5,7 - 2,2 =$



10)  $4,1 - 2,2 =$



**ОТВЕТЫ**

1. 2,6

2. 3

3. 1,1

4. 3,7

5. 8,2

6. 5,4

7. 2,2

8. 5,4

9. 3,5

10. 1,9