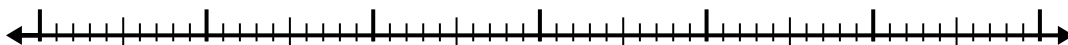


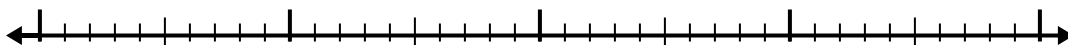


Используйте числовую линию для решения каждой проблемы.

1)  $5,8 - 3,1 =$




2)  $7,4 - 2,3 =$



3)  $10,3 - 3,1 =$



4)  $6,9 - 3,7 =$



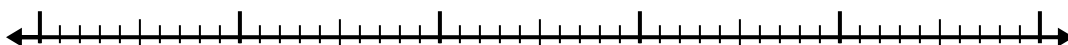
5)  $11,2 - 3,6 =$



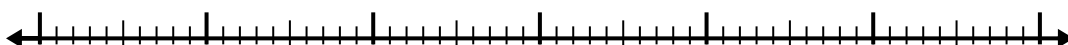
6)  $4,5 - 2,7 =$



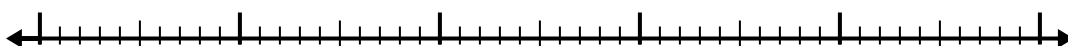
7)  $4,1 - 2,4 =$



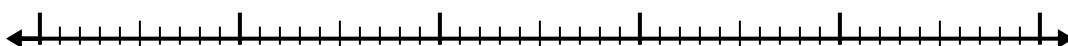
8)  $12,4 - 3,6 =$



9)  $11,5 - 2,6 =$



10)  $9,2 - 3,9 =$



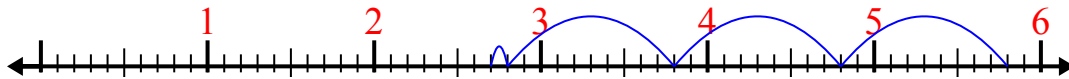
Ответы

- 1. \_\_\_\_\_
- 2. \_\_\_\_\_
- 3. \_\_\_\_\_
- 4. \_\_\_\_\_
- 5. \_\_\_\_\_
- 6. \_\_\_\_\_
- 7. \_\_\_\_\_
- 8. \_\_\_\_\_
- 9. \_\_\_\_\_
- 10. \_\_\_\_\_

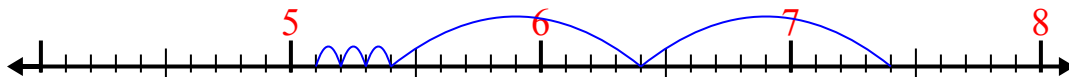


Используйте числовую линию для решения каждой проблемы.

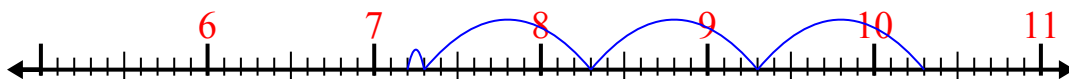
1)  $5,8 - 3,1 =$



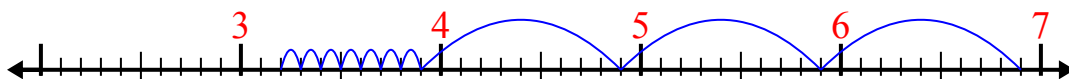
2)  $7,4 - 2,3 =$



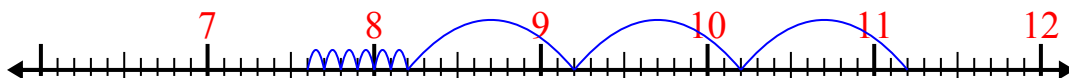
3)  $10,3 - 3,1 =$



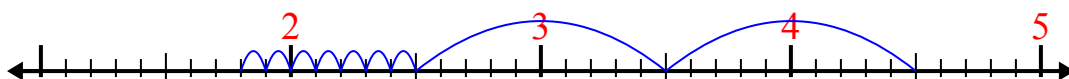
4)  $6,9 - 3,7 =$



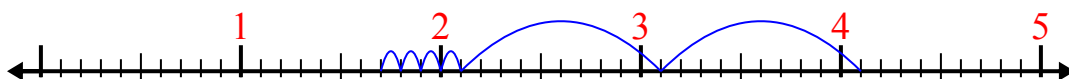
5)  $11,2 - 3,6 =$



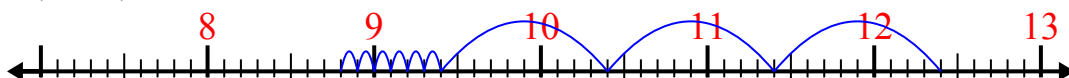
6)  $4,5 - 2,7 =$



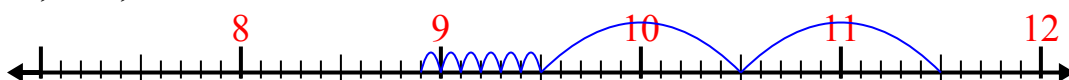
7)  $4,1 - 2,4 =$



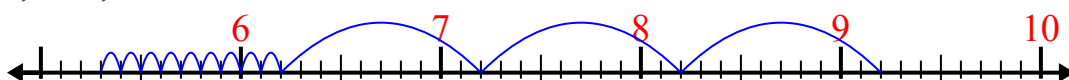
8)  $12,4 - 3,6 =$



9)  $11,5 - 2,6 =$



10)  $9,2 - 3,9 =$



**ОТВЕТЫ**

1. 2,7

2. 5,1

3. 7,2

4. 3,2

5. 7,6

6. 1,8

7. 1,7

8. 8,8

9. 8,9

10. 5,3