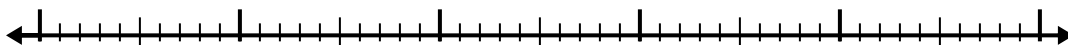


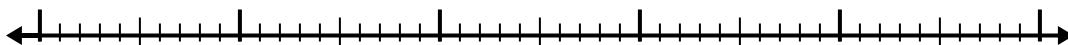


Используйте числовую линию для решения каждой проблемы.

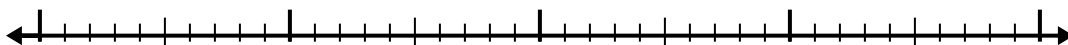
1) $8,6 - 3,8 =$



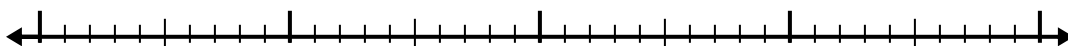
2) $8,8 - 2,7 =$



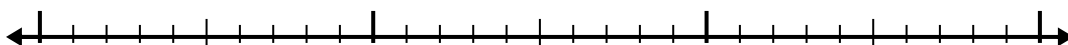
3) $6,8 - 1,3 =$



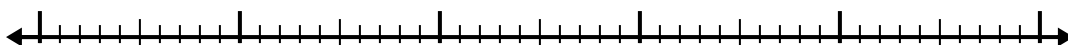
4) $5,2 - 2,4 =$



5) $2,7 - 1,3 =$



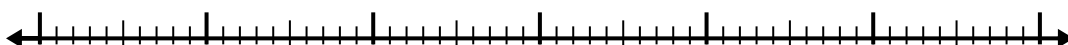
6) $7 - 2,4 =$




7) $10,5 - 2,5 =$




8) $12,3 - 3,8 =$



9) $4,2 - 2,7 =$



10) $3 - 1,3 =$



Ответы

1. _____

2. _____

3. _____

4. _____

5. _____

6. _____

7. _____

8. _____

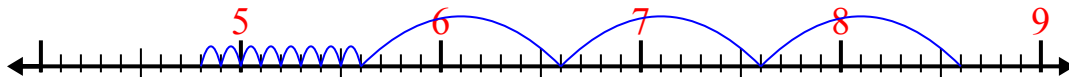
9. _____

10. _____

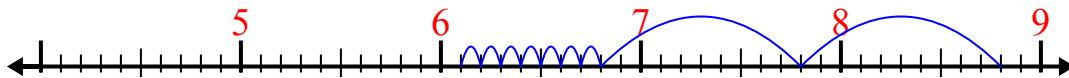


Используйте числовую линию для решения каждой проблемы.

1) $8,6 - 3,8 =$



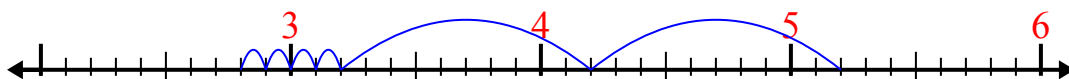
2) $8,8 - 2,7 =$



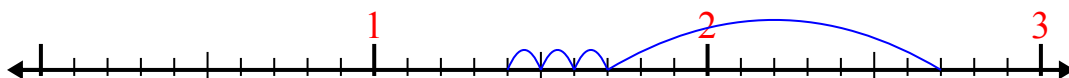
3) $6,8 - 1,3 =$



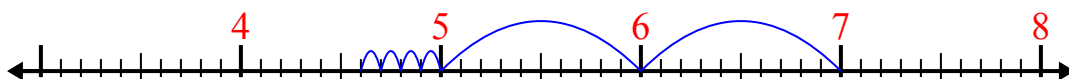
4) $5,2 - 2,4 =$



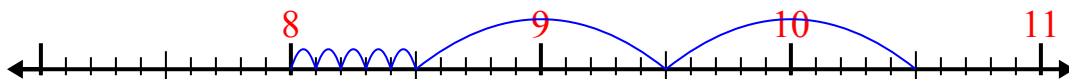
5) $2,7 - 1,3 =$



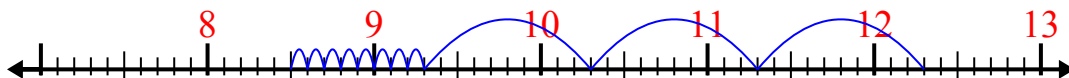
6) $7 - 2,4 =$



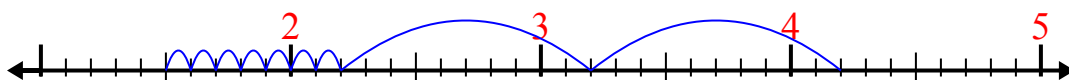
7) $10,5 - 2,5 =$



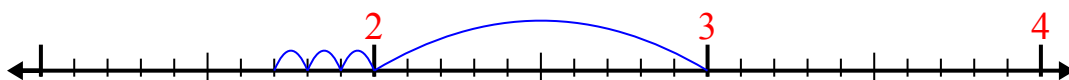
8) $12,3 - 3,8 =$



9) $4,2 - 2,7 =$



10) $3 - 1,3 =$



Отвѣты

1. 4,8

2. 6,1

3. 5,5

4. 2,8

5. 1,4

6. 4,6

7. 8

8. 8,5

9. 1,5

10. 1,7