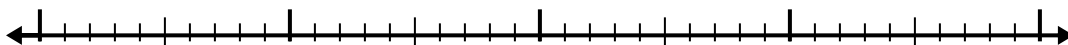


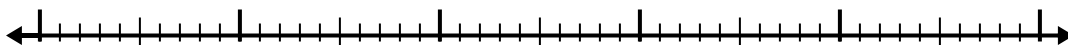


Используйте числовую линию для решения каждой проблемы.

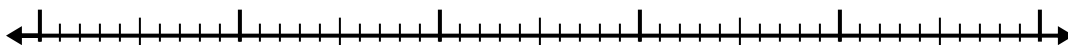
1) $9,6 - 2,2 =$



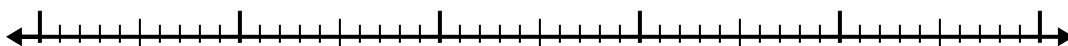
2) $7,7 - 2,3 =$



3) $7,6 - 2,9 =$



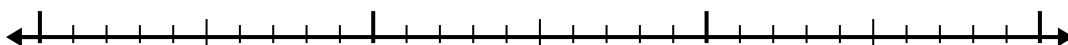
4) $8,1 - 3,7 =$



5) $4,5 - 2,3 =$



6) $5,2 - 1,3 =$



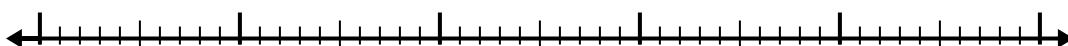
7) $4,9 - 3,9 =$



8) $7,9 - 2,1 =$



9) $8,6 - 2,3 =$



10) $10,2 - 2,9 =$



Ответы

1. _____

2. _____

3. _____

4. _____

5. _____

6. _____

7. _____

8. _____

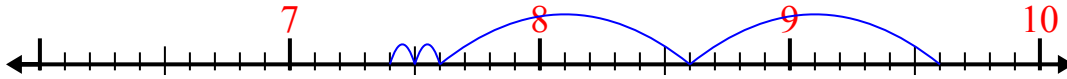
9. _____

10. _____

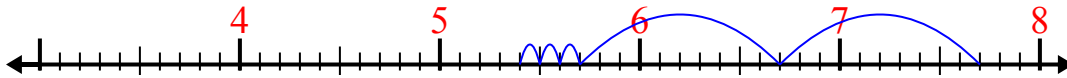


Используйте числовую линию для решения каждой проблемы.

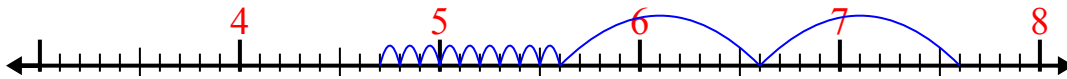
1) $9,6 - 2,2 =$



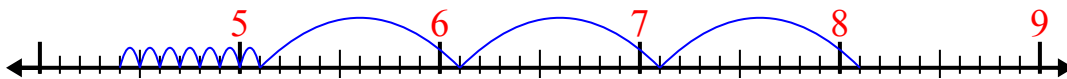
2) $7,7 - 2,3 =$



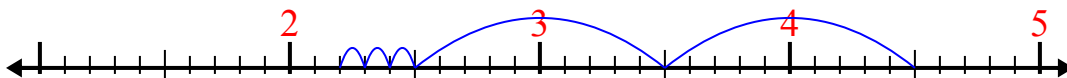
3) $7,6 - 2,9 =$



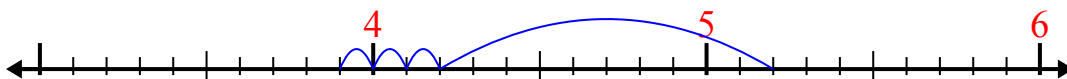
4) $8,1 - 3,7 =$



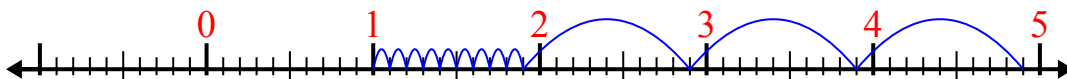
5) $4,5 - 2,3 =$



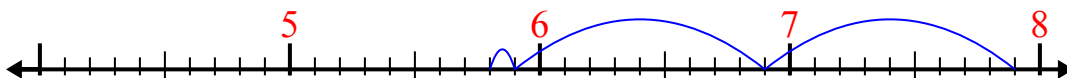
6) $5,2 - 1,3 =$



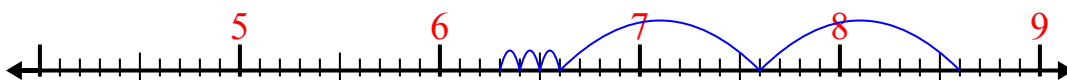
7) $4,9 - 3,9 =$



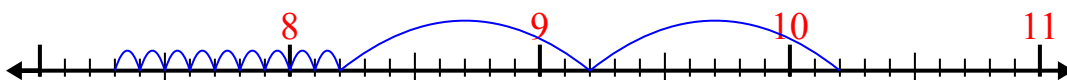
8) $7,9 - 2,1 =$



9) $8,6 - 2,3 =$



10) $10,2 - 2,9 =$



ОТВЕТЫ

- 1. 7,4
- 2. 5,4
- 3. 4,7
- 4. 4,4
- 5. 2,2
- 6. 3,9
- 7. 1
- 8. 5,8
- 9. 6,3
- 10. 7,3