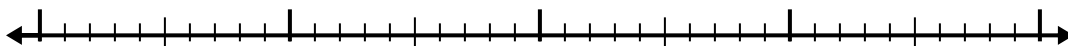


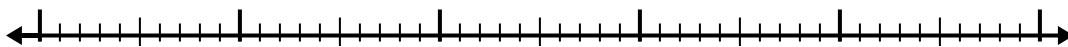


Используйте числовую линию для решения каждой проблемы.

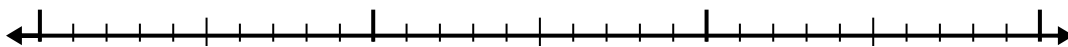
1) $7 - 2,6 =$



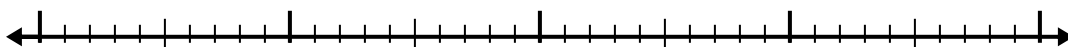
2) $6,2 - 2,7 =$



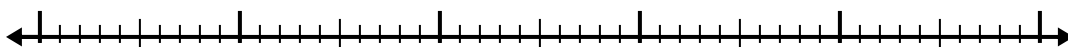
3) $2,5 - 1,2 =$



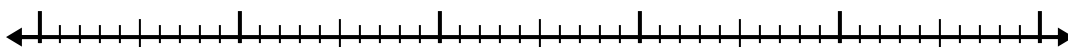
4) $5,2 - 1,9 =$



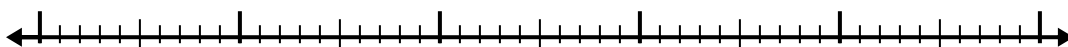
5) $12,3 - 3,4 =$




6) $11 - 2,7 =$




7) $8 - 2,7 =$



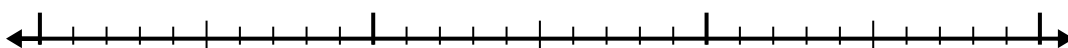
8) $5 - 3,1 =$



9) $10,9 - 2,3 =$



10) $5,1 - 1,1 =$



Ответы

1. _____

2. _____

3. _____

4. _____

5. _____

6. _____

7. _____

8. _____

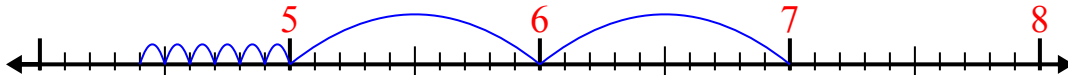
9. _____

10. _____

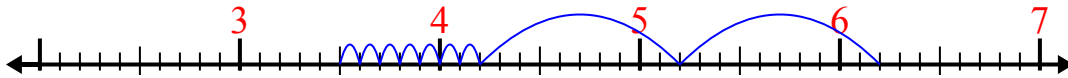


Используйте числовую линию для решения каждой проблемы.

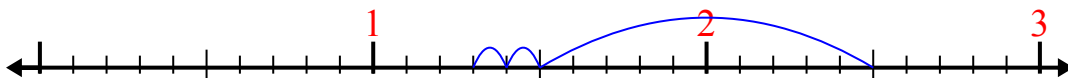
1) $7 - 2,6 =$



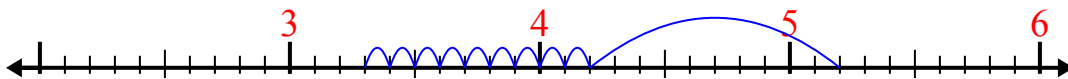
2) $6,2 - 2,7 =$



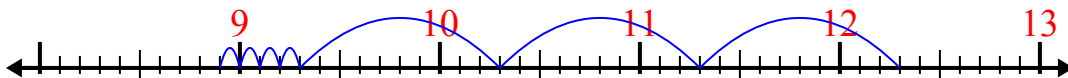
3) $2,5 - 1,2 =$



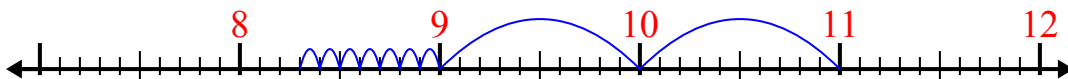
4) $5,2 - 1,9 =$



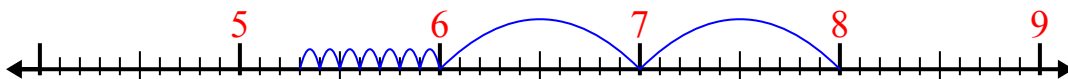
5) $12,3 - 3,4 =$



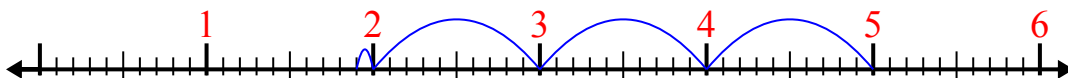
6) $11 - 2,7 =$



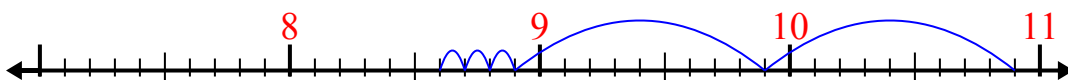
7) $8 - 2,7 =$



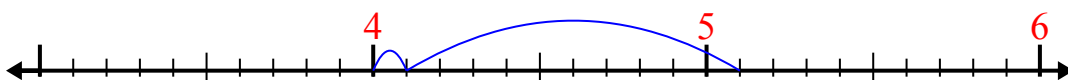
8) $5 - 3,1 =$



9) $10,9 - 2,3 =$



10) $5,1 - 1,1 =$



Отвѣты

1. 4,4
2. 3,5
3. 1,3
4. 3,3
5. 8,9
6. 8,3
7. 5,3
8. 1,9
9. 8,6
10. 4