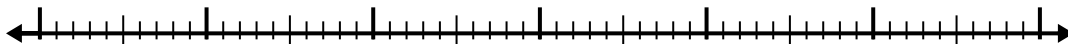


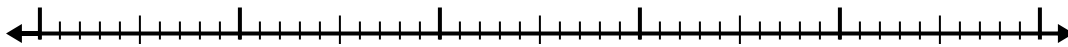


Используйте числовую линию для решения каждой проблемы.


1) $9,7 - 3,2 =$




2) $9,1 - 3,8 =$



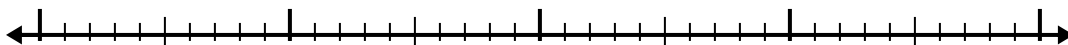
3) $4,2 - 1,1 =$



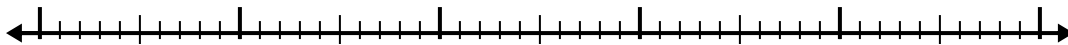
4) $11,6 - 3,2 =$



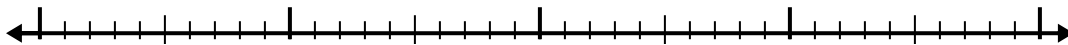
5) $6,9 - 1,2 =$



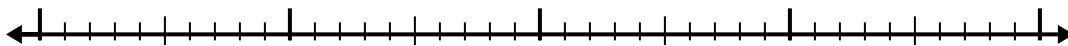
6) $4,8 - 2,8 =$



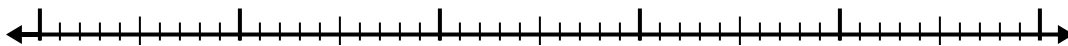
7) $6 - 1,8 =$



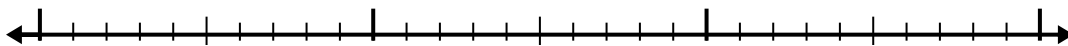
8) $8 - 1,4 =$



9) $8,2 - 3,9 =$



10) $2,5 - 1,4 =$



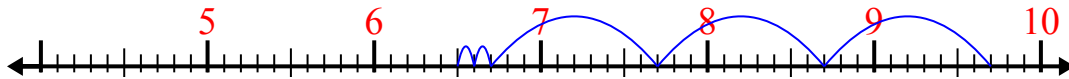
Ответы

- 1. _____
- 2. _____
- 3. _____
- 4. _____
- 5. _____
- 6. _____
- 7. _____
- 8. _____
- 9. _____
- 10. _____

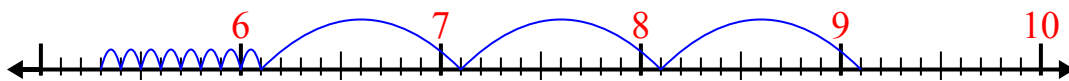


Используйте числовую линию для решения каждой проблемы.

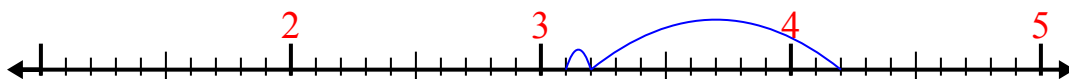
1) $9,7 - 3,2 =$



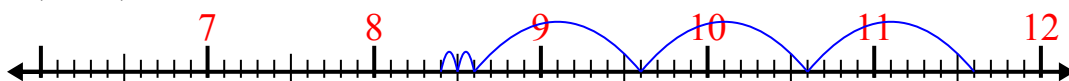
2) $9,1 - 3,8 =$



3) $4,2 - 1,1 =$



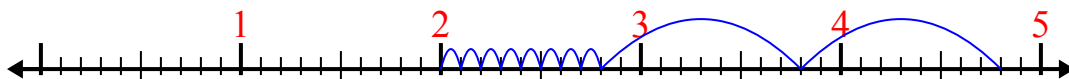
4) $11,6 - 3,2 =$



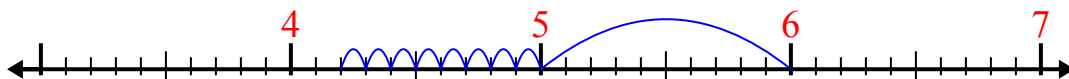
5) $6,9 - 1,2 =$



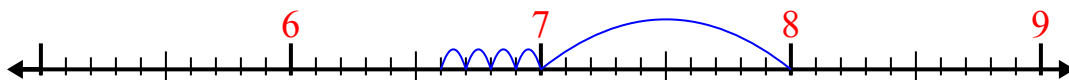
6) $4,8 - 2,8 =$



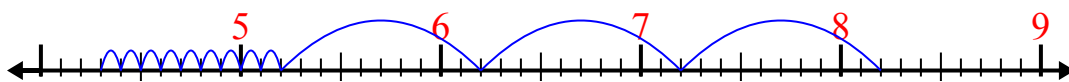
7) $6 - 1,8 =$



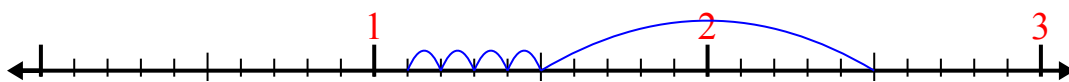
8) $8 - 1,4 =$



9) $8,2 - 3,9 =$



10) $2,5 - 1,4 =$



Ответы

1. 6,5
2. 5,3
3. 3,1
4. 8,4
5. 5,7
6. 2
7. 4,2
8. 6,6
9. 4,3
10. 1,1