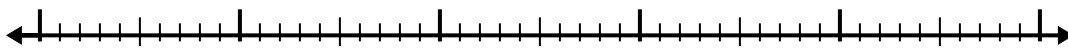


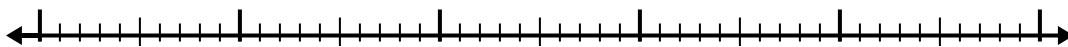


Используйте числовую линию для решения каждой проблемы.


1) $8,7 - 2,5 =$



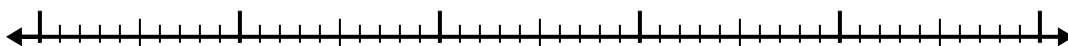
2) $10,9 - 3,4 =$



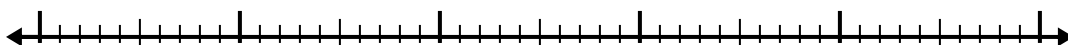
3) $4,2 - 1,8 =$



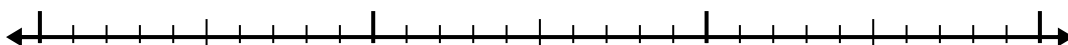
4) $8,9 - 3,2 =$



5) $8,9 - 3,2 =$



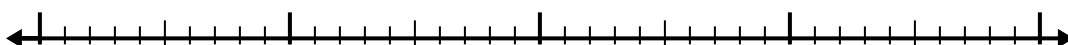
6) $7,1 - 1,9 =$




7) $6,7 - 3,1 =$




8) $9,1 - 2,2 =$



9) $10,9 - 2,5 =$



10) $9 - 1,1 =$



Ответы

1. _____

2. _____

3. _____

4. _____

5. _____

6. _____

7. _____

8. _____

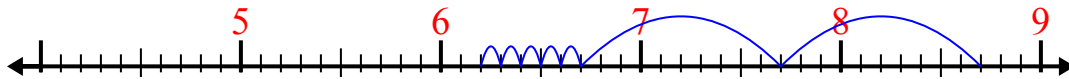
9. _____

10. _____

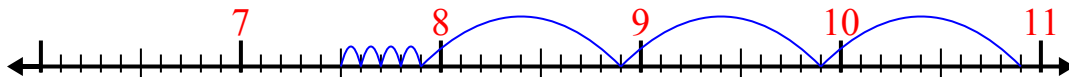


Используйте числовую линию для решения каждой проблемы.

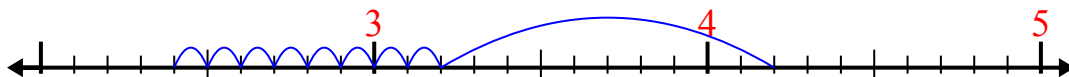
1) $8,7 - 2,5 =$



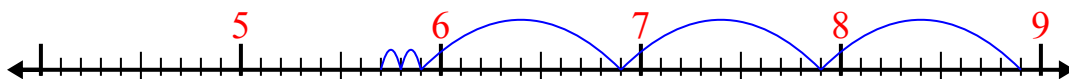
2) $10,9 - 3,4 =$



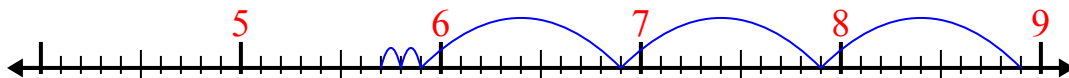
3) $4,2 - 1,8 =$




4) $8,9 - 3,2 =$



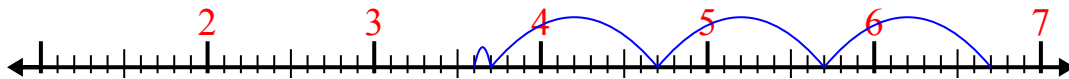
5) $8,9 - 3,2 =$



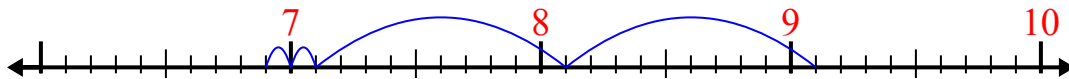
6) $7,1 - 1,9 =$



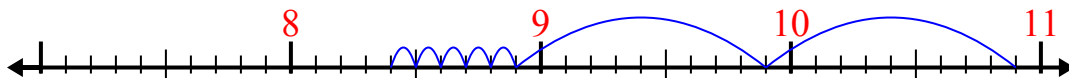
7) $6,7 - 3,1 =$



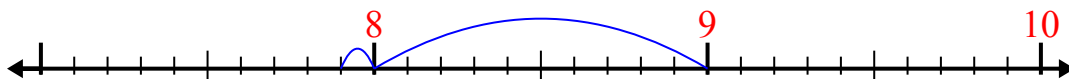
8) $9,1 - 2,2 =$



9) $10,9 - 2,5 =$



10) $9 - 1,1 =$



Отвѣты

1. 6,2

2. 7,5

3. 2,4

4. 5,7

5. 5,7

6. 5,2

7. 3,6

8. 6,9

9. 8,4

10. 7,9