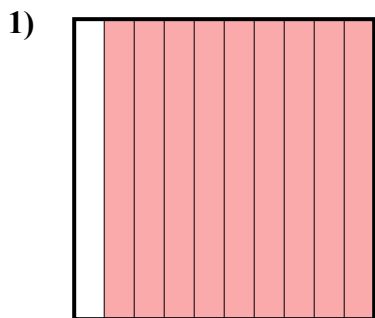


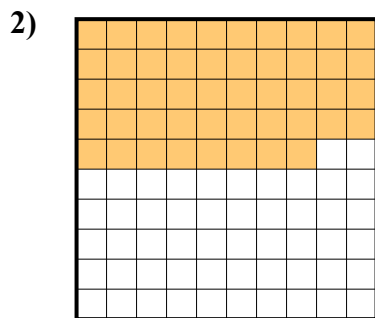


Определите под какой буквой показано значение закрашенного к целому.


ОТВЕТЫ



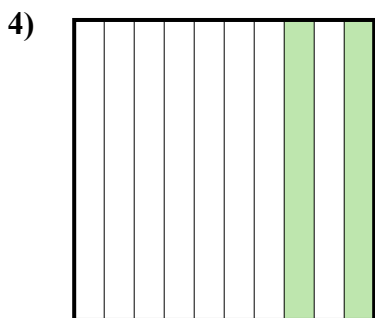
- A. 900,00
- B. 900,0
- C. 90
- D. 0,9



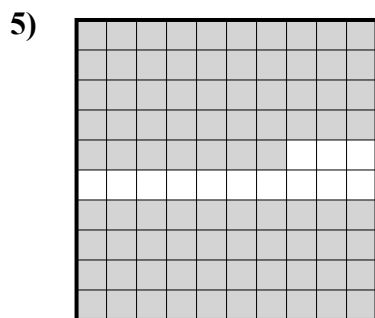
- A. 0,48
- B. 48
- C. 480,00
- D. 4,8



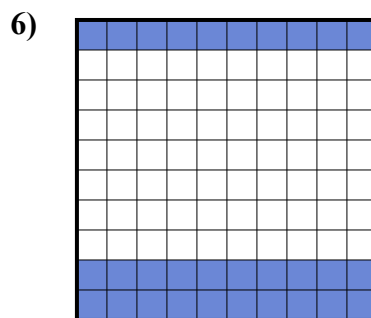
- A. 0,1
- B. 100,00
- C. 10
- D. 1



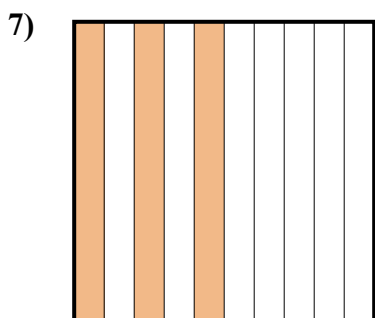
- A. 200,0
- B. 0,2
- C. 20
- D. 200,00



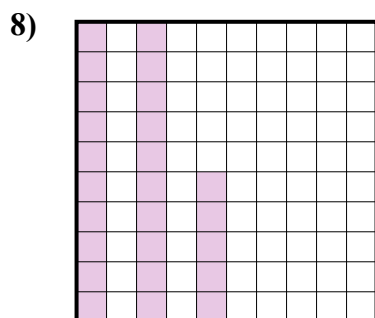
- A. 870,0
- B. 0,087
- C. 0,87
- D. 870,00




- A. 3
- B. 30
- C. 300,00
- D. 0,3



- A. 3
- B. 30
- C. 300,0
- D. 0,3



- A. 2,5
- B. 0,025
- C. 250,0
- D. 0,25



- A. 0,06
- B. 0,6
- C. 600,0
- D. 60

1. _____

2. _____

3. _____

4. _____

5. _____

6. _____

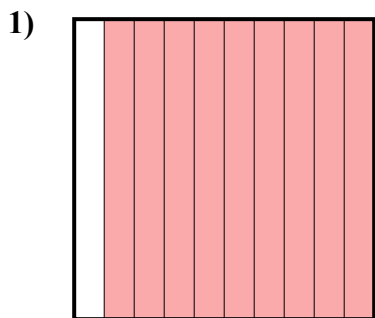
7. _____

8. _____

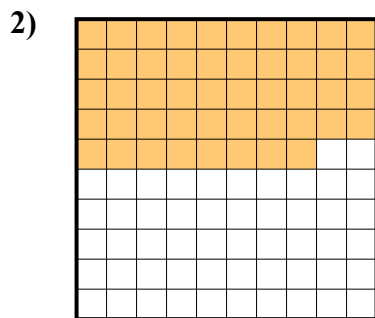
9. _____




Определите под какой буквой показано значение закрашенного к целому.



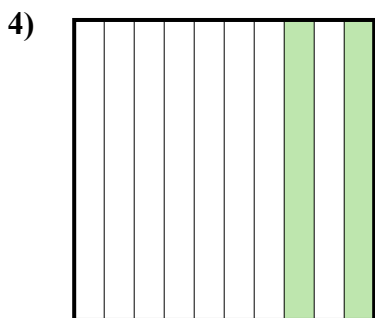
- A. 900,00
- B. 900,0
- C. 90
- D. 0,9



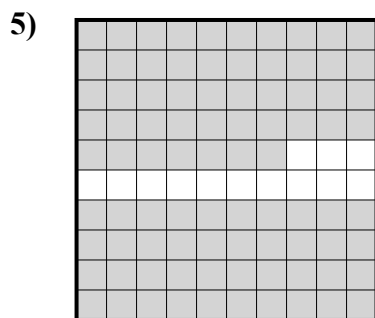
- A. 0,48
- B. 48
- C. 480,00
- D. 4,8



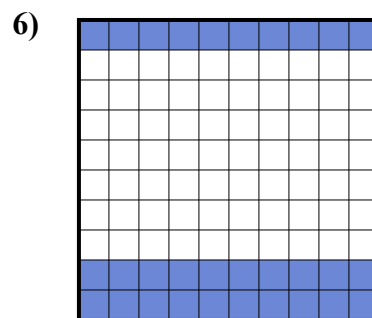
- A. 0,1
- B. 100,00
- C. 10
- D. 1



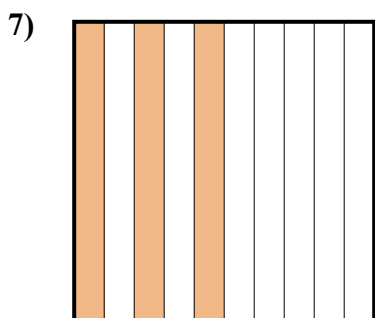
- A. 200,0
- B. 0,2
- C. 20
- D. 200,00



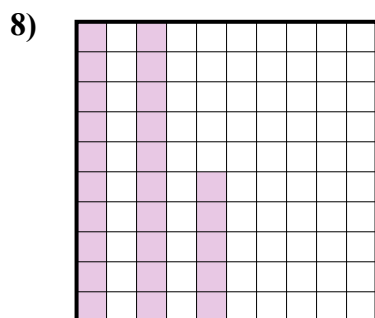
- A. 870,0
- B. 0,087
- C. 0,87
- D. 870,00




- A. 3
- B. 30
- C. 300,00
- D. 0,3



- A. 3
- B. 30
- C. 300,0
- D. 0,3



- A. 2,5
- B. 0,025
- C. 250,0
- D. 0,25



- A. 0,06
- B. 0,6
- C. 600,0
- D. 60

ОТВЕТЫ

- 1. **D**
- 2. **A**
- 3. **A**
- 4. **B**
- 5. **C**
- 6. **D**
- 7. **D**
- 8. **D**
- 9. **B**