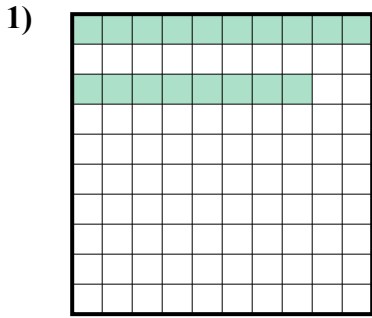


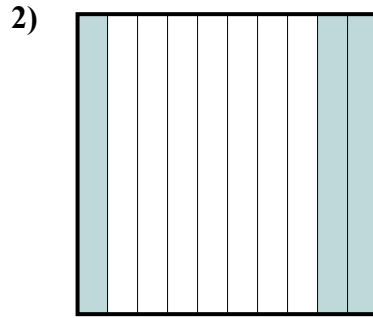


Определите под какой буквой показано значение закрашенного к целому.

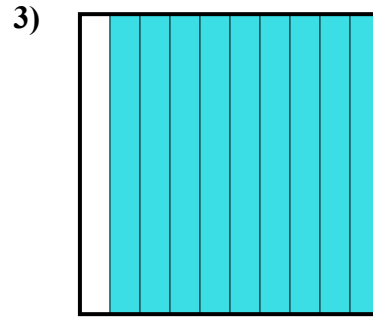
Ответы



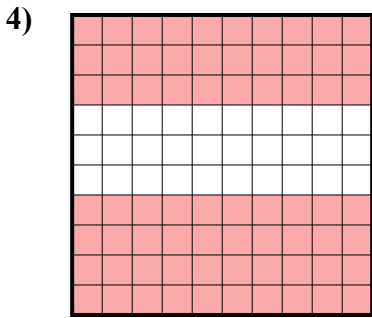
- A. 0,18
- B. 180,00
- C. 0,018
- D. 180,0



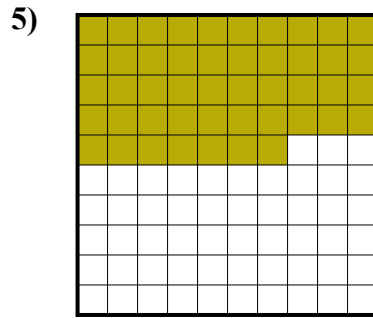
- A. 300,0
- B. 30
- C. 3
- D. 0,3




- A. 90
- B. 0,09
- C. 0,9
- D. 900,00



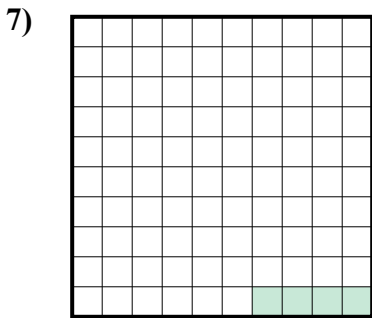
- A. 0,7
- B. 700,0
- C. 700,00
- D. 70



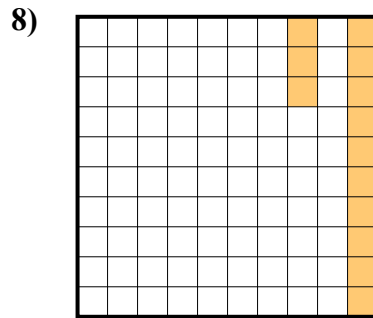
- A. 470,0
- B. 0,047
- C. 0,47
- D. 470,00



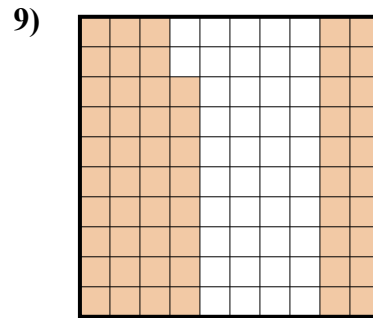
- A. 0,5
- B. 50
- C. 0,05
- D. 5



- A. 0,004
- B. 40,0
- C. 0,04
- D. 0,4



- A. 13
- B. 0,13
- C. 1,3
- D. 130,0



- A. 0,058
- B. 580,00
- C. 0,58
- D. 580,0

1. _____

2. _____

3. _____

4. _____

5. _____

6. _____

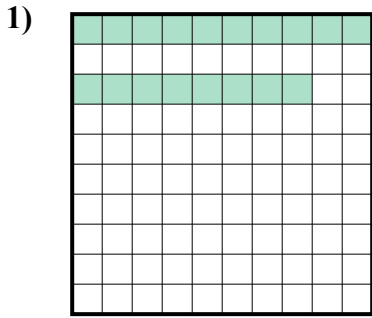
7. _____

8. _____

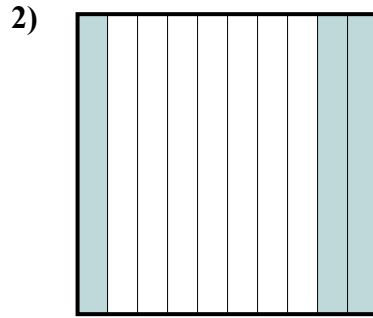
9. _____



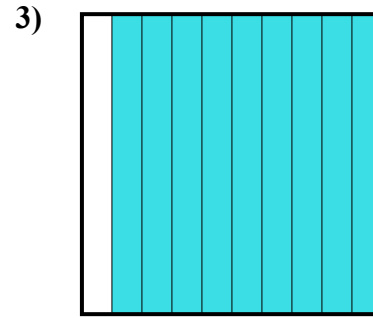
Определите под какой буквой показано значение закрашенного к целому.



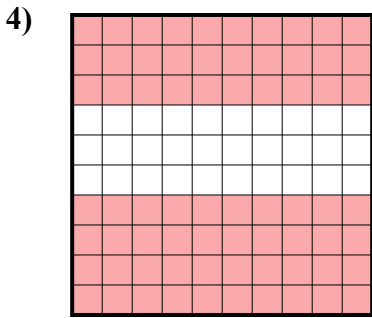
- A. 0,18
- B. 180,00
- C. 0,018
- D. 180,0



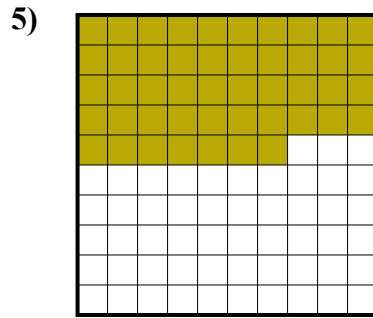
- A. 300,0
- B. 30
- C. 3
- D. 0,3




- A. 90
- B. 0,09
- C. 0,9
- D. 900,00



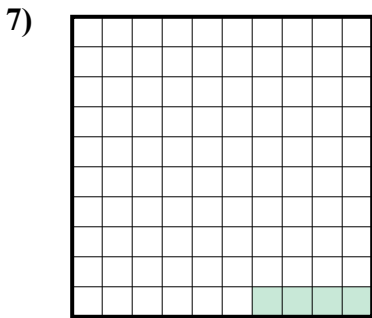
- A. 0,7
- B. 700,0
- C. 700,00
- D. 70



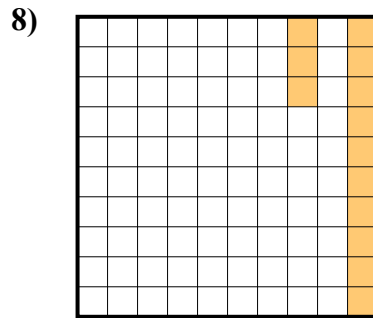
- A. 470,0
- B. 0,047
- C. 0,47
- D. 470,00



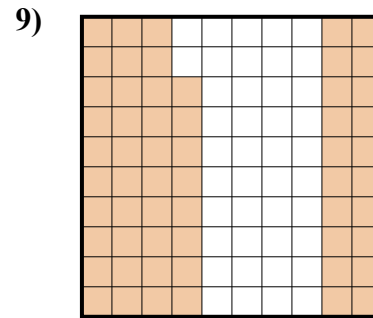
- A. 0,5
- B. 50
- C. 0,05
- D. 5



- A. 0,004
- B. 40,0
- C. 0,04
- D. 0,4



- A. 13
- B. 0,13
- C. 1,3
- D. 130,0



- A. 0,058
- B. 580,00
- C. 0,58
- D. 580,0

ОТВЕТЫ

- 1. **A**
- 2. **D**
- 3. **C**
- 4. **A**
- 5. **C**
- 6. **A**
- 7. **C**
- 8. **B**
- 9. **C**