


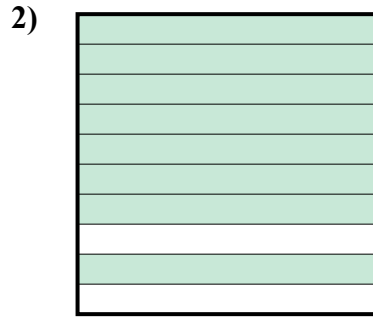


Определите под какой буквой показано значение закрашенного к целому.

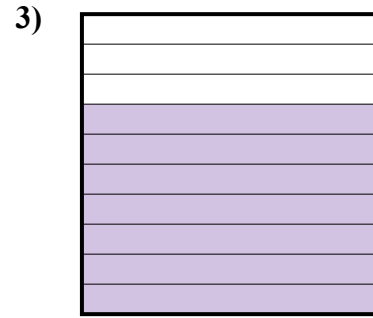
ОТВЕТЫ



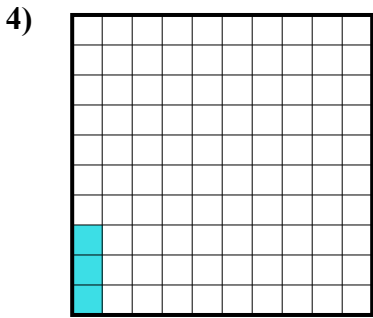
- A. 6
- B. 0,6
- C. 0,06
- D. 600,00



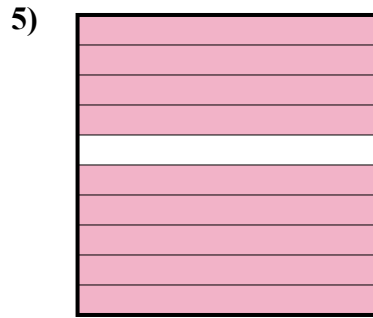
- A. 0,08
- B. 8
- C. 80
- D. 0,8



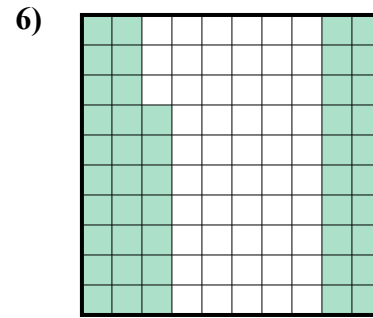
- A. 70
- B. 0,07
- C. 700,00
- D. 0,7



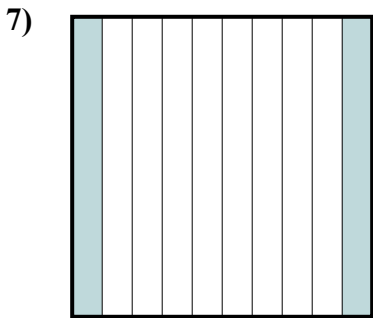
- A. 0,3
- B. 0,003
- C. 0,03
- D. 3



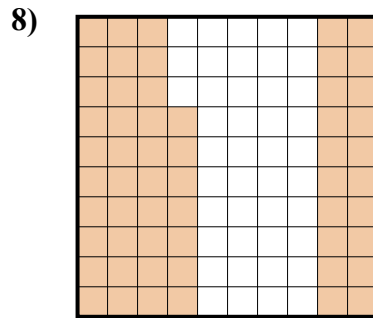
- A. 0,9
- B. 90
- C. 0,09
- D. 900,00



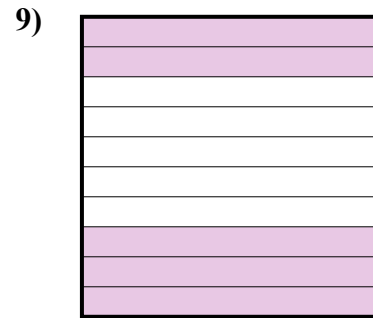
- A. 470,00
- B. 0,47
- C. 4,7
- D. 47



- A. 200,0
- B. 200,00
- C. 20
- D. 0,2



- A. 5,7
- B. 0,57
- C. 57
- D. 0,057



- A. 0,5
- B. 500,00
- C. 5
- D. 0,05

1. _____

2. _____

3. _____

4. _____

5. _____

6. _____


7. _____

8. _____

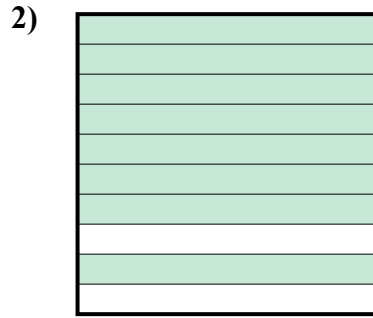
9. _____



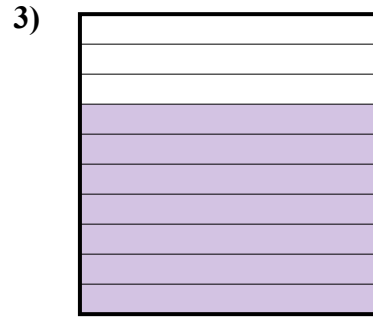
Определите под какой буквой показано значение закрашенного к целому.



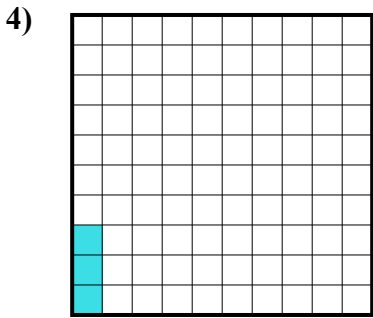
- A. 6
- B. 0,6
- C. 0,06
- D. 600,00



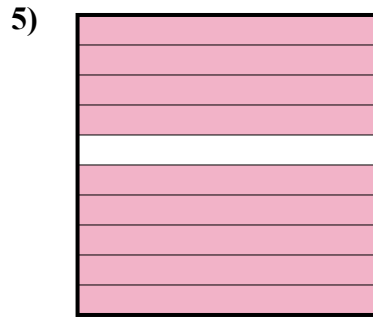
- A. 0,08
- B. 8
- C. 80
- D. 0,8



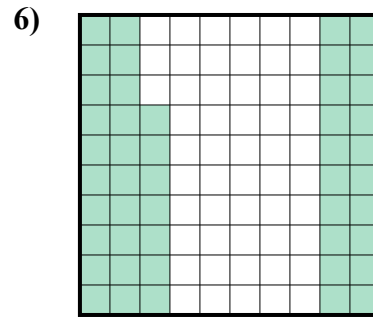
- A. 70
- B. 0,07
- C. 700,00
- D. 0,7



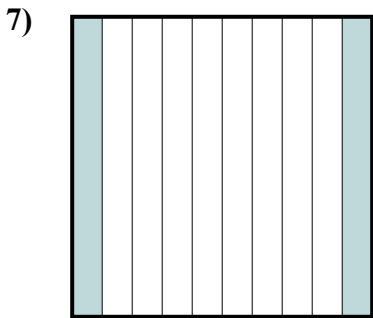
- A. 0,3
- B. 0,003
- C. 0,03
- D. 3



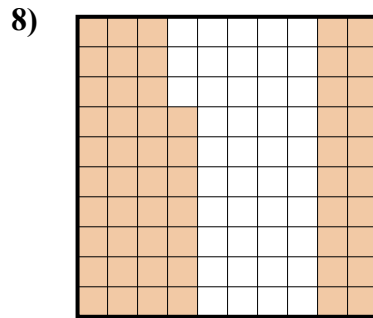
- A. 0,9
- B. 90
- C. 0,09
- D. 900,00



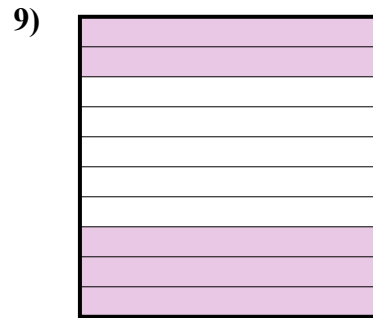
- A. 470,00
- B. 0,47
- C. 4,7
- D. 47



- A. 200,0
- B. 200,00
- C. 20
- D. 0,2



- A. 5,7
- B. 0,57
- C. 57
- D. 0,057



- A. 0,5
- B. 500,00
- C. 5
- D. 0,05

ОТВЕТЫ

- 1. **B**
- 2. **D**
- 3. **D**
- 4. **C**
- 5. **A**
- 6. **B**
- 7. **D**
- 8. **B**
- 9. **A**