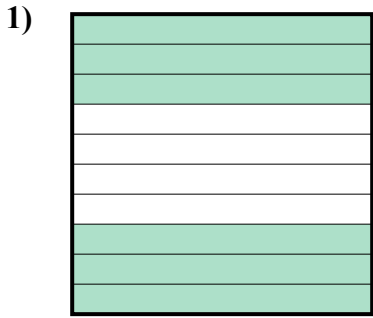


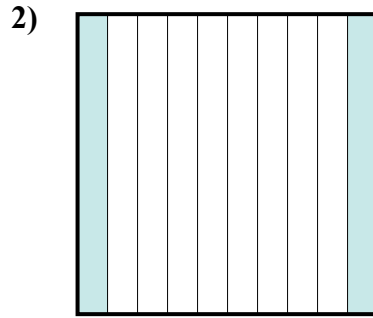


Определите под какой буквой показано значение закрашенного к целому.

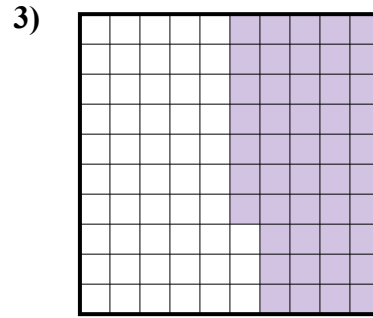
ОТВЕТЫ



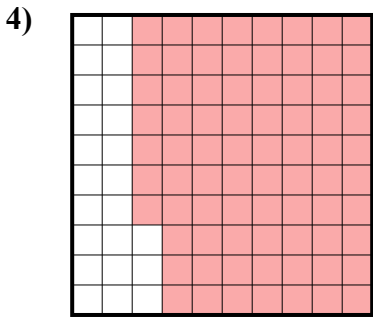
- A. 0,6
- B. 600,00
- C. 600,0
- D. 6



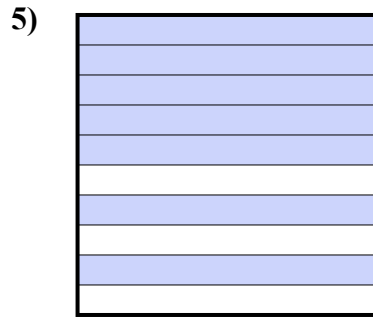
- A. 2
- B. 200,00
- C. 20
- D. 0,2



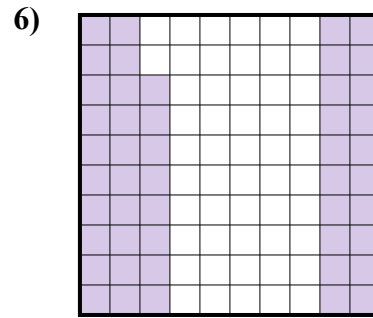
- A. 470,00
- B. 0,047
- C. 0,47
- D. 47



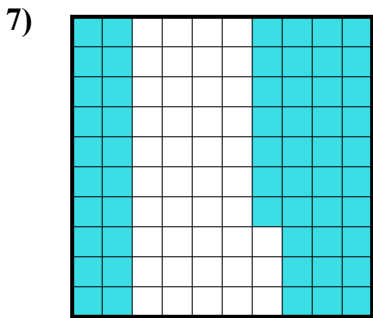
- A. 77
- B. 770,00
- C. 0,077
- D. 0,77



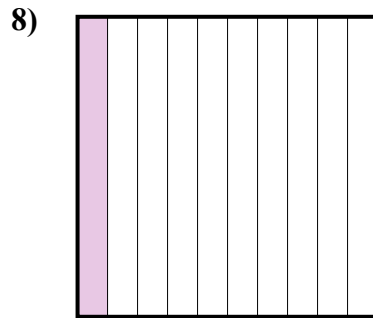
- A. 700,0
- B. 70
- C. 0,7
- D. 0,07



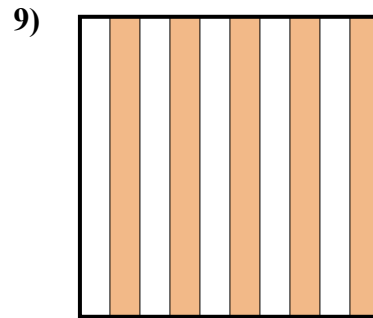
- A. 48
- B. 480,00
- C. 480,0
- D. 0,48



- A. 5,7
- B. 570,00
- C. 0,57
- D. 57



- A. 1
- B. 0,1
- C. 10
- D. 100,0



- A. 0,5
- B. 50
- C. 500,00
- D. 5

1. _____

2. _____

3. _____

4. _____

5. _____

6. _____


7. _____

8. _____

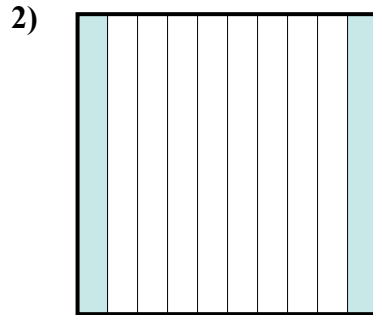
9. _____



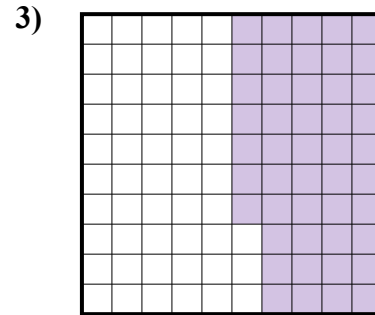
Определите под какой буквой показано значение закрашенного к целому.



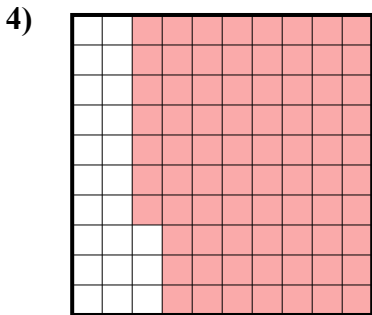
- A. 0,6
- B. 600,00
- C. 600,0
- D. 6




- A. 2
- B. 200,00
- C. 20
- D. 0,2



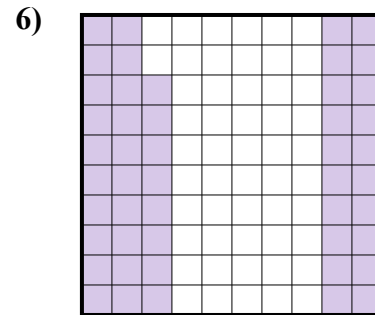
- A. 470,00
- B. 0,047
- C. 0,47
- D. 47



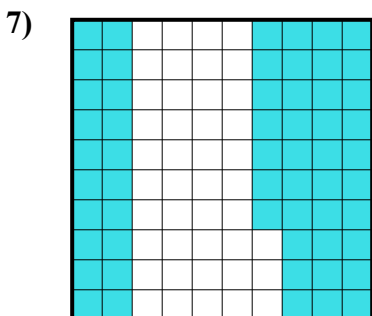
- A. 77
- B. 770,00
- C. 0,077
- D. 0,77



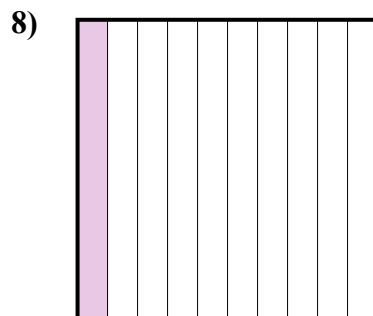
- A. 700,0
- B. 70
- C. 0,7
- D. 0,07



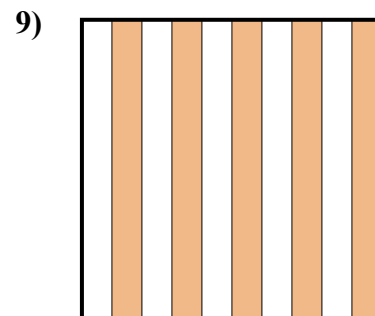
- A. 48
- B. 480,00
- C. 480,0
- D. 0,48



- A. 5,7
- B. 570,00
- C. 0,57
- D. 57



- A. 1
- B. 0,1
- C. 10
- D. 100,0



- A. 0,5
- B. 50
- C. 500,00
- D. 5

ОТВЕТЫ

- 1. **A**
- 2. **D**
- 3. **C**
- 4. **D**
- 5. **C**
- 6. **D**
- 7. **C**
- 8. **B**
- 9. **A**