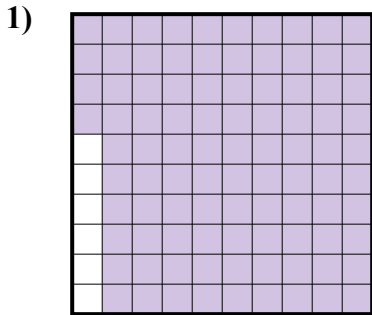


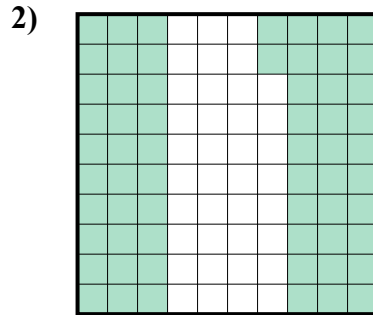


Определите под какой буквой показано значение закрашенного к целому.

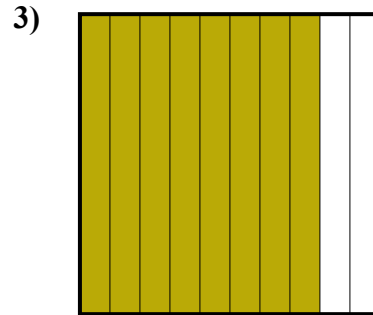
ОТВЕТЫ



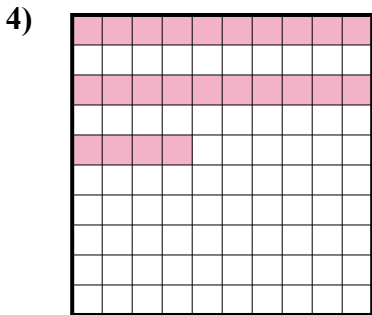
- A. 940,0
- B. 0,94
- C. 94
- D. 940,00



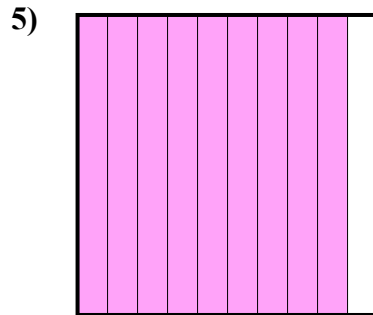
- A. 6,2
- B. 0,62
- C. 620,00
- D. 620,0



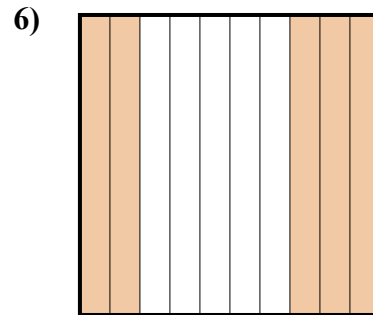
- A. 800,0
- B. 0,08
- C. 800,00
- D. 0,8



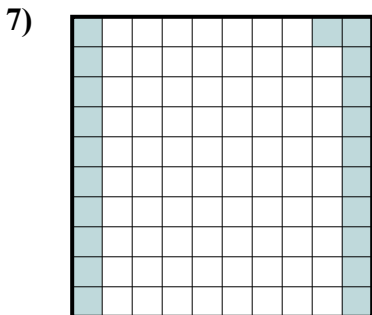
- A. 24
- B. 0,24
- C. 2,4
- D. 0,024



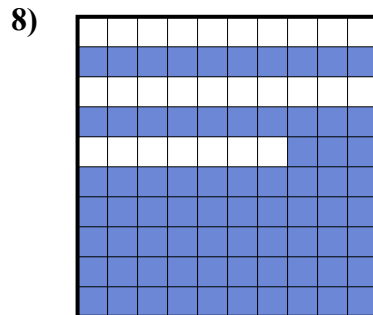
- A. 9
- B. 0,9
- C. 0,09
- D. 900,00




- A. 5
- B. 500,0
- C. 0,05
- D. 0,5



- A. 0,21
- B. 21
- C. 0,021
- D. 210,0



- A. 0,073
- B. 0,73
- C. 730,0
- D. 7,3



- A. 300,00
- B. 3
- C. 0,03
- D. 0,3

1. _____

2. _____

3. _____

4. _____

5. _____

6. _____

7. _____

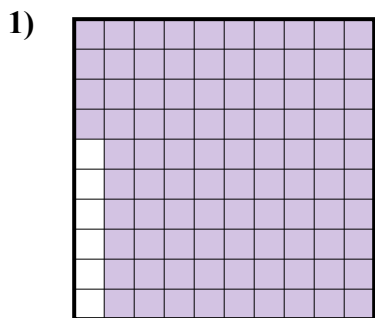
8. _____

9. _____

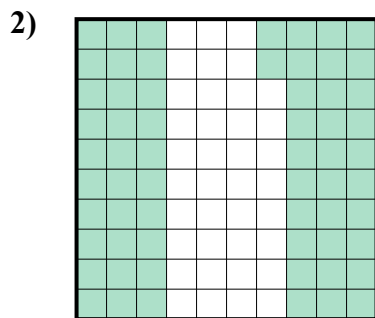


Определите под какой буквой показано значение закрашенного к целому.

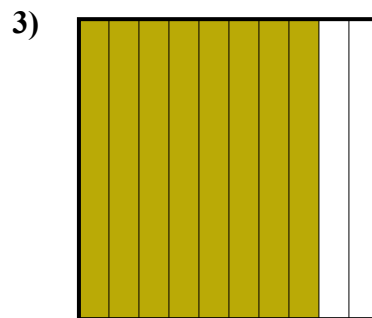
ОТВЕТЫ



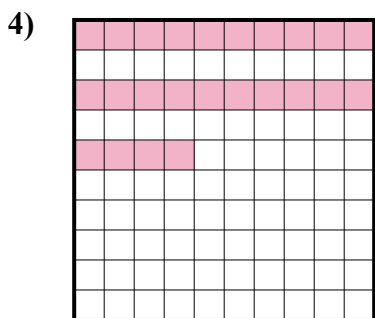
- A. 940,0
- B. 0,94
- C. 94
- D. 940,00



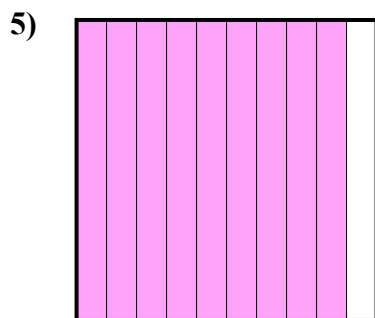
- A. 6,2
- B. 0,62
- C. 620,00
- D. 620,0



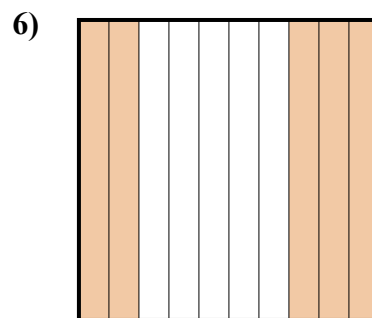
- A. 800,0
- B. 0,08
- C. 800,00
- D. 0,8



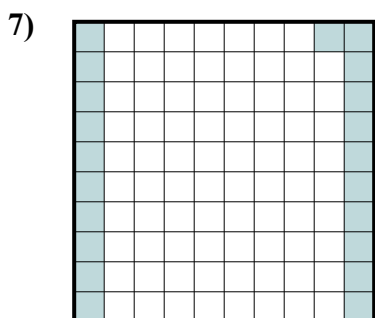
- A. 24
- B. 0,24
- C. 2,4
- D. 0,024



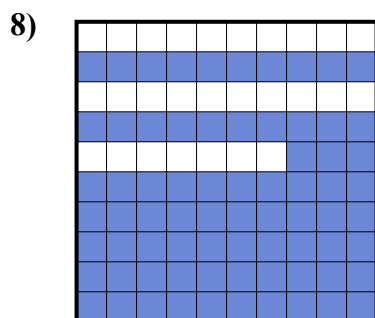
- A. 9
- B. 0,9
- C. 0,09
- D. 900,00



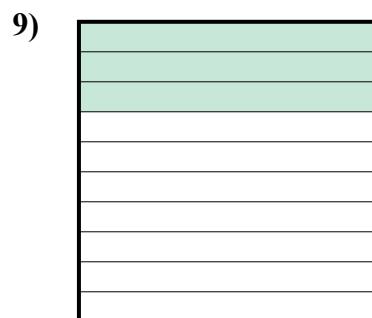
- A. 5
- B. 500,0
- C. 0,05
- D. 0,5



- A. 0,21
- B. 21
- C. 0,021
- D. 210,0



- A. 0,073
- B. 0,73
- C. 730,0
- D. 7,3



- A. 300,00
- B. 3
- C. 0,03
- D. 0,3

- 1. **B**
- 2. **B**
- 3. **D**
- 4. **B**
- 5. **B**
- 6. **D**
- 7. **A**
- 8. **B**
- 9. **D**