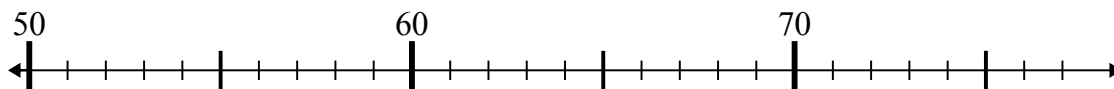




Используйте числовые прямые для решения примеров.

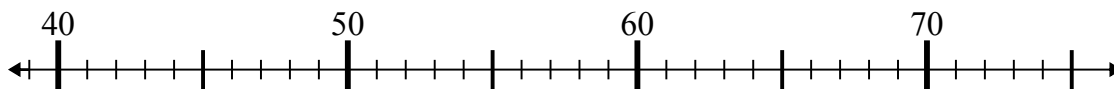
Ответы

1) $70 - 16 =$



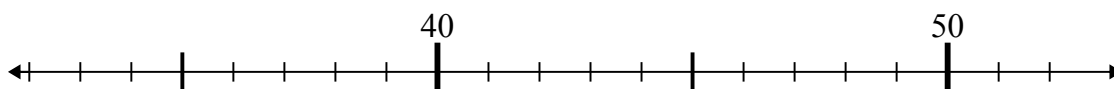
1. _____

2) $39 + 6 =$



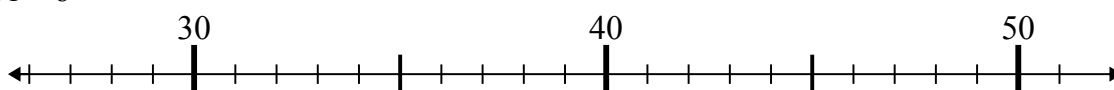
2. _____

3) $46 + 3 =$



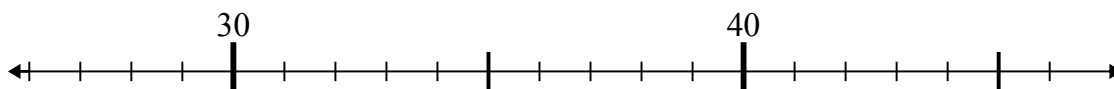
3. _____

4) $31 + 8 =$



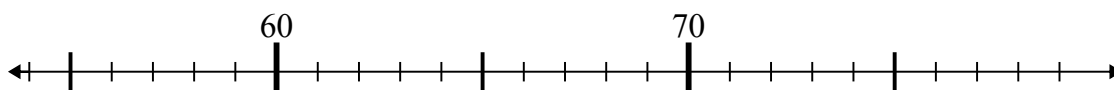
4. _____

5) $36 - 1 =$



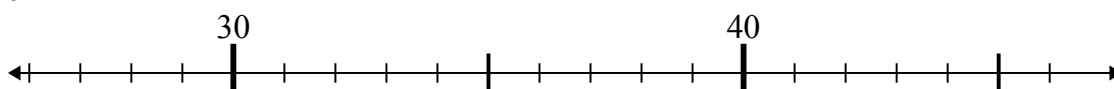
5. _____

6) $70 + 8 =$



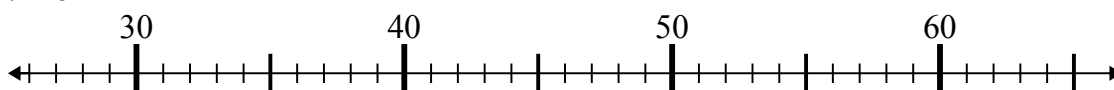
6. _____

7) $46 - 1 =$



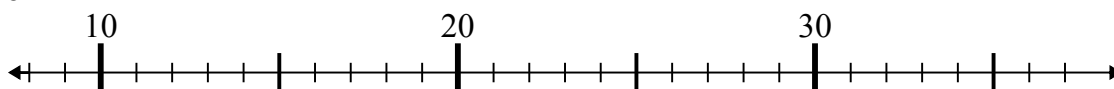
7. _____

8) $27 + 8 =$



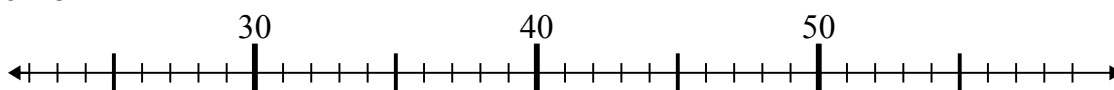
8. _____

9) $18 + 1 =$



9. _____

10) $25 + 3 =$

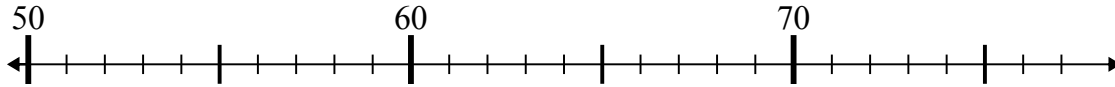


10. _____

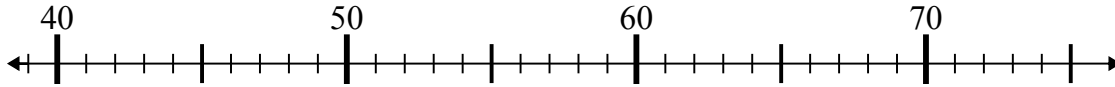


Используйте числовые прямые для решения примеров.

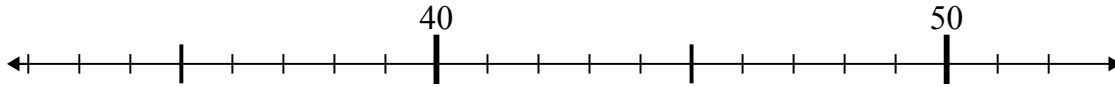
1) $70 - 16 =$



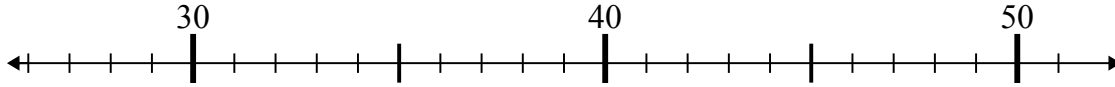
2) $39 + 6 =$



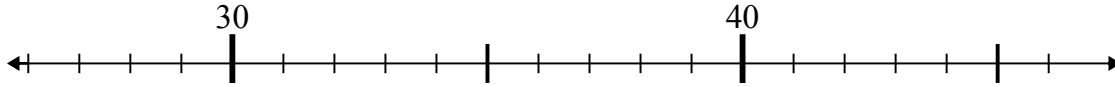
3) $46 + 3 =$



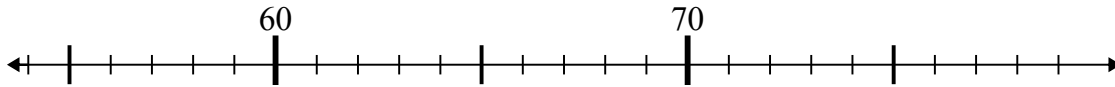
4) $31 + 8 =$



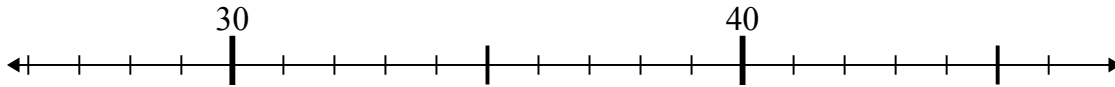
5) $36 - 1 =$



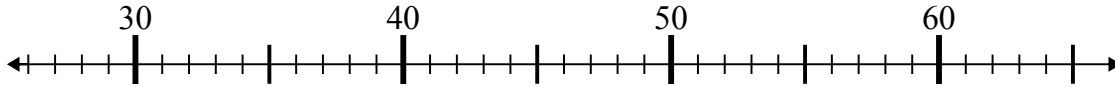
6) $70 + 8 =$



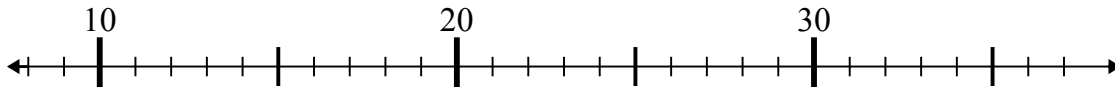
7) $46 - 1 =$



8) $27 + 8 =$



9) $18 + 1 =$



10) $25 + 3 =$

**Отв**еты1. 542. 453. 494. 395. 356. 787. 458. 359. 1910. 28