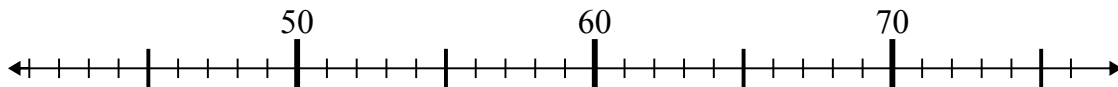




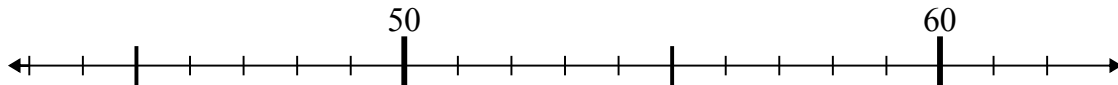
Используйте числовые прямые для решения примеров.

Ответы

1)  $52 - 10 =$



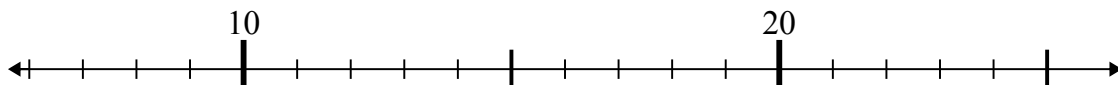
2)  $60 - 1 =$



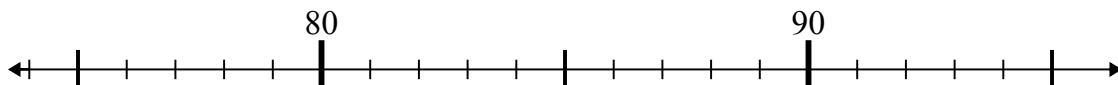
3)  $58 - 6 =$



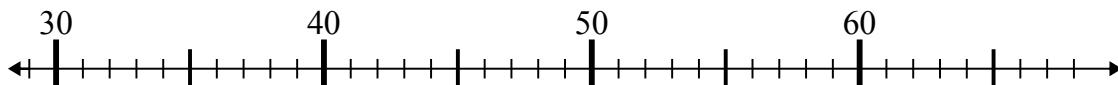
4)  $13 - 1 =$



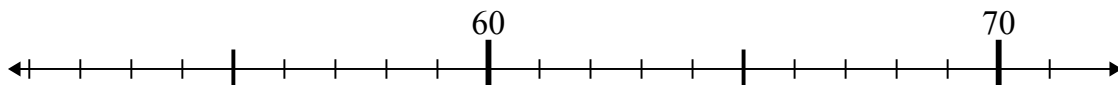
5)  $86 + 9 =$



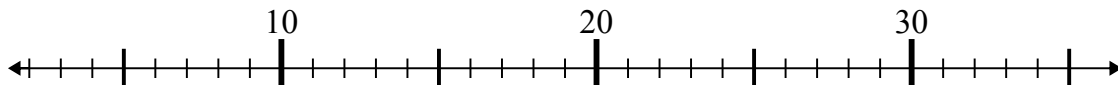
6)  $31 + 26 =$



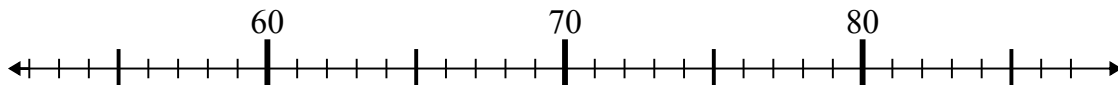
7)  $55 + 2 =$



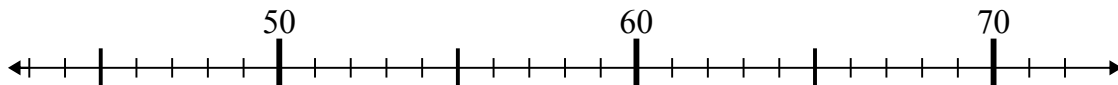
8)  $35 - 18 =$



9)  $76 - 24 =$



10)  $46 + 15 =$

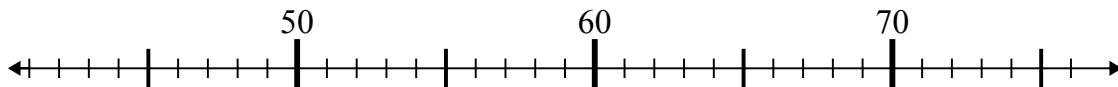


1. \_\_\_\_\_
2. \_\_\_\_\_
3. \_\_\_\_\_
4. \_\_\_\_\_
5. \_\_\_\_\_
6. \_\_\_\_\_
7. \_\_\_\_\_
8. \_\_\_\_\_
9. \_\_\_\_\_
10. \_\_\_\_\_

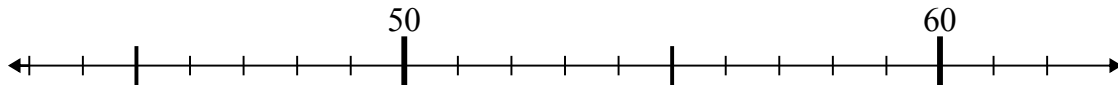


Используйте числовые прямые для решения примеров.

1)  $52 - 10 =$



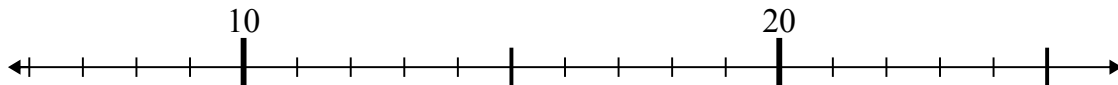
2)  $60 - 1 =$



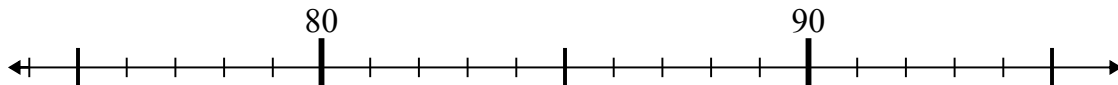
3)  $58 - 6 =$



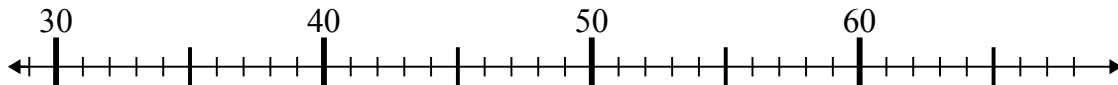
4)  $13 - 1 =$



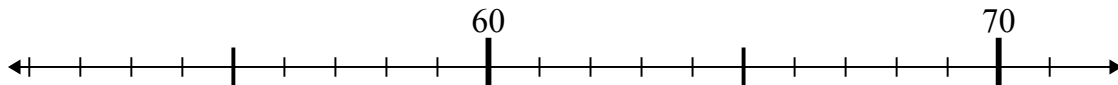
5)  $86 + 9 =$



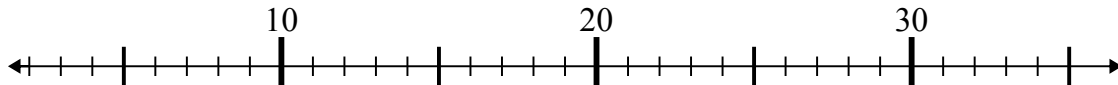
6)  $31 + 26 =$



7)  $55 + 2 =$



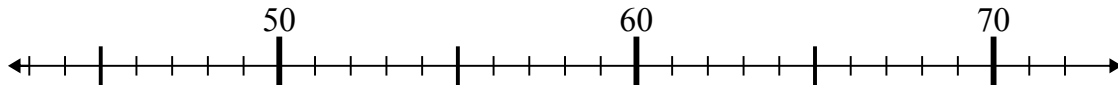
8)  $35 - 18 =$



9)  $76 - 24 =$



10)  $46 + 15 =$

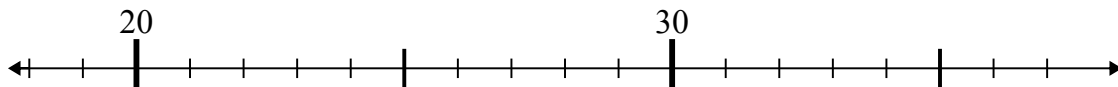
Ответы1. 422. 593. 524. 125. 956. 577. 578. 179. 5210. 61



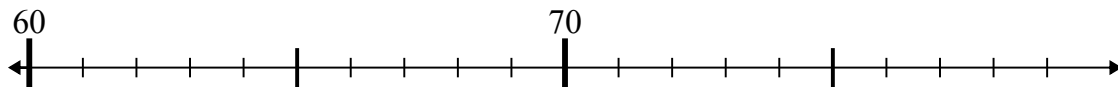
Используйте числовые прямые для решения примеров.

**Ответы**

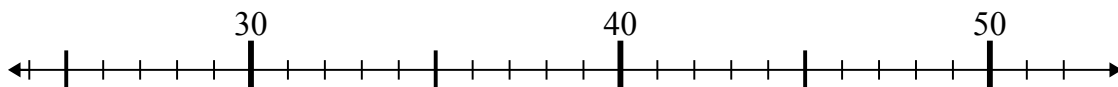
1)  $23 - 4 =$



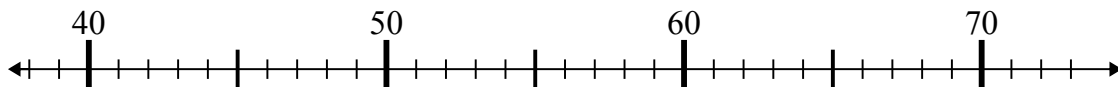
2)  $73 - 6 =$



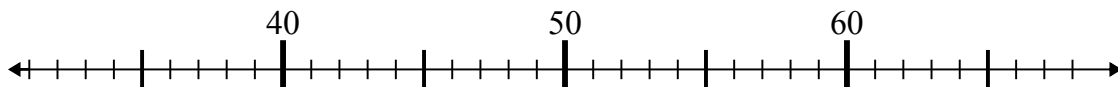
3)  $44 + 2 =$



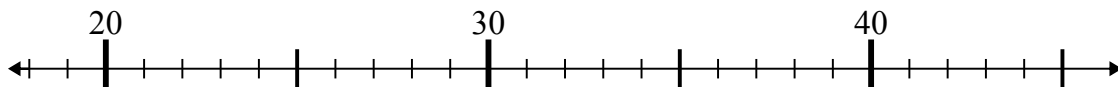
4)  $42 + 1 =$



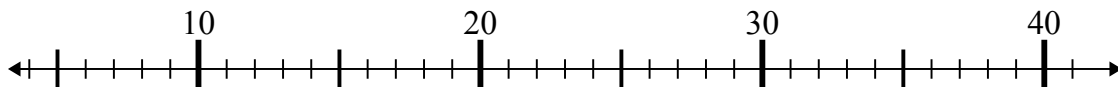
5)  $40 + 13 =$



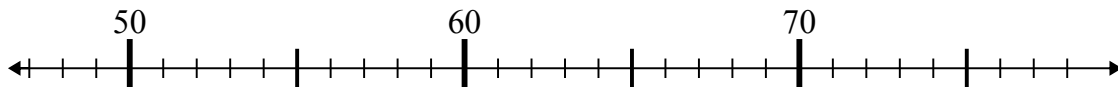
6)  $26 + 0 =$



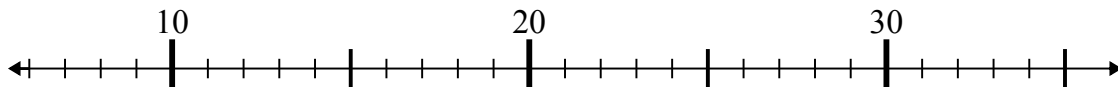
7)  $36 - 27 =$



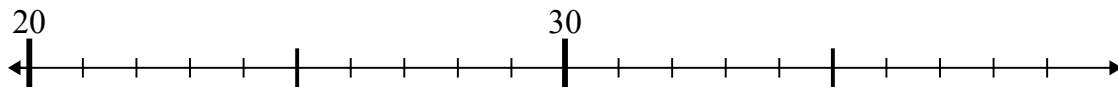
8)  $54 - 5 =$



9)  $10 + 1 =$



10)  $24 + 1 =$

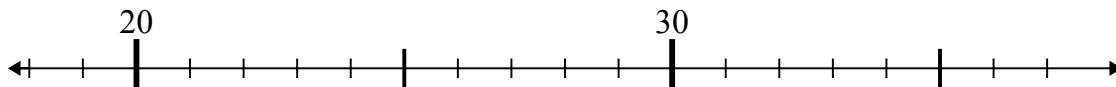


- 1. \_\_\_\_\_
- 2. \_\_\_\_\_
- 3. \_\_\_\_\_
- 4. \_\_\_\_\_
- 5. \_\_\_\_\_
- 6. \_\_\_\_\_
- 7. \_\_\_\_\_
- 8. \_\_\_\_\_
- 9. \_\_\_\_\_
- 10. \_\_\_\_\_



Используйте числовые прямые для решения примеров.

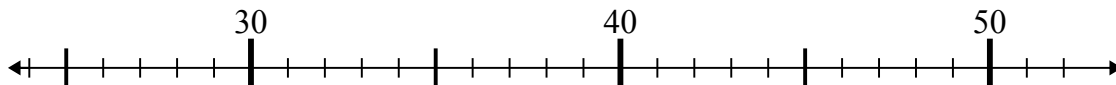
1)  $23 - 4 =$



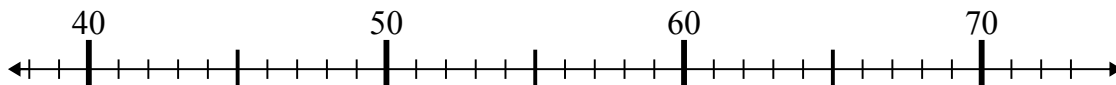
2)  $73 - 6 =$



3)  $44 + 2 =$



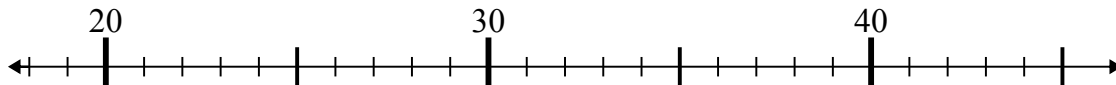
4)  $42 + 1 =$



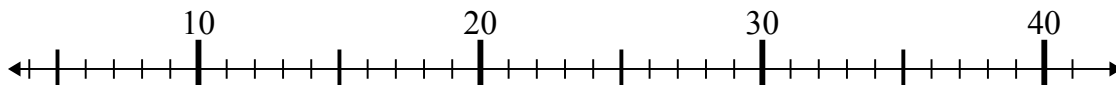
5)  $40 + 13 =$



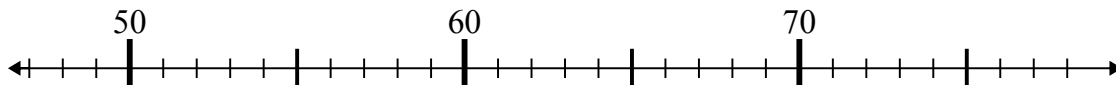
6)  $26 + 0 =$



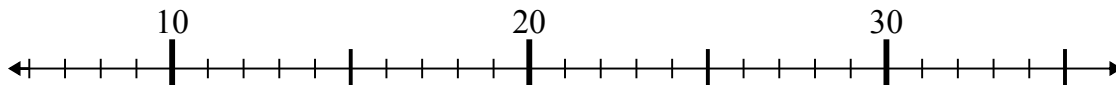
7)  $36 - 27 =$



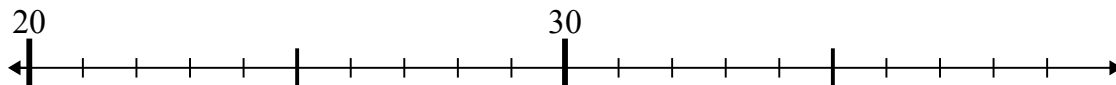
8)  $54 - 5 =$



9)  $10 + 1 =$



10)  $24 + 1 =$

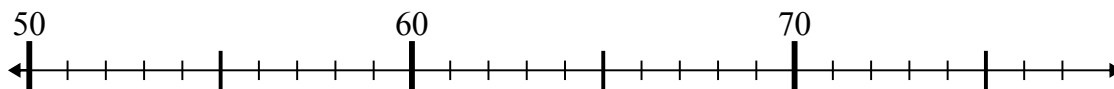
Ответы1. 192. 673. 464. 435. 536. 267. 98. 499. 1110. 25



Используйте числовые прямые для решения примеров.

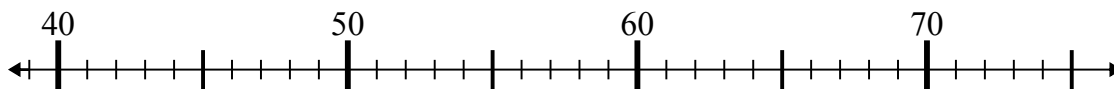
**Ответы**

1)  $70 - 16 =$



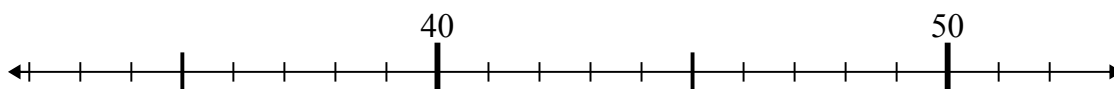
1. \_\_\_\_\_

2)  $39 + 6 =$



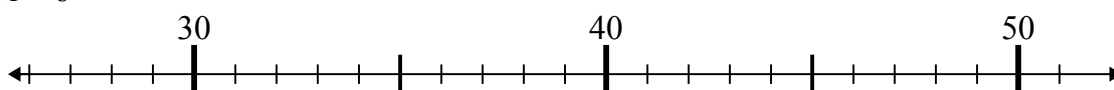
2. \_\_\_\_\_

3)  $46 + 3 =$



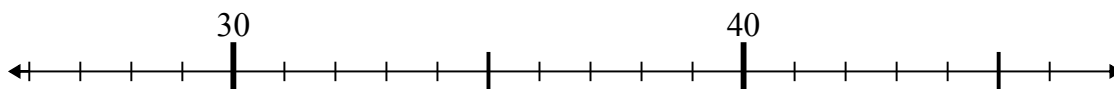
3. \_\_\_\_\_

4)  $31 + 8 =$



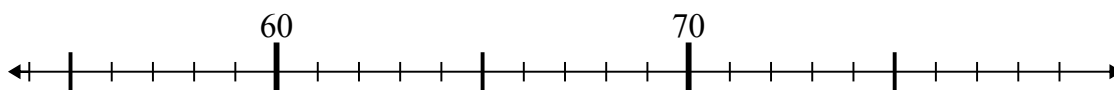
4. \_\_\_\_\_

5)  $36 - 1 =$



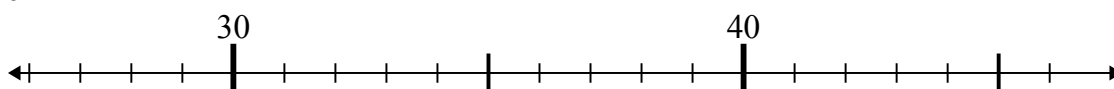
5. \_\_\_\_\_

6)  $70 + 8 =$



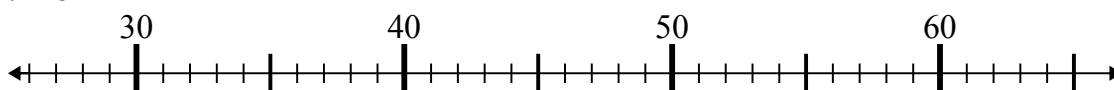
6. \_\_\_\_\_

7)  $46 - 1 =$



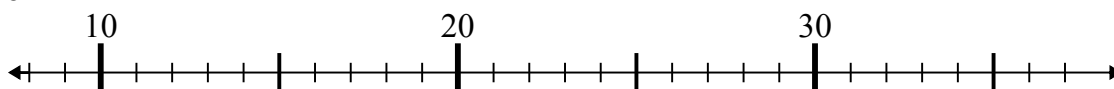
7. \_\_\_\_\_

8)  $27 + 8 =$



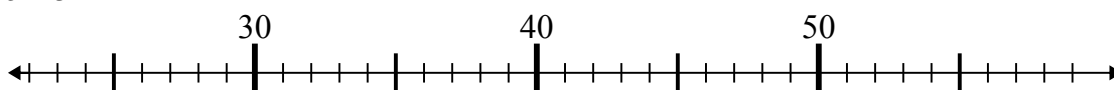
8. \_\_\_\_\_

9)  $18 + 1 =$



9. \_\_\_\_\_

10)  $25 + 3 =$

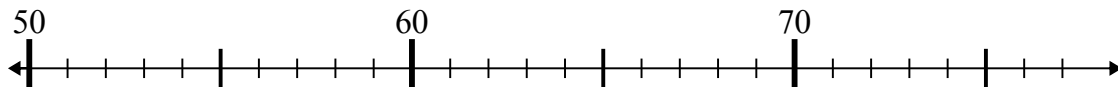


10. \_\_\_\_\_

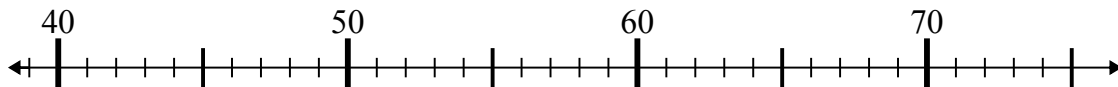


Используйте числовые прямые для решения примеров.

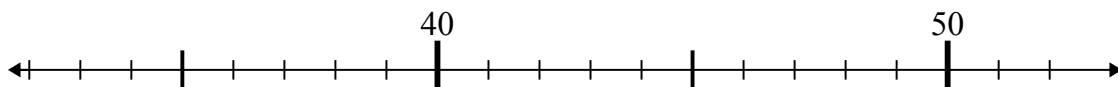
1)  $70 - 16 =$



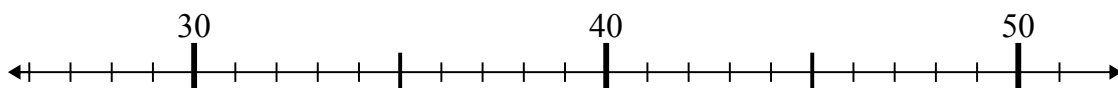
2)  $39 + 6 =$



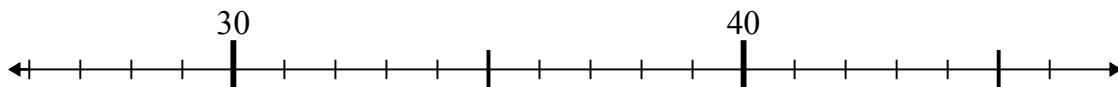
3)  $46 + 3 =$



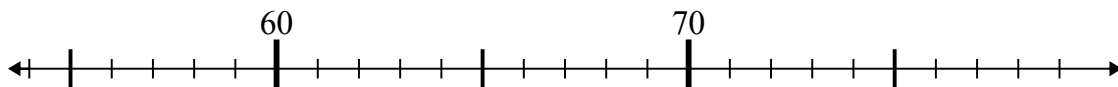
4)  $31 + 8 =$



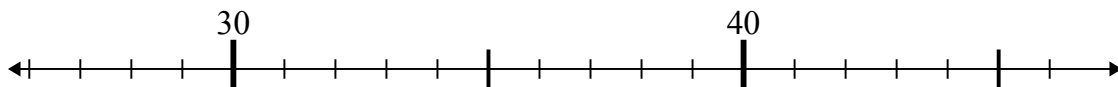
5)  $36 - 1 =$



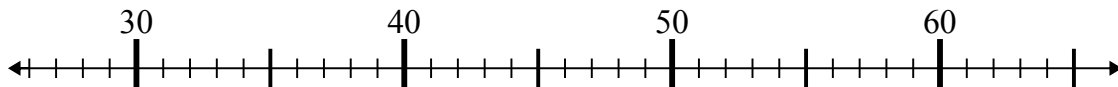
6)  $70 + 8 =$



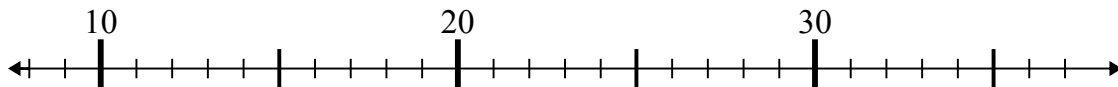
7)  $46 - 1 =$



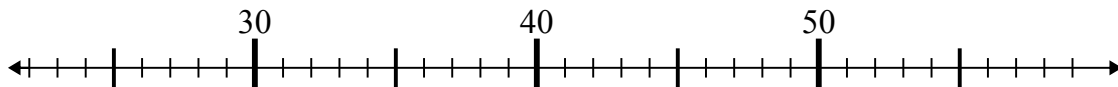
8)  $27 + 8 =$



9)  $18 + 1 =$



10)  $25 + 3 =$

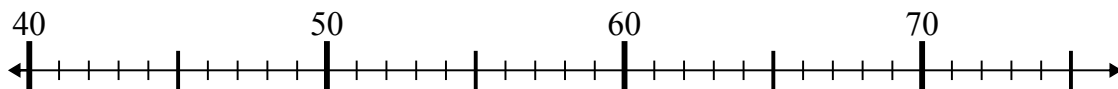
Ответы1. 542. 453. 494. 395. 356. 787. 458. 359. 1910. 28



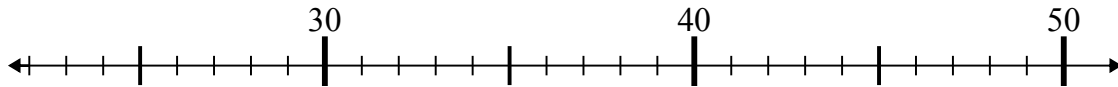
Используйте числовые прямые для решения примеров.

**Ответы**

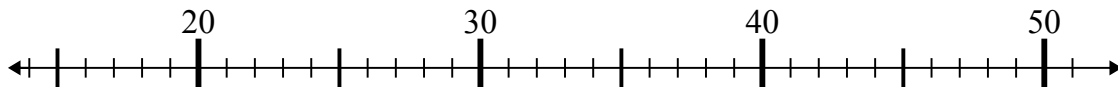
1)  $46 - 5 =$



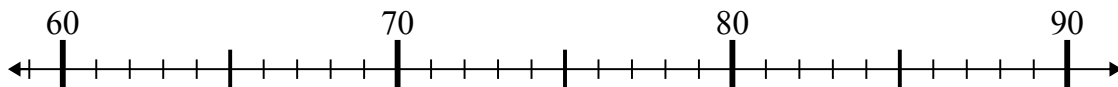
2)  $22 + 19 =$



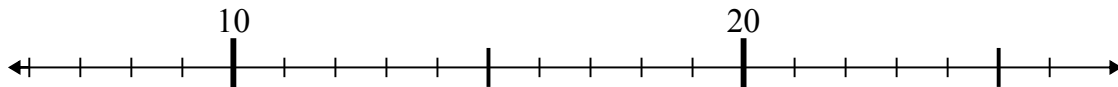
3)  $21 + 25 =$



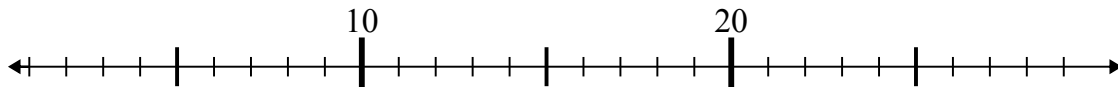
4)  $73 + 15 =$



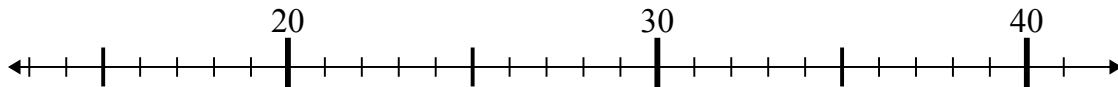
5)  $11 + 2 =$



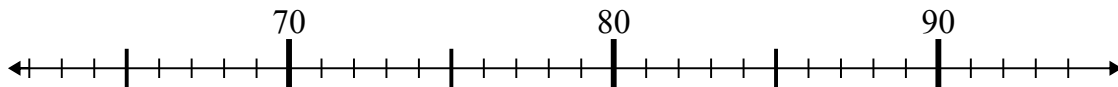
6)  $5 + 1 =$



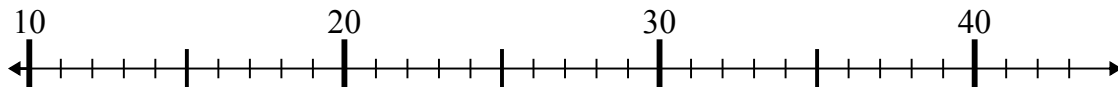
7)  $23 + 4 =$



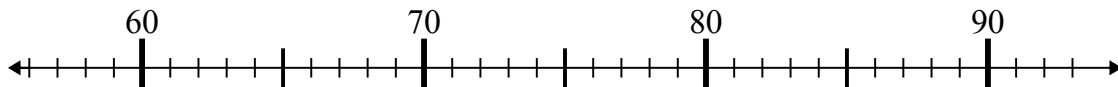
8)  $82 - 14 =$



9)  $22 - 10 =$



10)  $65 + 1 =$

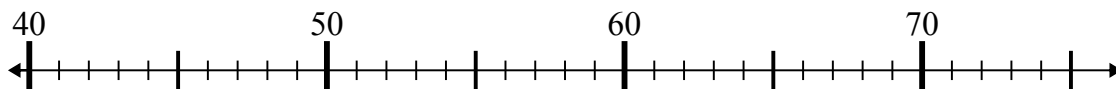


1. \_\_\_\_\_
2. \_\_\_\_\_
3. \_\_\_\_\_
4. \_\_\_\_\_
5. \_\_\_\_\_
6. \_\_\_\_\_
7. \_\_\_\_\_
8. \_\_\_\_\_
9. \_\_\_\_\_
10. \_\_\_\_\_

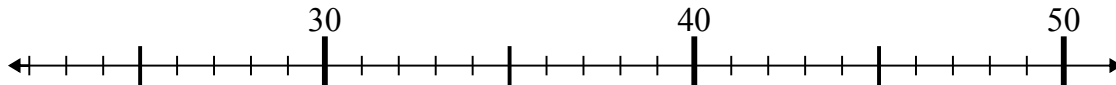


Используйте числовые прямые для решения примеров.

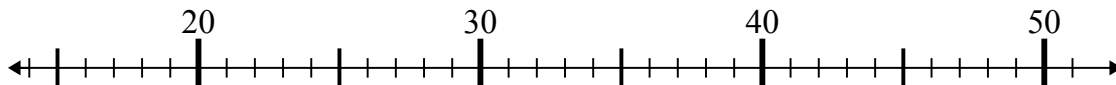
1)  $46 - 5 =$



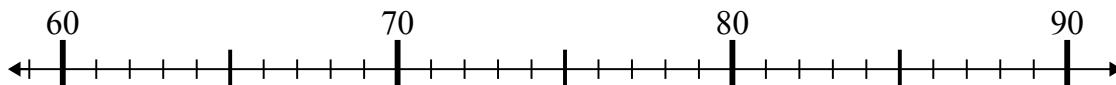
2)  $22 + 19 =$



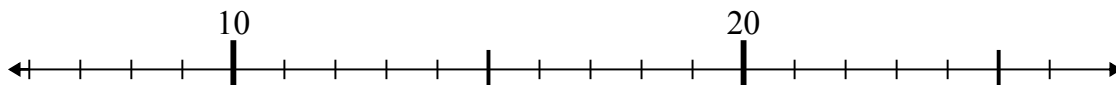
3)  $21 + 25 =$



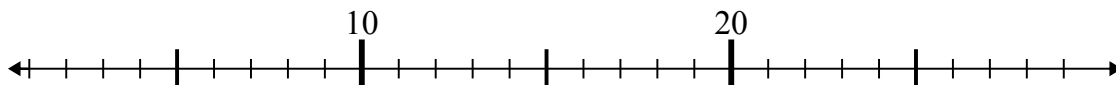
4)  $73 + 15 =$



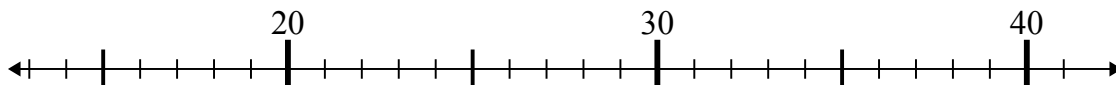
5)  $11 + 2 =$



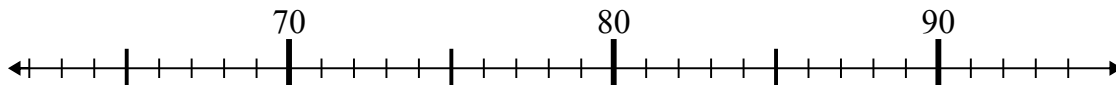
6)  $5 + 1 =$



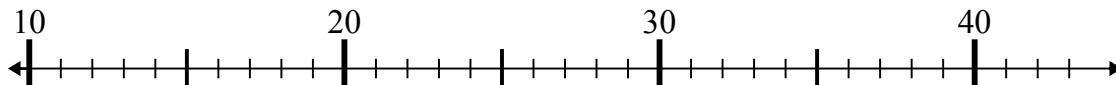
7)  $23 + 4 =$



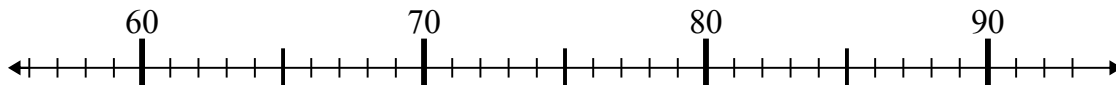
8)  $82 - 14 =$



9)  $22 - 10 =$



10)  $65 + 1 =$

Ответы1. 412. 413. 464. 885. 136. 67. 278. 689. 1210. 66

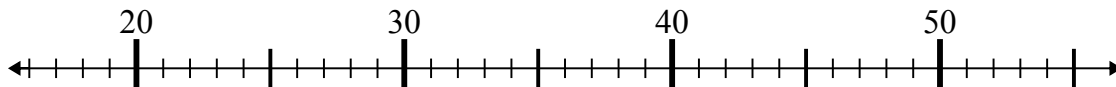




Используйте числовые прямые для решения примеров.

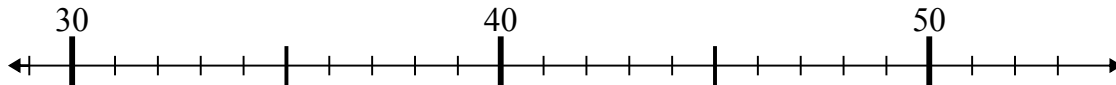
Ответы

1)  $26 - 4 =$



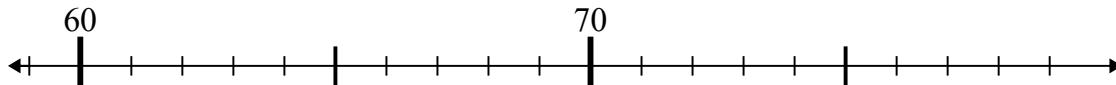
1. \_\_\_\_\_

2)  $45 - 2 =$



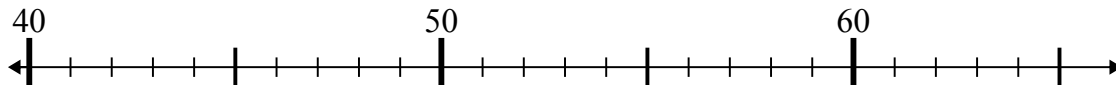
2. \_\_\_\_\_

3)  $62 + 14 =$



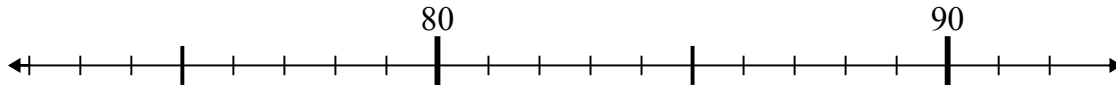
3. \_\_\_\_\_

4)  $51 - 7 =$



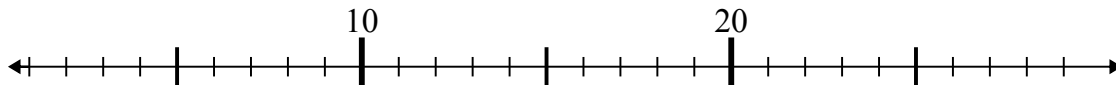
4. \_\_\_\_\_

5)  $76 + 1 =$



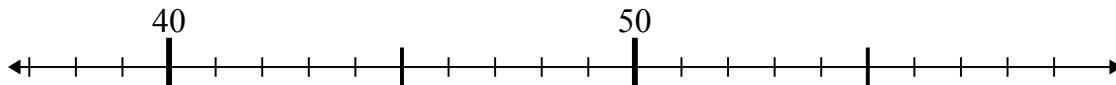
5. \_\_\_\_\_

6)  $27 - 21 =$



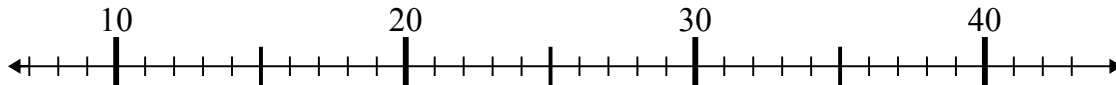
6. \_\_\_\_\_

7)  $55 - 15 =$



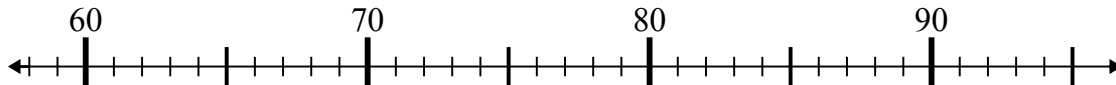
7. \_\_\_\_\_

8)  $31 - 17 =$



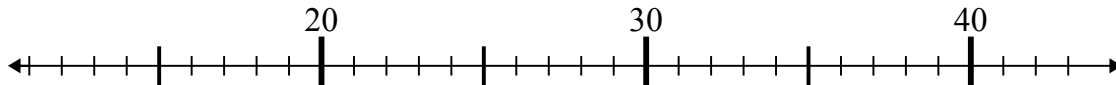
8. \_\_\_\_\_

9)  $66 + 9 =$



9. \_\_\_\_\_

10)  $27 + 15 =$

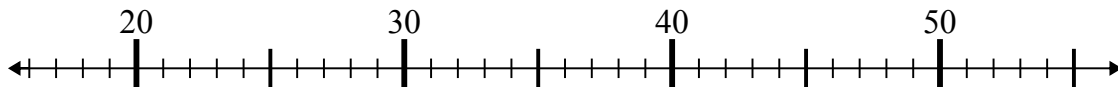


10. \_\_\_\_\_

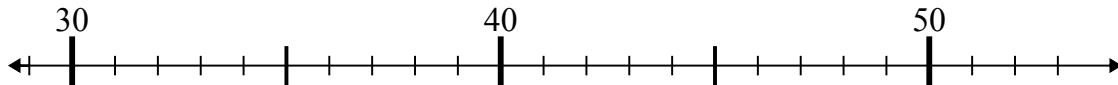


Используйте числовые прямые для решения примеров.

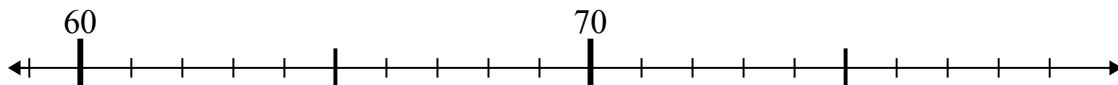
1)  $26 - 4 =$



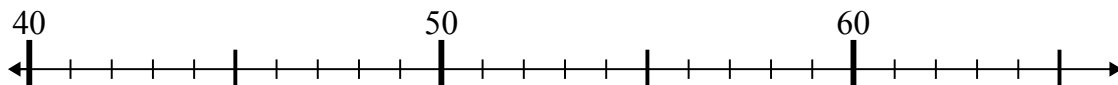
2)  $45 - 2 =$



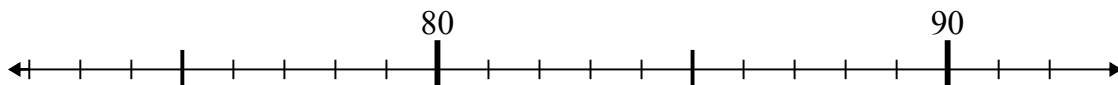
3)  $62 + 14 =$



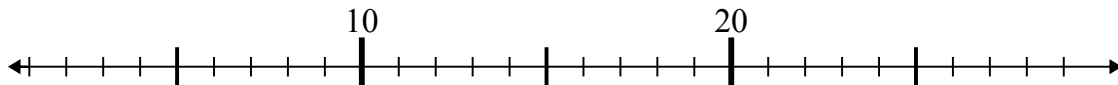
4)  $51 - 7 =$



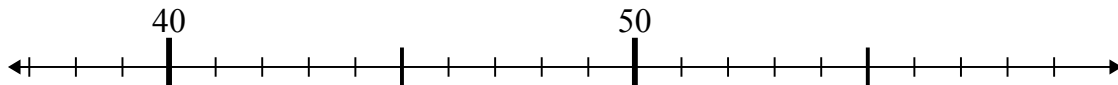
5)  $76 + 1 =$



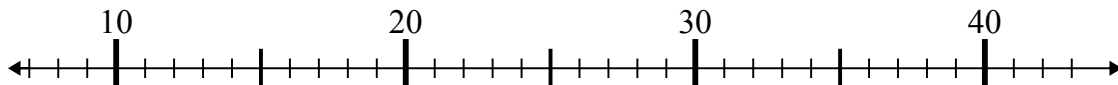
6)  $27 - 21 =$



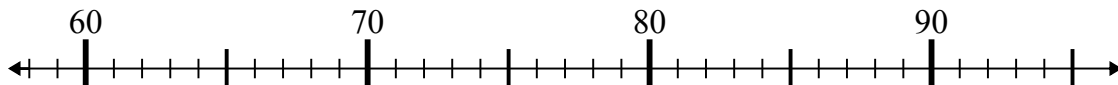
7)  $55 - 15 =$



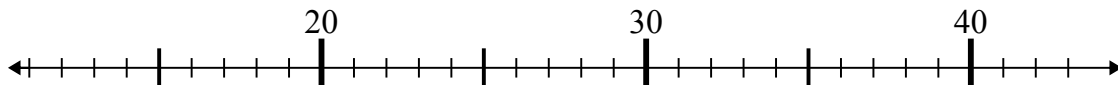
8)  $31 - 17 =$



9)  $66 + 9 =$



10)  $27 + 15 =$

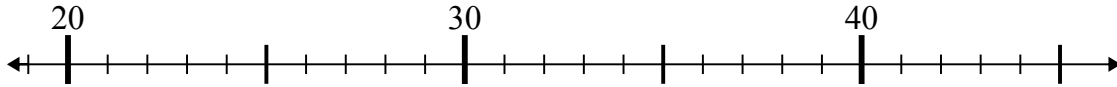
Ответы1. 222. 433. 764. 445. 776. 67. 408. 149. 7510. 42



Используйте числовые прямые для решения примеров.

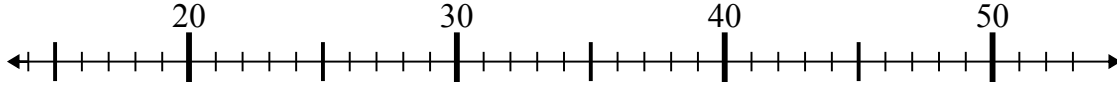
Ответы

1)  $29 + 7 =$



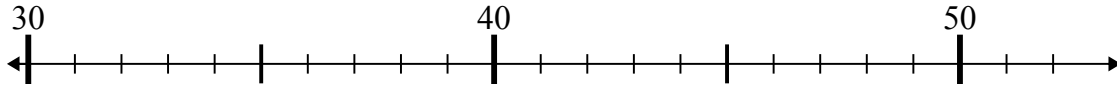
1. \_\_\_\_\_

2)  $36 - 6 =$



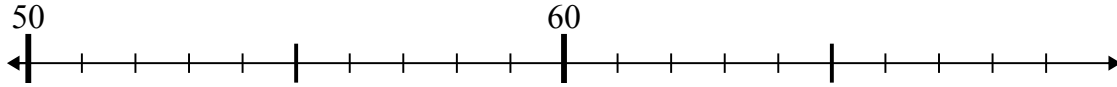
2. \_\_\_\_\_

3)  $50 - 1 =$



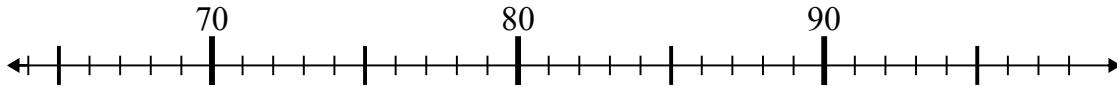
3. \_\_\_\_\_

4)  $68 - 6 =$



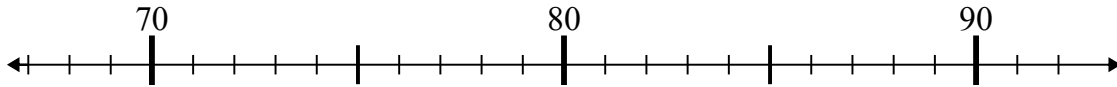
4. \_\_\_\_\_

5)  $71 + 11 =$



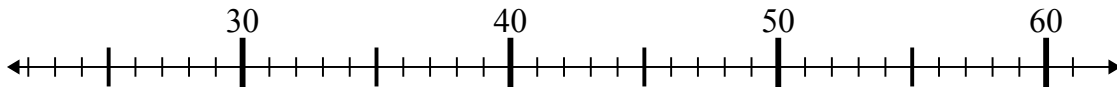
5. \_\_\_\_\_

6)  $68 + 4 =$



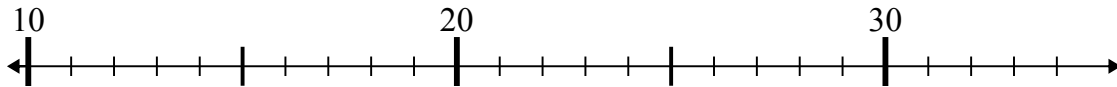
6. \_\_\_\_\_

7)  $35 - 9 =$



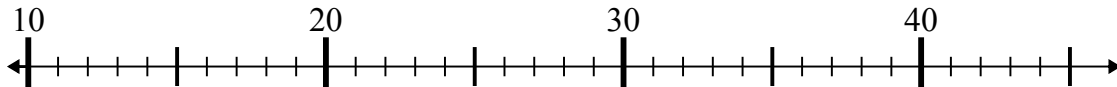
7. \_\_\_\_\_

8)  $34 + 0 =$



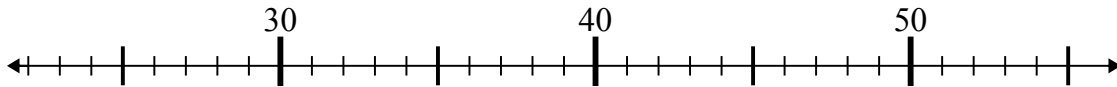
8. \_\_\_\_\_

9)  $42 - 21 =$



9. \_\_\_\_\_

10)  $45 - 3 =$

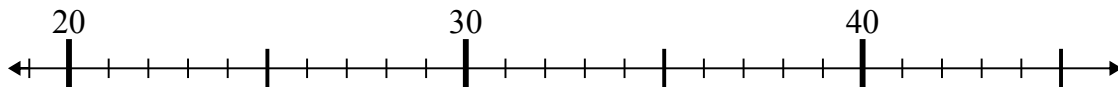


10. \_\_\_\_\_

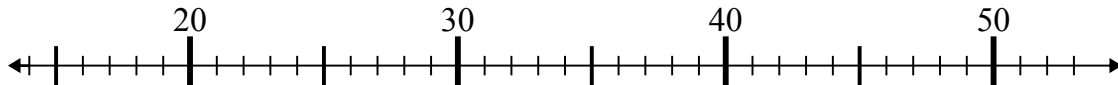


Используйте числовые прямые для решения примеров.

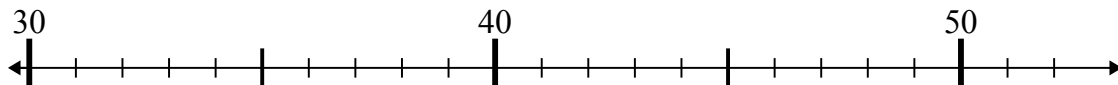
1)  $29 + 7 =$



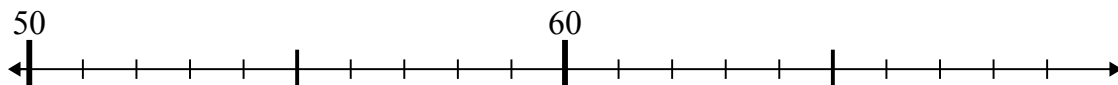
2)  $36 - 6 =$



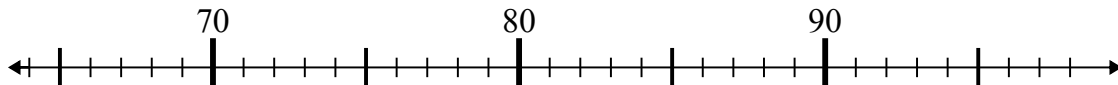
3)  $50 - 1 =$



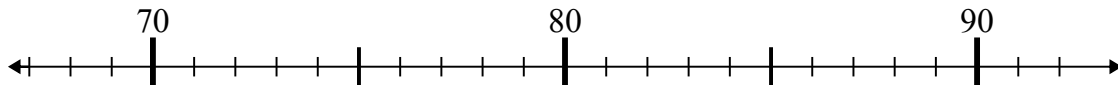
4)  $68 - 6 =$



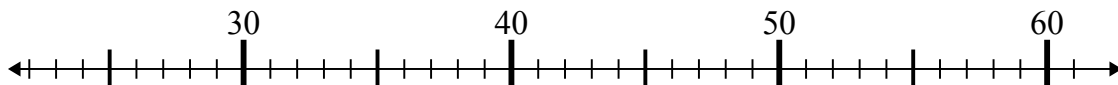
5)  $71 + 11 =$



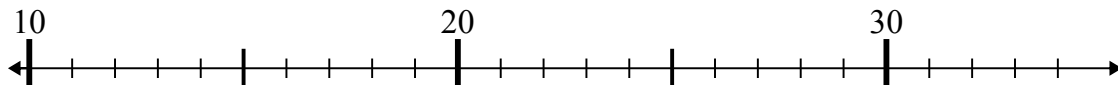
6)  $68 + 4 =$



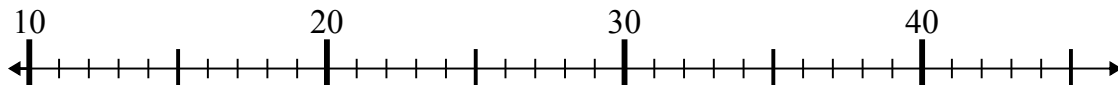
7)  $35 - 9 =$



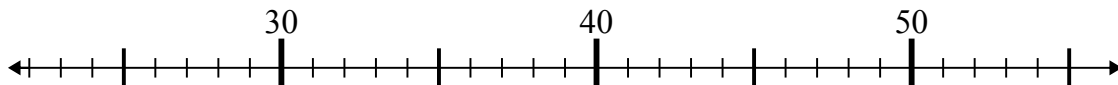
8)  $34 + 0 =$



9)  $42 - 21 =$



10)  $45 - 3 =$

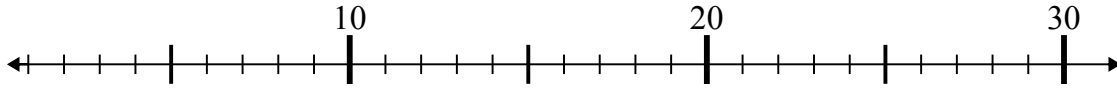
**Отв**1. 362. 303. 494. 625. 826. 727. 268. 349. 2110. 42



Используйте числовые прямые для решения примеров.

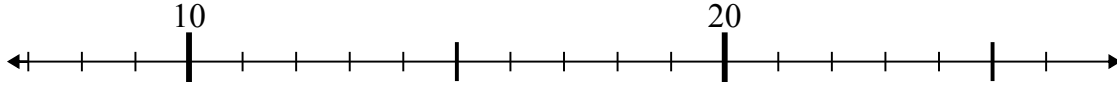
Ответы

1)  $3 + 17 =$



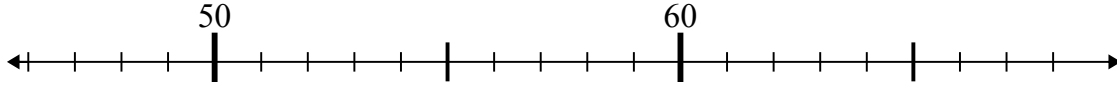
1. \_\_\_\_\_

2)  $14 + 9 =$



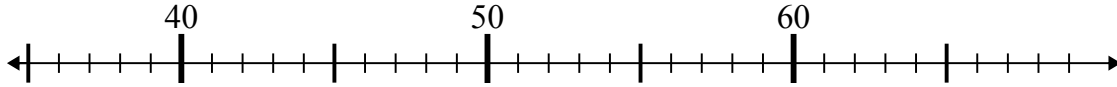
2. \_\_\_\_\_

3)  $59 - 8 =$



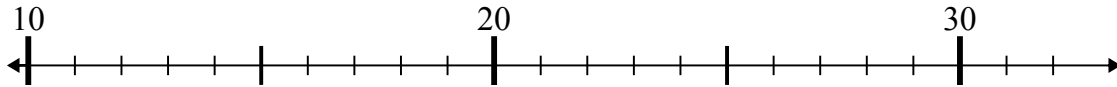
3. \_\_\_\_\_

4)  $43 - 5 =$



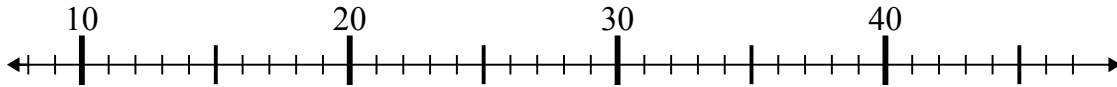
4. \_\_\_\_\_

5)  $26 - 14 =$



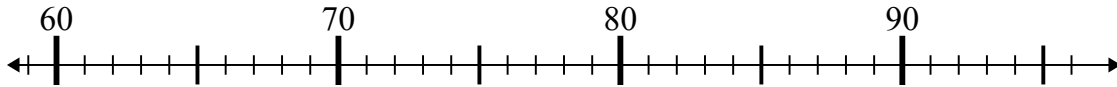
5. \_\_\_\_\_

6)  $15 + 23 =$



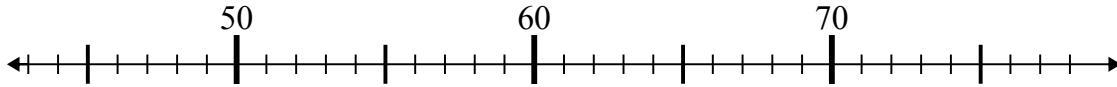
6. \_\_\_\_\_

7)  $91 + 2 =$



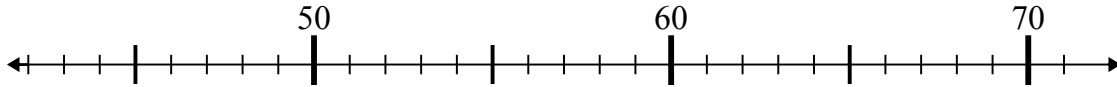
7. \_\_\_\_\_

8)  $47 + 1 =$



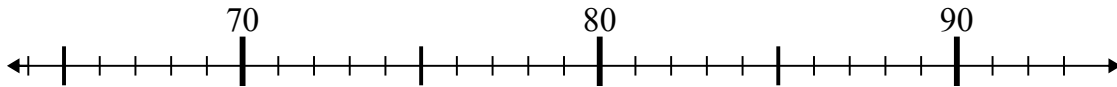
8. \_\_\_\_\_

9)  $71 - 8 =$



9. \_\_\_\_\_

10)  $72 + 16 =$

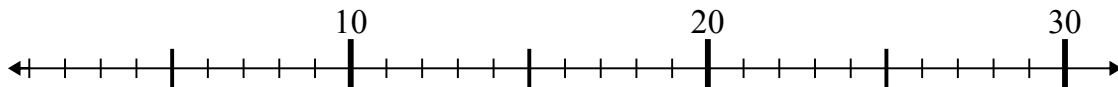


10. \_\_\_\_\_

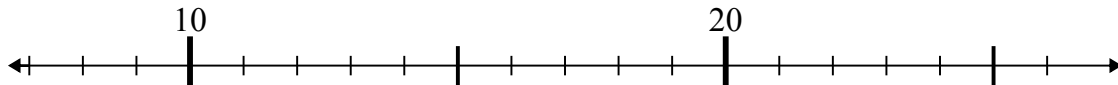


Используйте числовые прямые для решения примеров.

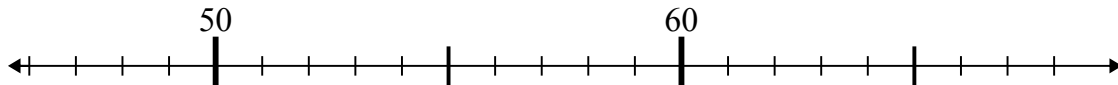
1)  $3 + 17 =$



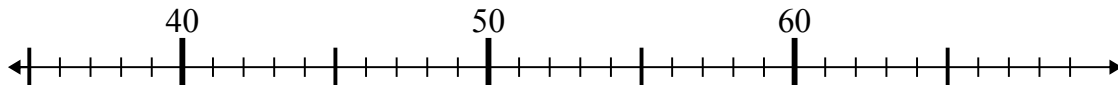
2)  $14 + 9 =$



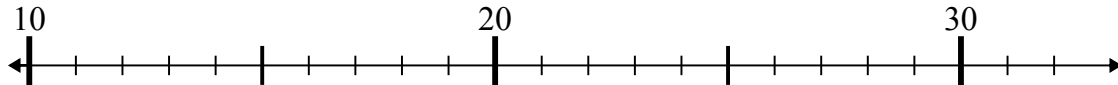
3)  $59 - 8 =$



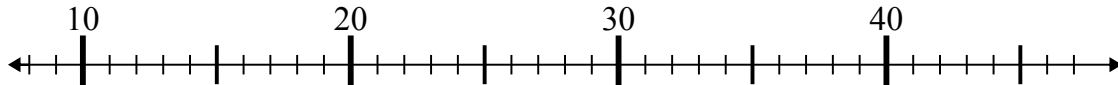
4)  $43 - 5 =$



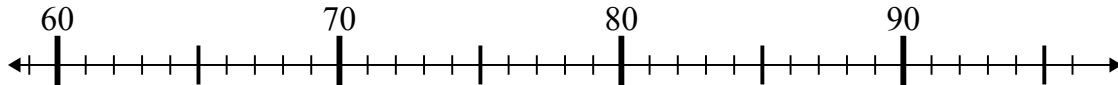
5)  $26 - 14 =$



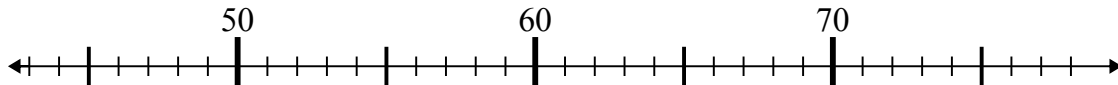
6)  $15 + 23 =$



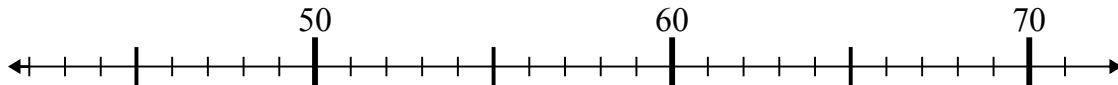
7)  $91 + 2 =$



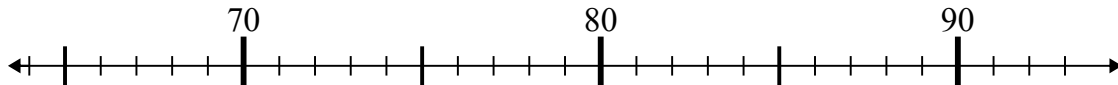
8)  $47 + 1 =$



9)  $71 - 8 =$



10)  $72 + 16 =$

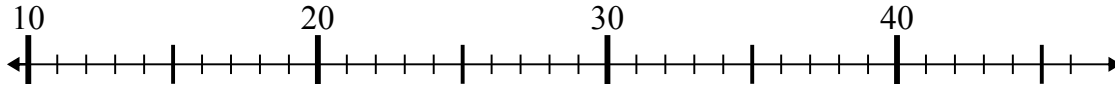
Ответы1. 202. 233. 514. 385. 126. 387. 938. 489. 6310. 88



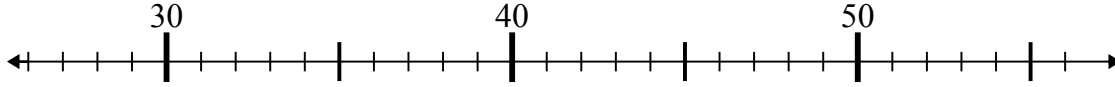
Используйте числовые прямые для решения примеров.

Ответы

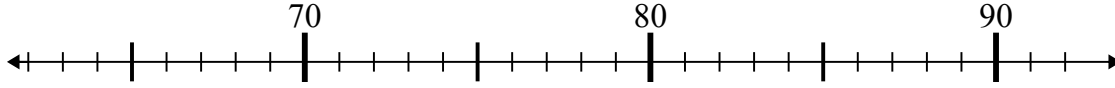
1)  $24 - 11 =$



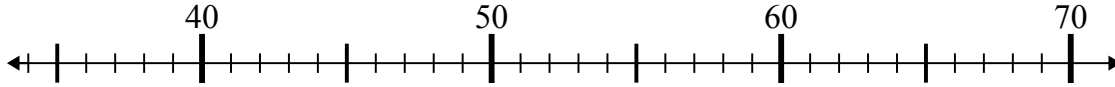
2)  $29 + 6 =$



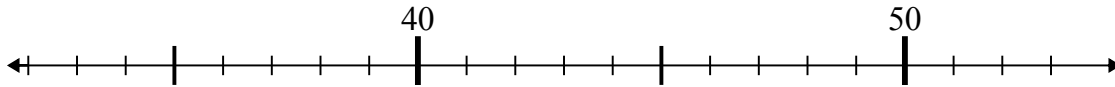
3)  $72 + 7 =$



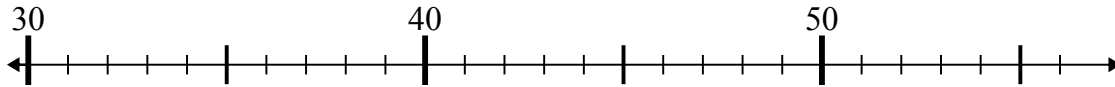
4)  $41 + 16 =$



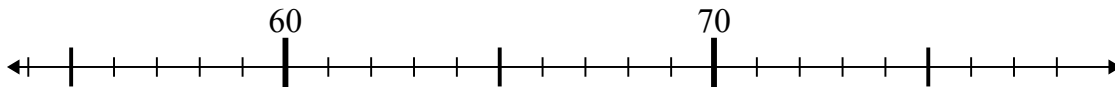
5)  $51 - 3 =$



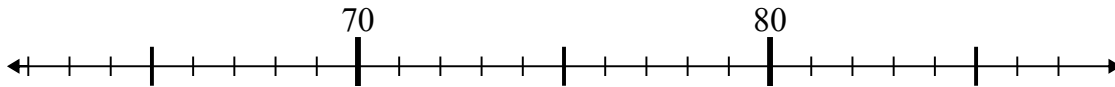
6)  $35 - 0 =$



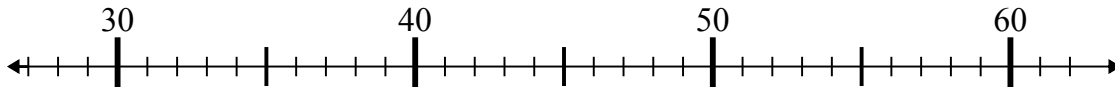
7)  $65 + 10 =$



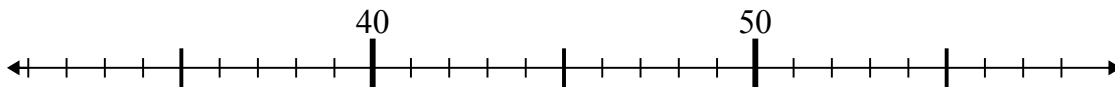
8)  $65 + 14 =$



9)  $57 - 16 =$



10)  $58 - 19 =$

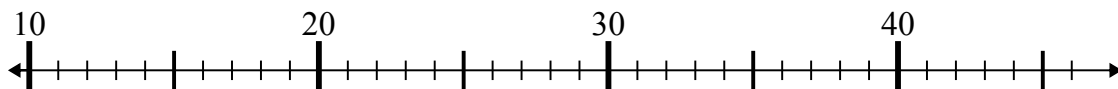


1. \_\_\_\_\_
2. \_\_\_\_\_
3. \_\_\_\_\_
4. \_\_\_\_\_
5. \_\_\_\_\_
6. \_\_\_\_\_
7. \_\_\_\_\_
8. \_\_\_\_\_
9. \_\_\_\_\_
10. \_\_\_\_\_

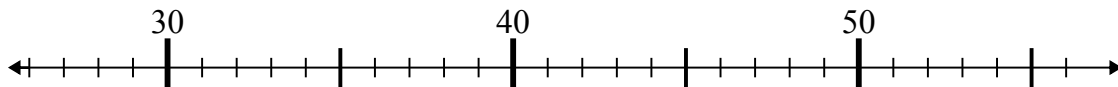


Используйте числовые прямые для решения примеров.

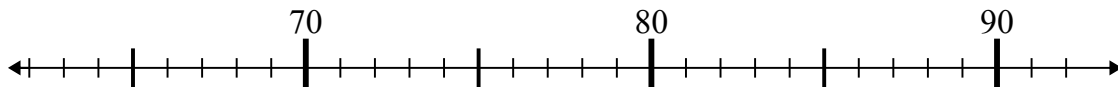
1)  $24 - 11 =$



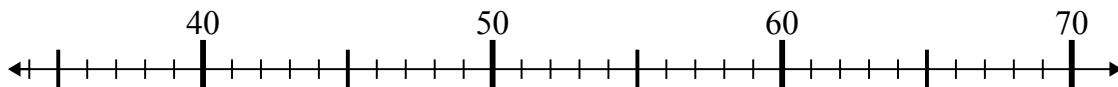
2)  $29 + 6 =$



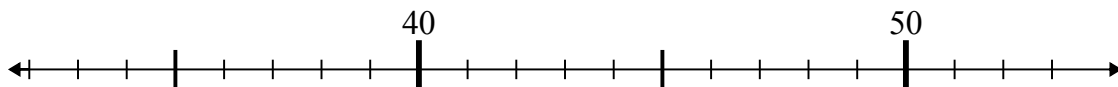
3)  $72 + 7 =$



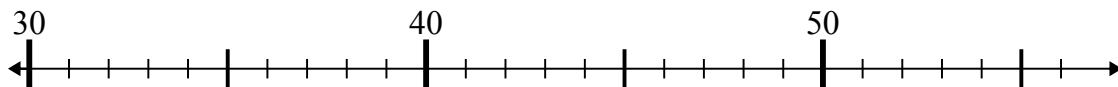
4)  $41 + 16 =$



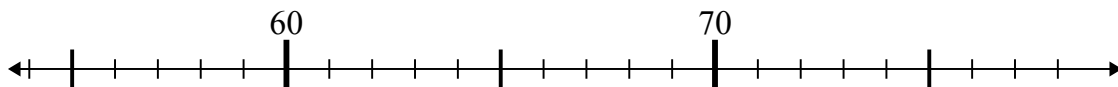
5)  $51 - 3 =$



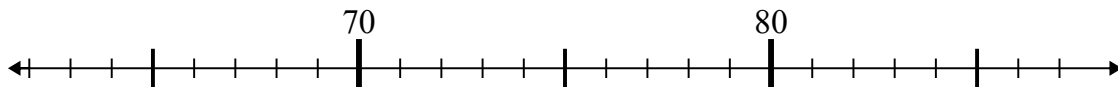
6)  $35 - 0 =$



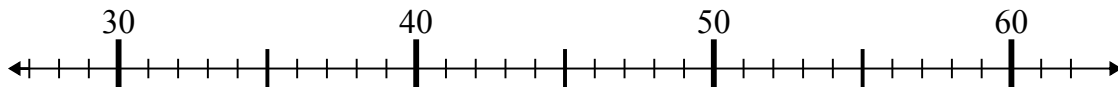
7)  $65 + 10 =$



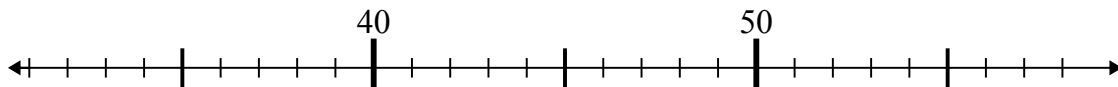
8)  $65 + 14 =$



9)  $57 - 16 =$



10)  $58 - 19 =$

Ответы1. 132. 353. 794. 575. 486. 357. 758. 799. 4110. 39

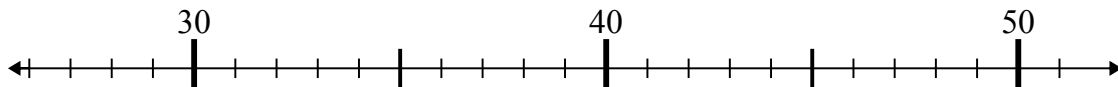




Используйте числовые прямые для решения примеров.

Ответы

1)  $32 - 5 =$



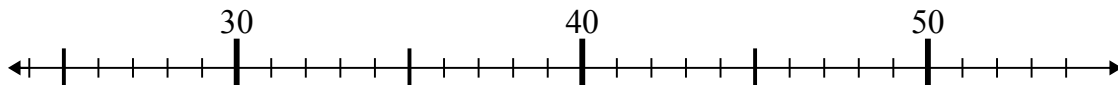
1. \_\_\_\_\_

2)  $16 + 7 =$



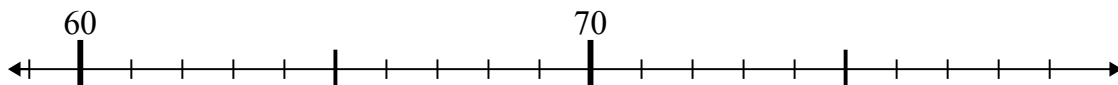
2. \_\_\_\_\_

3)  $25 + 12 =$



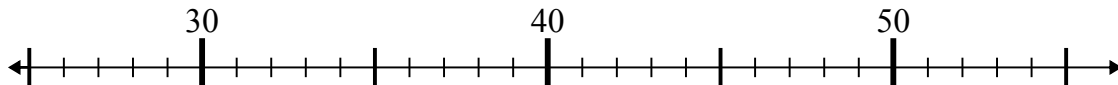
3. \_\_\_\_\_

4)  $75 - 14 =$



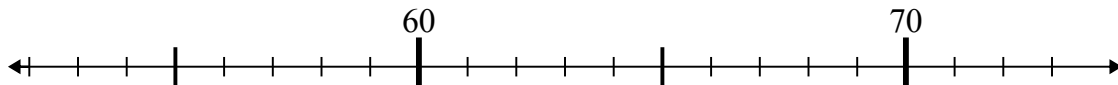
4. \_\_\_\_\_

5)  $28 + 26 =$



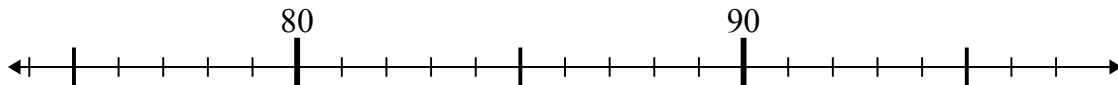
5. \_\_\_\_\_

6)  $65 - 10 =$



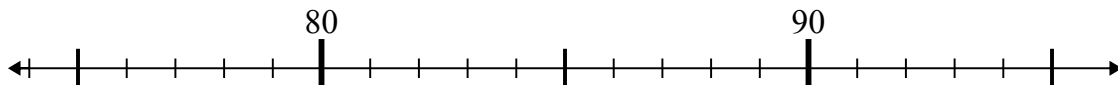
6. \_\_\_\_\_

7)  $81 - 2 =$



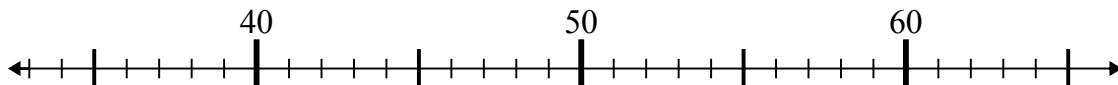
7. \_\_\_\_\_

8)  $95 - 8 =$



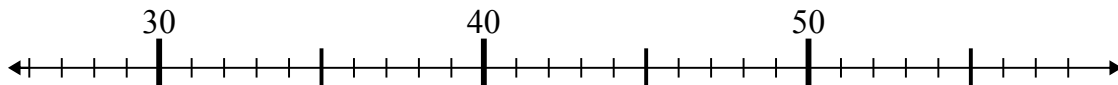
8. \_\_\_\_\_

9)  $48 - 11 =$



9. \_\_\_\_\_

10)  $32 + 18 =$

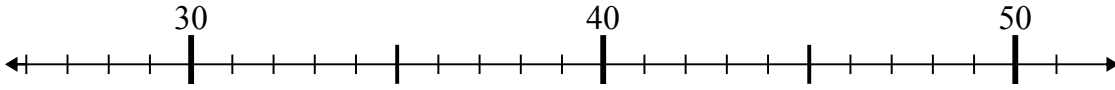


10. \_\_\_\_\_

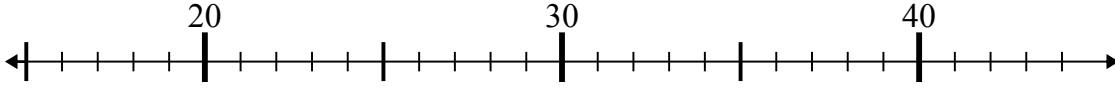


Используйте числовые прямые для решения примеров.

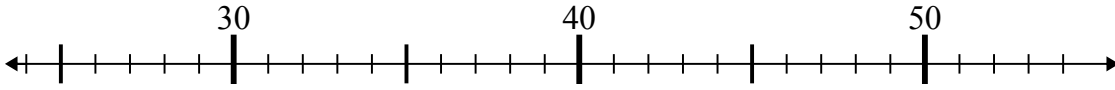
1)  $32 - 5 =$



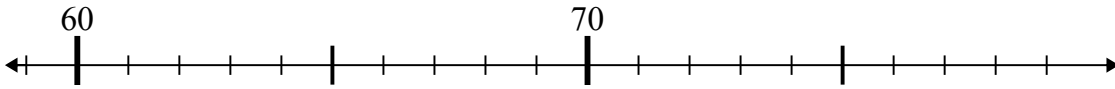
2)  $16 + 7 =$



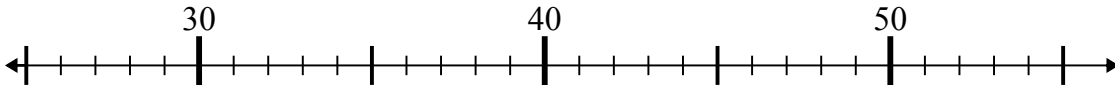
3)  $25 + 12 =$



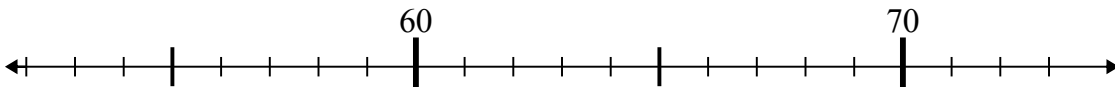
4)  $75 - 14 =$



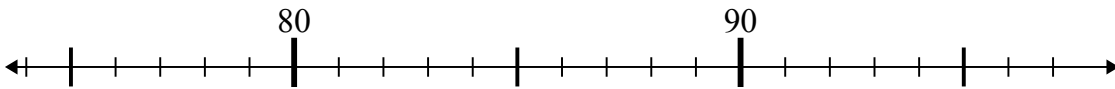
5)  $28 + 26 =$



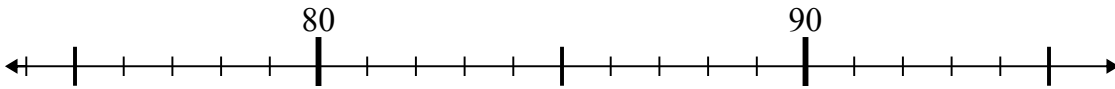
6)  $65 - 10 =$



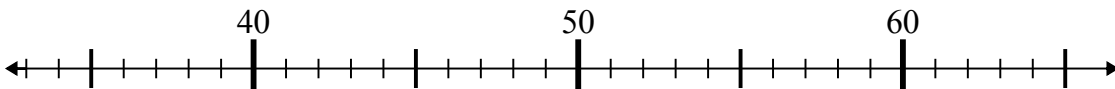
7)  $81 - 2 =$



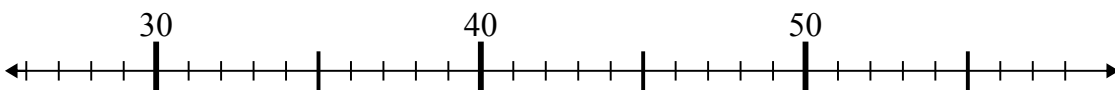
8)  $95 - 8 =$



9)  $48 - 11 =$



10)  $32 + 18 =$

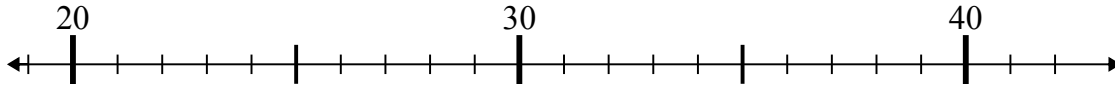
Ответы1. 272. 233. 374. 615. 546. 557. 798. 879. 3710. 50



Используйте числовые прямые для решения примеров.

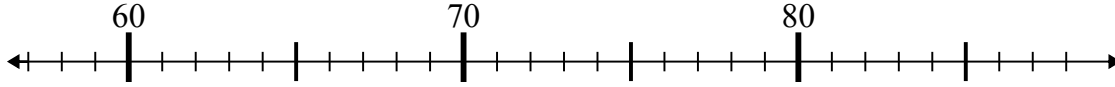
**Ответы**

1)  $31 + 4 =$



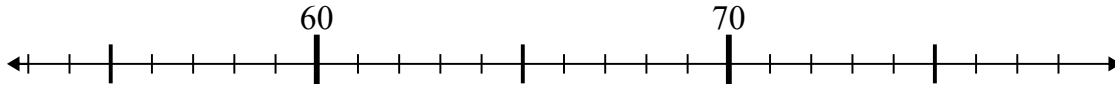
1. \_\_\_\_\_

2)  $76 - 18 =$



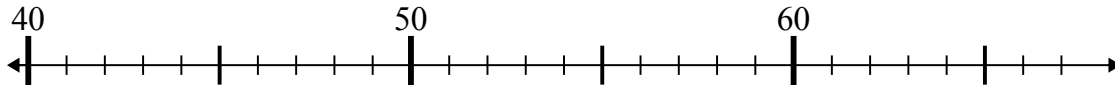
2. \_\_\_\_\_

3)  $57 + 5 =$



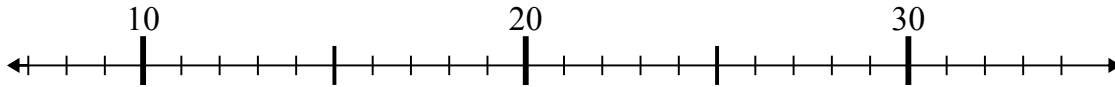
3. \_\_\_\_\_

4)  $40 + 8 =$



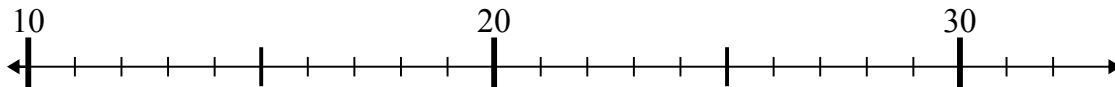
4. \_\_\_\_\_

5)  $8 + 20 =$



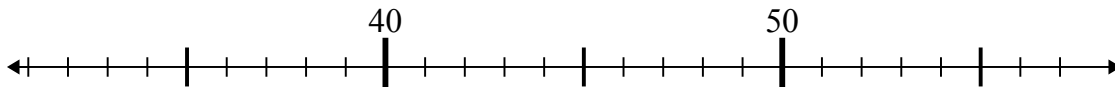
5. \_\_\_\_\_

6)  $13 + 4 =$



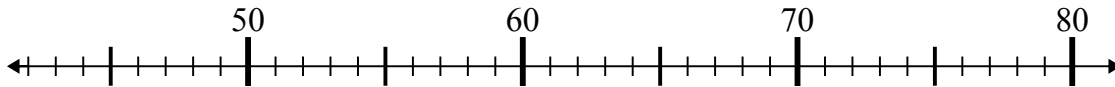
6. \_\_\_\_\_

7)  $56 - 18 =$



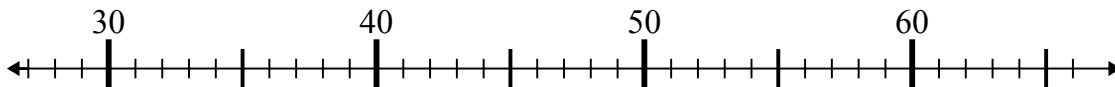
7. \_\_\_\_\_

8)  $61 - 13 =$



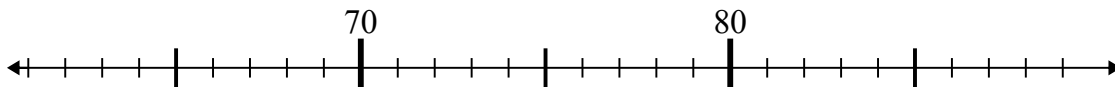
8. \_\_\_\_\_

9)  $40 + 16 =$



9. \_\_\_\_\_

10)  $78 + 3 =$

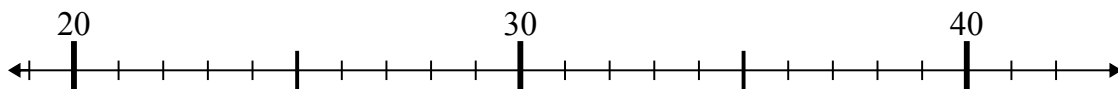


10. \_\_\_\_\_

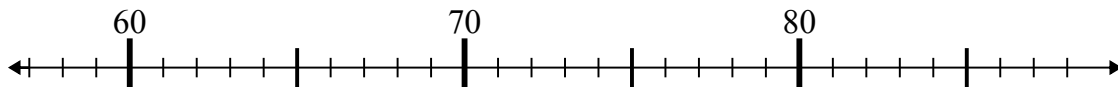


Используйте числовые прямые для решения примеров.

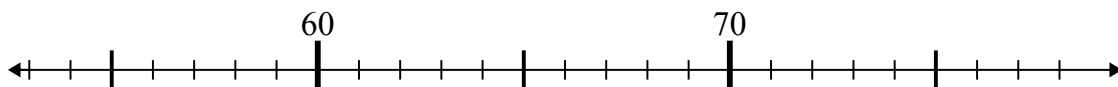
1)  $31 + 4 =$



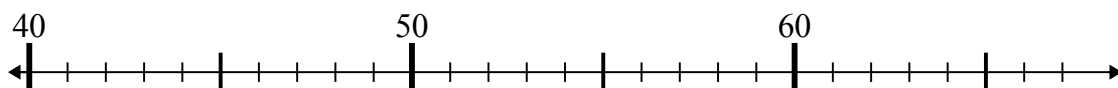
2)  $76 - 18 =$



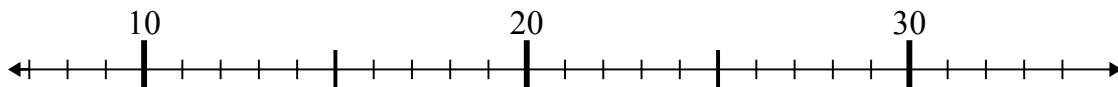
3)  $57 + 5 =$



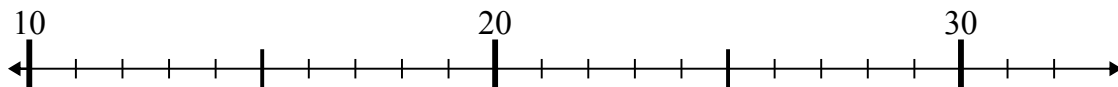
4)  $40 + 8 =$



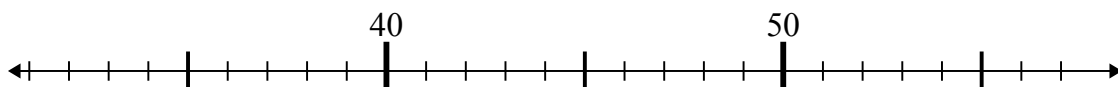
5)  $8 + 20 =$



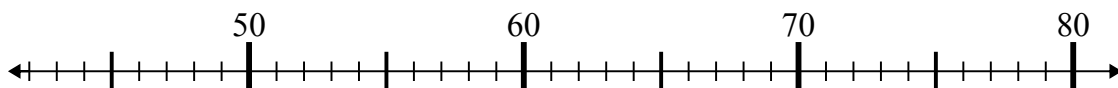
6)  $13 + 4 =$



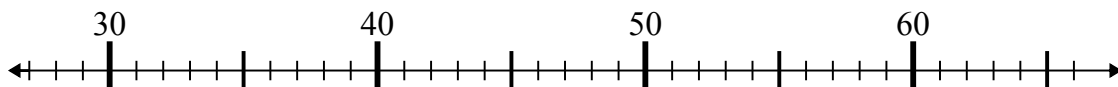
7)  $56 - 18 =$



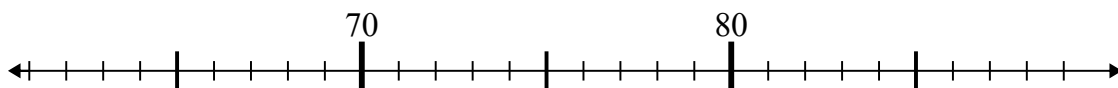
8)  $61 - 13 =$



9)  $40 + 16 =$



10)  $78 + 3 =$

Ответы1. 352. 583. 624. 485. 286. 177. 388. 489. 5610. 81