



Определите под какой буквой находится правильный ответ.

ОТВЕТЫ

1) $\frac{1}{8} + \frac{2}{8}$

2) $\frac{4}{6} + \frac{3}{6}$

3) $\frac{2}{6} + \frac{3}{6}$

4) $\frac{4}{6} + \frac{2}{6}$

5) $\frac{3}{5} + \frac{1}{5}$

6) $\frac{3}{4} + \frac{3}{4}$

7) $\frac{1}{2} + \frac{1}{2}$

8) $\frac{4}{5} + \frac{4}{5}$

9) $\frac{3}{6} + \frac{5}{6}$

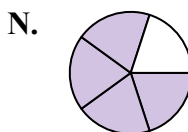
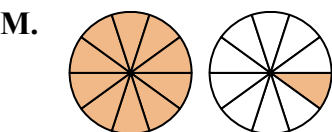
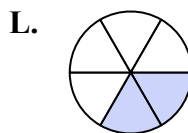
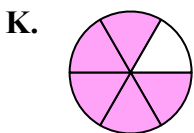
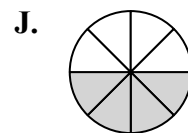
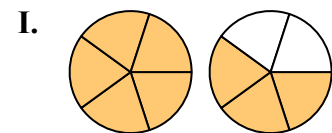
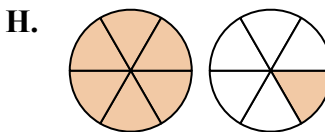
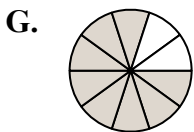
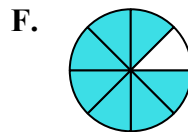
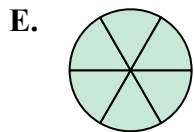
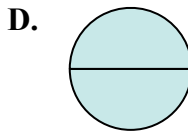
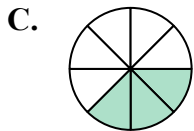
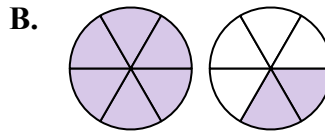
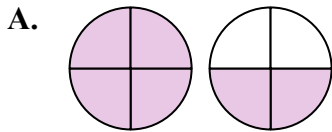
10) $\frac{2}{10} + \frac{9}{10}$

11) $\frac{3}{10} + \frac{5}{10}$

12) $\frac{1}{6} + \frac{1}{6}$

13) $\frac{5}{8} + \frac{2}{8}$

14) $\frac{2}{8} + \frac{2}{8}$



1. _____
2. _____
3. _____
4. _____
5. _____
6. _____
7. _____
8. _____
9. _____
10. _____
11. _____
12. _____
13. _____
14. _____



Определите под какой буквой находится правильный ответ.

1) $\frac{1}{8} + \frac{2}{8}$

3) $\frac{2}{6} + \frac{3}{6}$

5) $\frac{3}{5} + \frac{1}{5}$

7) $\frac{1}{2} + \frac{1}{2}$

9) $\frac{3}{6} + \frac{5}{6}$

11) $\frac{3}{10} + \frac{5}{10}$

13) $\frac{5}{8} + \frac{2}{8}$

2) $\frac{4}{6} + \frac{3}{6}$

4) $\frac{4}{6} + \frac{2}{6}$

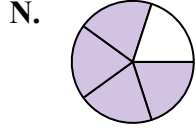
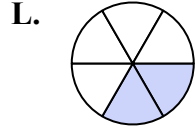
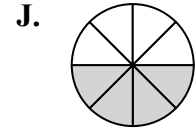
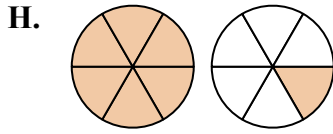
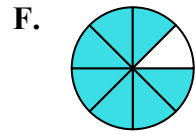
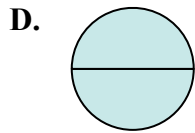
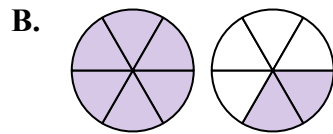
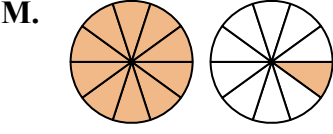
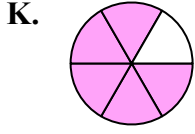
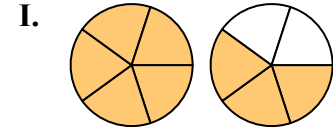
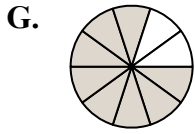
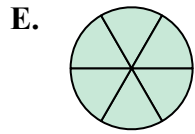
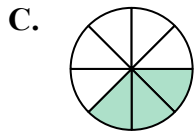
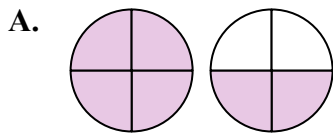
6) $\frac{3}{4} + \frac{3}{4}$

8) $\frac{4}{5} + \frac{4}{5}$

10) $\frac{2}{10} + \frac{9}{10}$

12) $\frac{1}{6} + \frac{1}{6}$

14) $\frac{2}{8} + \frac{2}{8}$



ОТВЕТЫ

1. C $\frac{3}{8}$

2. H $1\frac{1}{6}$

3. K $\frac{5}{6}$

4. E $\frac{6}{6}$

5. N $\frac{4}{5}$

6. A $1\frac{2}{4}$

7. D $\frac{2}{2}$

8. I $1\frac{3}{5}$

9. B $1\frac{2}{6}$

10. M $1\frac{1}{10}$

11. G $\frac{8}{10}$

12. L $\frac{2}{6}$

13. F $\frac{7}{8}$

14. J $\frac{4}{8}$