



Определите под какой буквой находится правильный ответ.

1)  $\frac{2}{5} + \frac{2}{5}$

3)  $\frac{2}{4} + \frac{3}{4}$

5)  $\frac{9}{10} + \frac{4}{10}$

7)  $\frac{4}{6} + \frac{3}{6}$

9)  $\frac{6}{12} + \frac{8}{12}$

11)  $\frac{1}{6} + \frac{1}{6}$

13)  $\frac{4}{5} + \frac{2}{5}$

2)  $\frac{4}{5} + \frac{3}{5}$

4)  $\frac{5}{6} + \frac{4}{6}$

6)  $\frac{3}{4} + \frac{1}{4}$

8)  $\frac{2}{3} + \frac{2}{3}$

10)  $\frac{1}{2} + \frac{1}{2}$

12)  $\frac{3}{4} + \frac{3}{4}$

14)  $\frac{3}{12} + \frac{9}{12}$

**ОТВЕТЫ**

1. \_\_\_\_\_

2. \_\_\_\_\_

3. \_\_\_\_\_

4. \_\_\_\_\_

5. \_\_\_\_\_

6. \_\_\_\_\_

7. \_\_\_\_\_

8. \_\_\_\_\_

9. \_\_\_\_\_

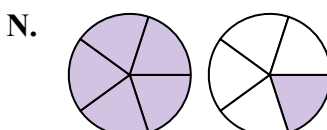
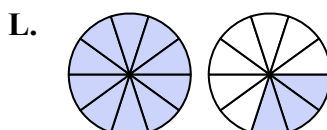
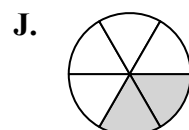
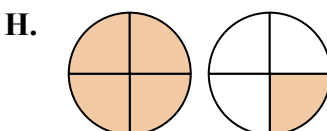
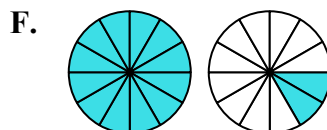
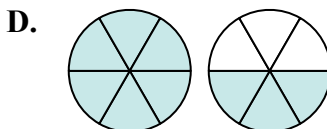
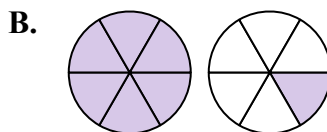
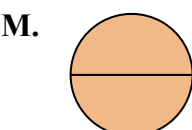
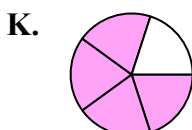
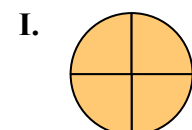
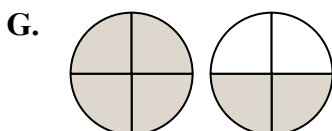
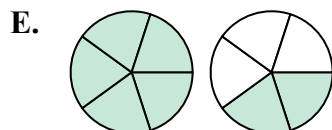
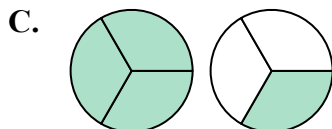
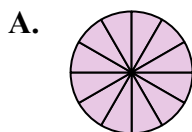
10. \_\_\_\_\_

11. \_\_\_\_\_

12. \_\_\_\_\_

13. \_\_\_\_\_

14. \_\_\_\_\_





Определите под какой буквой находится правильный ответ.

1)  $\frac{2}{5} + \frac{2}{5}$

3)  $\frac{2}{4} + \frac{3}{4}$

5)  $\frac{9}{10} + \frac{4}{10}$

7)  $\frac{4}{6} + \frac{3}{6}$

9)  $\frac{6}{12} + \frac{8}{12}$

11)  $\frac{1}{6} + \frac{1}{6}$

13)  $\frac{4}{5} + \frac{2}{5}$

2)  $\frac{4}{5} + \frac{3}{5}$

4)  $\frac{5}{6} + \frac{4}{6}$

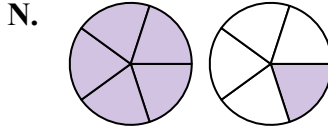
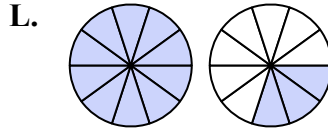
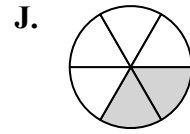
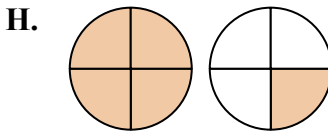
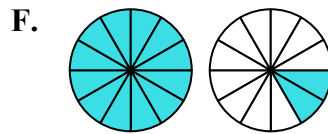
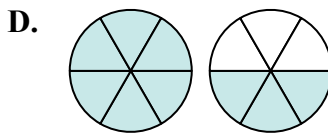
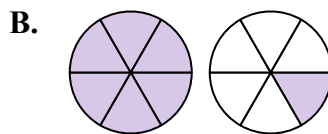
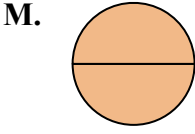
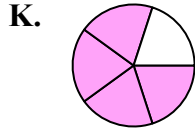
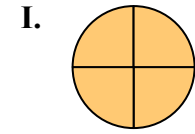
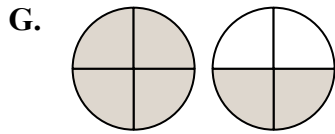
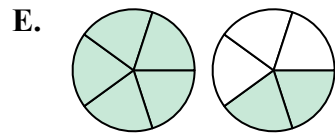
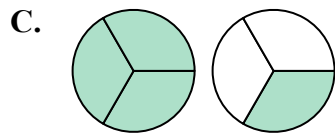
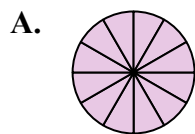
6)  $\frac{3}{4} + \frac{1}{4}$

8)  $\frac{2}{3} + \frac{2}{3}$

10)  $\frac{1}{2} + \frac{1}{2}$

12)  $\frac{3}{4} + \frac{3}{4}$

14)  $\frac{3}{12} + \frac{9}{12}$



**ОТВЕТЫ**

1. К  $\frac{4}{5}$

2. Е  $1\frac{2}{5}$

3. Н  $1\frac{1}{4}$

4. Д  $1\frac{3}{6}$

5. Л  $1\frac{3}{10}$

6. И  $\frac{4}{4}$

7. В  $1\frac{1}{6}$

8. С  $1\frac{1}{3}$

9. Ф  $1\frac{2}{12}$

10. М  $\frac{2}{2}$

11. Ж  $\frac{2}{6}$

12. Г  $1\frac{2}{4}$

13. Н  $1\frac{1}{5}$

14. А  $\frac{12}{12}$