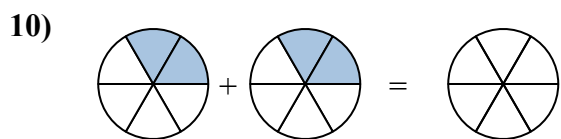
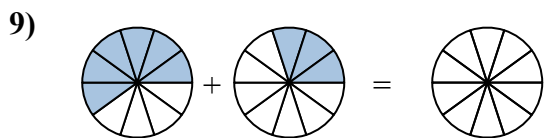
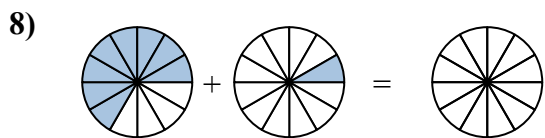
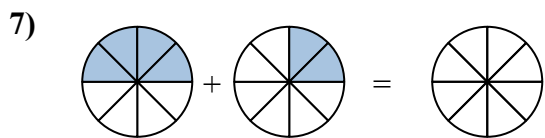
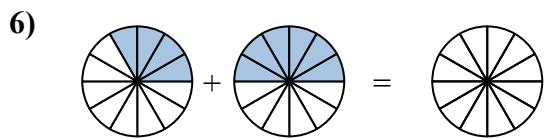
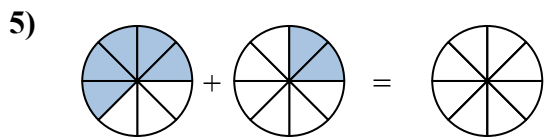
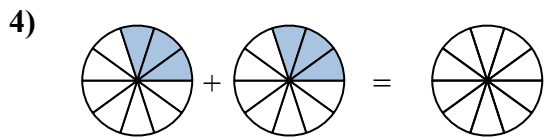
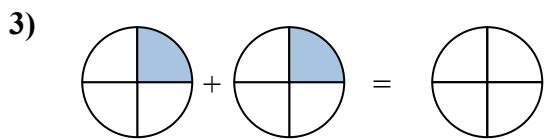
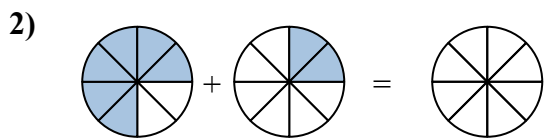
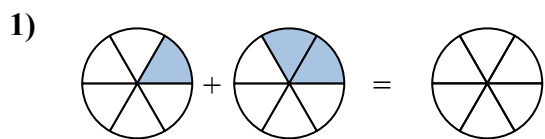
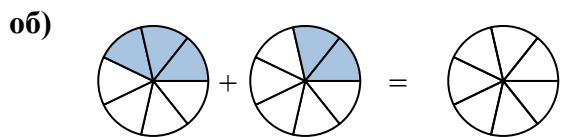




Закрасьте части, чтобы решить задачу.

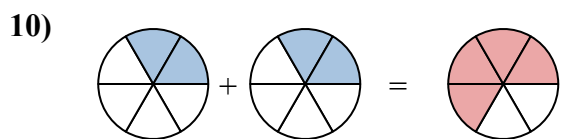
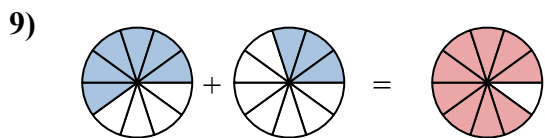
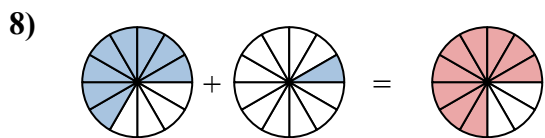
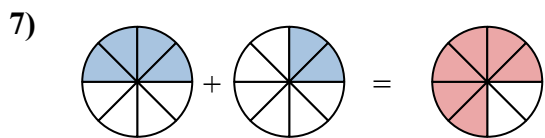
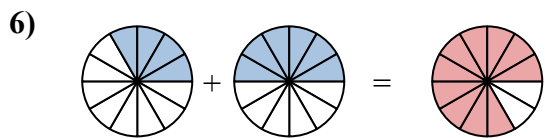
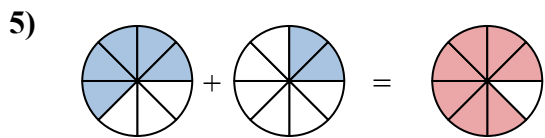
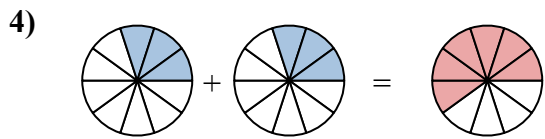
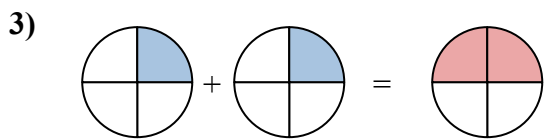
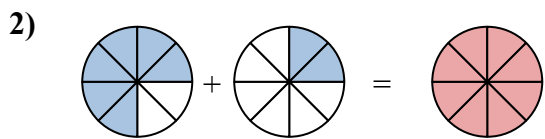
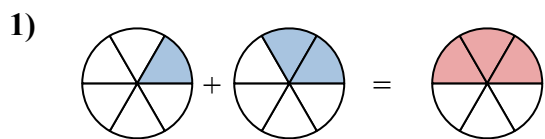
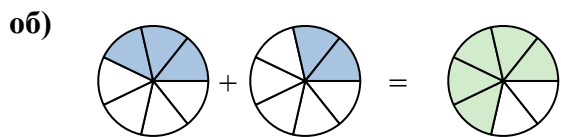


**ОТВЕТЫ**

об.	$\frac{3}{7}$	$\frac{2}{7}$	$\frac{5}{7}$
1.	_____	_____	_____
2.	_____	_____	_____
3.	_____	_____	_____
4.	_____	_____	_____
5.	_____	_____	_____
6.	_____	_____	_____
7.	_____	_____	_____
8.	_____	_____	_____
9.	_____	_____	_____
10.	_____	_____	_____



Закрасьте части, чтобы решить задачу.



**ОТВЕТЫ**

об.	$\frac{3}{7}$	$\frac{2}{7}$	$\frac{5}{7}$
1.	$\frac{1}{6}$	$\frac{2}{6}$	$\frac{3}{6}$
2.	$\frac{6}{8}$	$\frac{2}{8}$	$\frac{8}{8}$
3.	$\frac{1}{4}$	$\frac{1}{4}$	$\frac{2}{4}$
4.	$\frac{3}{10}$	$\frac{3}{10}$	$\frac{6}{10}$
5.	$\frac{5}{8}$	$\frac{2}{8}$	$\frac{7}{8}$
6.	$\frac{4}{12}$	$\frac{6}{12}$	$\frac{10}{12}$
7.	$\frac{4}{8}$	$\frac{2}{8}$	$\frac{6}{8}$
8.	$\frac{8}{12}$	$\frac{1}{12}$	$\frac{9}{12}$
9.	$\frac{6}{10}$	$\frac{3}{10}$	$\frac{9}{10}$
10.	$\frac{2}{6}$	$\frac{2}{6}$	$\frac{4}{6}$