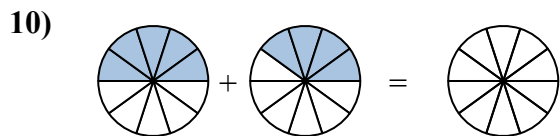
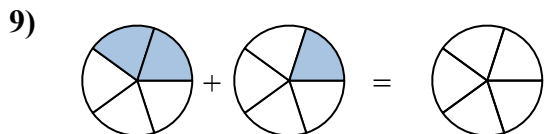
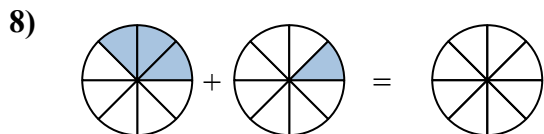
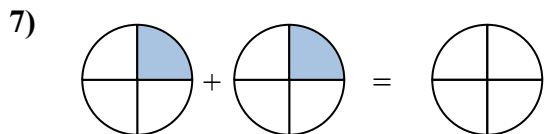
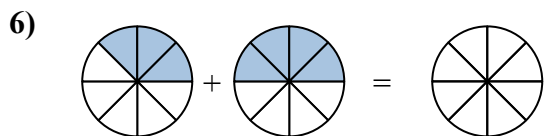
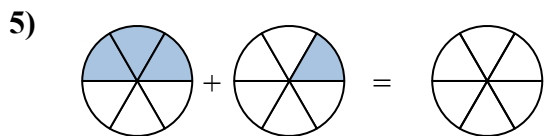
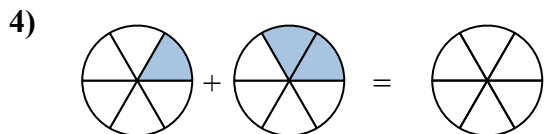
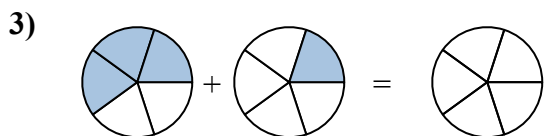
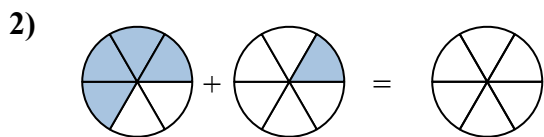
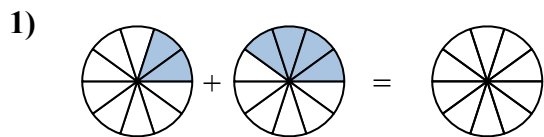
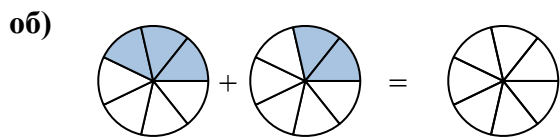




Закрасьте части, чтобы решить задачу.

**Отвeты**

об.	$\frac{3}{7}$	$\frac{2}{7}$	$\frac{5}{7}$
1.	_____	_____	_____
2.	_____	_____	_____
3.	_____	_____	_____
4.	_____	_____	_____
5.	_____	_____	_____
6.	_____	_____	_____
7.	_____	_____	_____
8.	_____	_____	_____
9.	_____	_____	_____
10.	_____	_____	_____



Закрасьте части, чтобы решить задачу.

об)

1)

2)

3)

4)

5)

6)

7)

8)

9)

10)

ОТВЕТЫ

об.	$\frac{3}{7}$	$\frac{2}{7}$	$\frac{5}{7}$
1.	$\frac{2}{10}$	$\frac{4}{10}$	$\frac{6}{10}$
2.	$\frac{4}{6}$	$\frac{1}{6}$	$\frac{5}{6}$
3.	$\frac{3}{5}$	$\frac{1}{5}$	$\frac{4}{5}$
4.	$\frac{1}{6}$	$\frac{2}{6}$	$\frac{3}{6}$
5.	$\frac{3}{6}$	$\frac{1}{6}$	$\frac{4}{6}$
6.	$\frac{3}{8}$	$\frac{4}{8}$	$\frac{7}{8}$
7.	$\frac{1}{4}$	$\frac{1}{4}$	$\frac{2}{4}$
8.	$\frac{3}{8}$	$\frac{1}{8}$	$\frac{4}{8}$
9.	$\frac{2}{5}$	$\frac{1}{5}$	$\frac{3}{5}$
10.	$\frac{5}{10}$	$\frac{4}{10}$	$\frac{9}{10}$