



Найдите соответствующий ответ и напишите его.


об) $\frac{1}{8} + \frac{1}{8} + \frac{1}{8} + \frac{1}{8} + \frac{1}{8}$



1) $\frac{1}{5} + \frac{1}{5} + \frac{1}{5}$




2) $\frac{1}{4} + \frac{1}{4}$



3) $\frac{1}{5} + \frac{1}{5} + \frac{1}{5} + \frac{1}{5}$



4) $\frac{1}{8} + \frac{1}{8}$




5) $\frac{1}{4} + \frac{1}{4} + \frac{1}{4}$




6) $\frac{1}{5} + \frac{1}{5}$



7) $\frac{1}{8} + \frac{1}{8} + \frac{1}{8} + \frac{1}{8} + \frac{1}{8} + \frac{1}{8}$




8) $\frac{1}{6} + \frac{1}{6} + \frac{1}{6} + \frac{1}{6} + \frac{1}{6}$



9) $\frac{1}{6} + \frac{1}{6} + \frac{1}{6} + \frac{1}{6}$




10) $\frac{1}{12} + \frac{1}{12} + \frac{1}{12} + \frac{1}{12} + \frac{1}{12} + \frac{1}{12}$



11) $\frac{1}{10} + \frac{1}{10} + \frac{1}{10}$




12) $\frac{1}{10} + \frac{1}{10} + \frac{1}{10} + \frac{1}{10} + \frac{1}{10}$



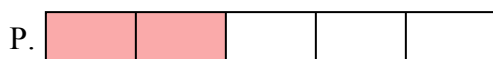
13) $\frac{1}{3} + \frac{1}{3}$



14) $\frac{1}{8} + \frac{1}{8} + \frac{1}{8} + \frac{1}{8}$



15) $\frac{1}{10} + \frac{1}{10}$



Ответы

об. J

1. _____

2. _____

3. _____

4. _____

5. _____

6. _____

7. _____

8. _____

9. _____

10. _____

11. _____

12. _____

13. _____

14. _____

15. _____



Найдите соответствующий ответ и напишите его.


об) $\frac{1}{8} + \frac{1}{8} + \frac{1}{8} + \frac{1}{8} + \frac{1}{8}$



1) $\frac{1}{5} + \frac{1}{5} + \frac{1}{5}$



2) $\frac{1}{4} + \frac{1}{4}$



3) $\frac{1}{5} + \frac{1}{5} + \frac{1}{5} + \frac{1}{5}$



4) $\frac{1}{8} + \frac{1}{8}$



5) $\frac{1}{4} + \frac{1}{4} + \frac{1}{4}$




6) $\frac{1}{5} + \frac{1}{5}$



7) $\frac{1}{8} + \frac{1}{8} + \frac{1}{8} + \frac{1}{8} + \frac{1}{8} + \frac{1}{8}$




8) $\frac{1}{6} + \frac{1}{6} + \frac{1}{6} + \frac{1}{6} + \frac{1}{6}$




9) $\frac{1}{6} + \frac{1}{6} + \frac{1}{6} + \frac{1}{6}$



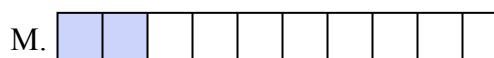
10) $\frac{1}{12} + \frac{1}{12} + \frac{1}{12} + \frac{1}{12} + \frac{1}{12} + \frac{1}{12}$



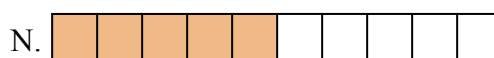
11) $\frac{1}{10} + \frac{1}{10} + \frac{1}{10}$



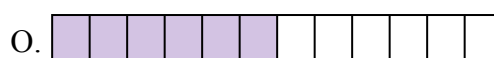
12) $\frac{1}{10} + \frac{1}{10} + \frac{1}{10} + \frac{1}{10} + \frac{1}{10}$



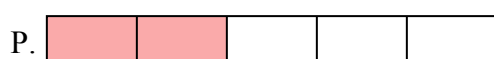
13) $\frac{1}{3} + \frac{1}{3}$



14) $\frac{1}{8} + \frac{1}{8} + \frac{1}{8} + \frac{1}{8}$



15) $\frac{1}{10} + \frac{1}{10}$



ОТВЕТЫ

об. **J**

1. **L**

2. **D**

3. **H**

4. **K**

5. **E**

6. **P**

7. **I**

8. **G**

9. **A**

10. **O**

11. **B**

12. **N**

13. **F**

14. **C**

15. **M**