




Найдите соответствующий ответ и напишите его.

**Отвѣты**

об)  $\frac{1}{5} + \frac{1}{5}$




об.          **G**

1)  $\frac{1}{10} + \frac{1}{10}$



1.         

2)  $\frac{1}{5} + \frac{1}{5} + \frac{1}{5}$



2.         

3)  $\frac{1}{3} + \frac{1}{3}$



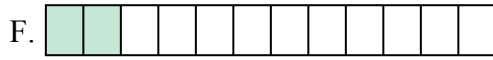
3.         

4)  $\frac{1}{12} + \frac{1}{12}$




4.         

5)  $\frac{1}{12} + \frac{1}{12} + \frac{1}{12} + \frac{1}{12}$



5.         

6)  $\frac{1}{4} + \frac{1}{4}$



6.         

7)  $\frac{1}{6} + \frac{1}{6}$



7.         

8)  $\frac{1}{4} + \frac{1}{4} + \frac{1}{4}$




8.         

9)  $\frac{1}{10} + \frac{1}{10} + \frac{1}{10} + \frac{1}{10}$




9.         

10)  $\frac{1}{6} + \frac{1}{6} + \frac{1}{6} + \frac{1}{6} + \frac{1}{6}$



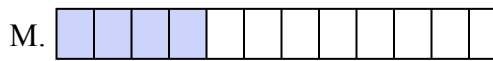
10.         

11)  $\frac{1}{8} + \frac{1}{8} + \frac{1}{8} + \frac{1}{8}$



11.         

12)  $\frac{1}{12} + \frac{1}{12} + \frac{1}{12}$




12.         

13)  $\frac{1}{8} + \frac{1}{8}$




13.         

14)  $\frac{1}{6} + \frac{1}{6} + \frac{1}{6} + \frac{1}{6}$



14.         

15)  $\frac{1}{8} + \frac{1}{8} + \frac{1}{8} + \frac{1}{8} + \frac{1}{8}$




15.



Найдите соответствующий ответ и напишите его.

об)  $\frac{1}{5} + \frac{1}{5}$




1)  $\frac{1}{10} + \frac{1}{10}$



2)  $\frac{1}{5} + \frac{1}{5} + \frac{1}{5}$



3)  $\frac{1}{3} + \frac{1}{3}$



4)  $\frac{1}{12} + \frac{1}{12}$



5)  $\frac{1}{12} + \frac{1}{12} + \frac{1}{12} + \frac{1}{12}$



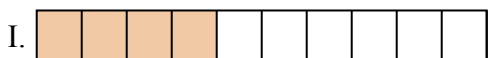
6)  $\frac{1}{4} + \frac{1}{4}$



7)  $\frac{1}{6} + \frac{1}{6}$



8)  $\frac{1}{4} + \frac{1}{4} + \frac{1}{4}$




9)  $\frac{1}{10} + \frac{1}{10} + \frac{1}{10} + \frac{1}{10}$




10)  $\frac{1}{6} + \frac{1}{6} + \frac{1}{6} + \frac{1}{6} + \frac{1}{6}$



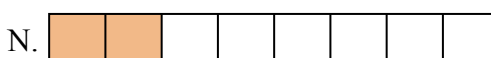
11)  $\frac{1}{8} + \frac{1}{8} + \frac{1}{8} + \frac{1}{8}$




12)  $\frac{1}{12} + \frac{1}{12} + \frac{1}{12}$




13)  $\frac{1}{8} + \frac{1}{8}$



14)  $\frac{1}{6} + \frac{1}{6} + \frac{1}{6} + \frac{1}{6}$



15)  $\frac{1}{8} + \frac{1}{8} + \frac{1}{8} + \frac{1}{8} + \frac{1}{8}$



**ОТВЕТЫ**

об.         **G**        

1.         **E**        

2.         **O**        

3.         **K**        

4.         **F**        

5.         **M**        

6.         **D**        

7.         **A**        

8.         **P**        

9.         **I**        

10.         **B**        

11.         **C**        

12.         **J**        

13.         **N**        

14.         **L**        

15.         **H**