




Найдите соответствующий ответ и напишите его.

об) $\frac{1}{4} + \frac{1}{4}$



1) $\frac{1}{10} + \frac{1}{10} + \frac{1}{10} + \frac{1}{10} + \frac{1}{10} + \frac{1}{10} + \frac{1}{10}$




2) $\frac{1}{5} + \frac{1}{5}$




3) $\frac{1}{5} + \frac{1}{5} + \frac{1}{5}$



4) $\frac{1}{8} + \frac{1}{8}$



5) $\frac{1}{10} + \frac{1}{10} + \frac{1}{10} + \frac{1}{10} + \frac{1}{10}$




6) $\frac{1}{3} + \frac{1}{3}$



7) $\frac{1}{10} + \frac{1}{10} + \frac{1}{10} + \frac{1}{10}$



8) $\frac{1}{4} + \frac{1}{4} + \frac{1}{4}$




9) $\frac{1}{12} + \frac{1}{12}$




10) $\frac{1}{8} + \frac{1}{8} + \frac{1}{8} + \frac{1}{8} + \frac{1}{8} + \frac{1}{8}$



11) $\frac{1}{12} + \frac{1}{12} + \frac{1}{12} + \frac{1}{12}$




12) $\frac{1}{6} + \frac{1}{6} + \frac{1}{6}$




13) $\frac{1}{5} + \frac{1}{5} + \frac{1}{5} + \frac{1}{5}$



14) $\frac{1}{8} + \frac{1}{8} + \frac{1}{8} + \frac{1}{8}$



15) $\frac{1}{10} + \frac{1}{10} + \frac{1}{10}$



Отвѣты

об. I

1. _____

2. _____

3. _____

4. _____

5. _____

6. _____

7. _____

8. _____

9. _____

10. _____

11. _____

12. _____

13. _____

14. _____

15. _____



Найдите соответствующий ответ и напишите его.

об) $\frac{1}{4} + \frac{1}{4}$



1) $\frac{1}{10} + \frac{1}{10} + \frac{1}{10} + \frac{1}{10} + \frac{1}{10} + \frac{1}{10} + \frac{1}{10}$



2) $\frac{1}{5} + \frac{1}{5}$




3) $\frac{1}{5} + \frac{1}{5} + \frac{1}{5}$



4) $\frac{1}{8} + \frac{1}{8}$



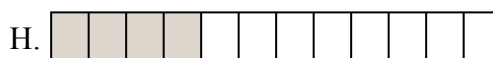
5) $\frac{1}{10} + \frac{1}{10} + \frac{1}{10} + \frac{1}{10} + \frac{1}{10}$



6) $\frac{1}{3} + \frac{1}{3}$



7) $\frac{1}{10} + \frac{1}{10} + \frac{1}{10} + \frac{1}{10}$



8) $\frac{1}{4} + \frac{1}{4} + \frac{1}{4}$




9) $\frac{1}{12} + \frac{1}{12}$




10) $\frac{1}{8} + \frac{1}{8} + \frac{1}{8} + \frac{1}{8} + \frac{1}{8} + \frac{1}{8}$



11) $\frac{1}{12} + \frac{1}{12} + \frac{1}{12} + \frac{1}{12}$




12) $\frac{1}{6} + \frac{1}{6} + \frac{1}{6}$




13) $\frac{1}{5} + \frac{1}{5} + \frac{1}{5} + \frac{1}{5}$



14) $\frac{1}{8} + \frac{1}{8} + \frac{1}{8} + \frac{1}{8}$



15) $\frac{1}{10} + \frac{1}{10} + \frac{1}{10}$

ОТВЕТЫоб. I1. L2. K3. M4. G5. E6. N7. J8. A9. D10. C11. H12. B13. P14. O15. F