



Найдите соответствующий ответ и напишите его.

Ответы

об) $\frac{1}{4} + \frac{1}{4} + \frac{1}{4}$



об. **N**

1) $\frac{1}{8} + \frac{1}{8} + \frac{1}{8} + \frac{1}{8} + \frac{1}{8} + \frac{1}{8} + \frac{1}{8}$



1.

2) $\frac{1}{10} + \frac{1}{10} + \frac{1}{10}$




2.

3) $\frac{1}{6} + \frac{1}{6} + \frac{1}{6} + \frac{1}{6}$




3.

4) $\frac{1}{10} + \frac{1}{10} + \frac{1}{10} + \frac{1}{10} + \frac{1}{10} + \frac{1}{10} + \frac{1}{10}$



4.

5) $\frac{1}{8} + \frac{1}{8} + \frac{1}{8}$




6.

6) $\frac{1}{12} + \frac{1}{12} + \frac{1}{12} + \frac{1}{12} + \frac{1}{12} + \frac{1}{12}$



7.

7) $\frac{1}{5} + \frac{1}{5} + \frac{1}{5}$




8.

8) $\frac{1}{3} + \frac{1}{3}$



9.

9) $\frac{1}{5} + \frac{1}{5} + \frac{1}{5} + \frac{1}{5}$




10.

10) $\frac{1}{12} + \frac{1}{12} + \frac{1}{12}$




11.

11) $\frac{1}{10} + \frac{1}{10} + \frac{1}{10} + \frac{1}{10} + \frac{1}{10} + \frac{1}{10}$



12.

12) $\frac{1}{12} + \frac{1}{12}$



13.

13) $\frac{1}{10} + \frac{1}{10}$



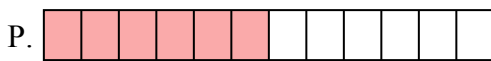
14.

14) $\frac{1}{6} + \frac{1}{6} + \frac{1}{6}$



15.

15) $\frac{1}{8} + \frac{1}{8} + \frac{1}{8} + \frac{1}{8} + \frac{1}{8} + \frac{1}{8}$



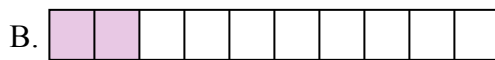


Найдите соответствующий ответ и напишите его.

об) $\frac{1}{4} + \frac{1}{4} + \frac{1}{4}$



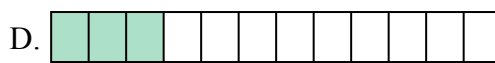
1) $\frac{1}{8} + \frac{1}{8} + \frac{1}{8} + \frac{1}{8} + \frac{1}{8} + \frac{1}{8} + \frac{1}{8}$




2) $\frac{1}{10} + \frac{1}{10} + \frac{1}{10}$




3) $\frac{1}{6} + \frac{1}{6} + \frac{1}{6} + \frac{1}{6}$



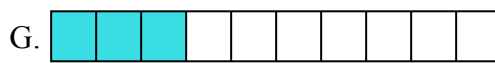
4) $\frac{1}{10} + \frac{1}{10} + \frac{1}{10} + \frac{1}{10} + \frac{1}{10} + \frac{1}{10} + \frac{1}{10}$




5) $\frac{1}{8} + \frac{1}{8} + \frac{1}{8}$




6) $\frac{1}{12} + \frac{1}{12} + \frac{1}{12} + \frac{1}{12} + \frac{1}{12} + \frac{1}{12}$



7) $\frac{1}{5} + \frac{1}{5} + \frac{1}{5}$




8) $\frac{1}{3} + \frac{1}{3}$




9) $\frac{1}{5} + \frac{1}{5} + \frac{1}{5} + \frac{1}{5}$




10) $\frac{1}{12} + \frac{1}{12} + \frac{1}{12}$



11) $\frac{1}{10} + \frac{1}{10} + \frac{1}{10} + \frac{1}{10} + \frac{1}{10} + \frac{1}{10}$



12) $\frac{1}{12} + \frac{1}{12}$



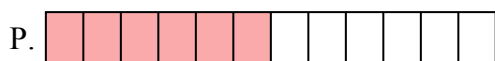
13) $\frac{1}{10} + \frac{1}{10}$



14) $\frac{1}{6} + \frac{1}{6} + \frac{1}{6}$



15) $\frac{1}{8} + \frac{1}{8} + \frac{1}{8} + \frac{1}{8} + \frac{1}{8} + \frac{1}{8}$

ОТВЕТЫоб. N 1. J 2. G 3. E 4. K 5. O 6. P 7. H 8. C 9. F 10. D 11. I 12. M 13. B 14. L 15. A