




Найдите соответствующий ответ и напишите его.

об)  $\frac{1}{5} + \frac{1}{5}$



1)  $\frac{1}{10} + \frac{1}{10} + \frac{1}{10} + \frac{1}{10} + \frac{1}{10} + \frac{1}{10} + \frac{1}{10}$



2)  $\frac{1}{12} + \frac{1}{12} + \frac{1}{12} + \frac{1}{12}$




3)  $\frac{1}{6} + \frac{1}{6}$



4)  $\frac{1}{8} + \frac{1}{8} + \frac{1}{8} + \frac{1}{8} + \frac{1}{8} + \frac{1}{8} + \frac{1}{8}$



5)  $\frac{1}{10} + \frac{1}{10} + \frac{1}{10} + \frac{1}{10} + \frac{1}{10} + \frac{1}{10}$




6)  $\frac{1}{5} + \frac{1}{5} + \frac{1}{5} + \frac{1}{5}$



7)  $\frac{1}{10} + \frac{1}{10} + \frac{1}{10} + \frac{1}{10}$




8)  $\frac{1}{4} + \frac{1}{4}$




9)  $\frac{1}{3} + \frac{1}{3}$



10)  $\frac{1}{8} + \frac{1}{8} + \frac{1}{8} + \frac{1}{8} + \frac{1}{8}$




11)  $\frac{1}{4} + \frac{1}{4} + \frac{1}{4}$



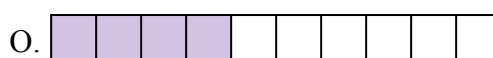
12)  $\frac{1}{10} + \frac{1}{10} + \frac{1}{10} + \frac{1}{10} + \frac{1}{10}$




13)  $\frac{1}{8} + \frac{1}{8} + \frac{1}{8}$



14)  $\frac{1}{8} + \frac{1}{8} + \frac{1}{8} + \frac{1}{8} + \frac{1}{8} + \frac{1}{8}$



15)  $\frac{1}{8} + \frac{1}{8} + \frac{1}{8} + \frac{1}{8}$



**Отв**

об.         E        

1. \_\_\_\_\_

2. \_\_\_\_\_

3. \_\_\_\_\_

4. \_\_\_\_\_

5. \_\_\_\_\_

6. \_\_\_\_\_

7. \_\_\_\_\_

8. \_\_\_\_\_

9. \_\_\_\_\_

10. \_\_\_\_\_

11. \_\_\_\_\_

12. \_\_\_\_\_

13. \_\_\_\_\_

14. \_\_\_\_\_

15. \_\_\_\_\_



Найдите соответствующий ответ и напишите его.

об)  $\frac{1}{5} + \frac{1}{5}$



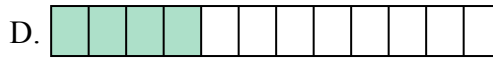
1)  $\frac{1}{10} + \frac{1}{10} + \frac{1}{10} + \frac{1}{10} + \frac{1}{10} + \frac{1}{10} + \frac{1}{10}$



2)  $\frac{1}{12} + \frac{1}{12} + \frac{1}{12} + \frac{1}{12}$




3)  $\frac{1}{6} + \frac{1}{6}$



4)  $\frac{1}{8} + \frac{1}{8} + \frac{1}{8} + \frac{1}{8} + \frac{1}{8} + \frac{1}{8} + \frac{1}{8}$



5)  $\frac{1}{10} + \frac{1}{10} + \frac{1}{10} + \frac{1}{10} + \frac{1}{10} + \frac{1}{10}$




6)  $\frac{1}{5} + \frac{1}{5} + \frac{1}{5} + \frac{1}{5}$



7)  $\frac{1}{10} + \frac{1}{10} + \frac{1}{10} + \frac{1}{10}$



8)  $\frac{1}{4} + \frac{1}{4}$




9)  $\frac{1}{3} + \frac{1}{3}$



10)  $\frac{1}{8} + \frac{1}{8} + \frac{1}{8} + \frac{1}{8} + \frac{1}{8}$




11)  $\frac{1}{4} + \frac{1}{4} + \frac{1}{4}$



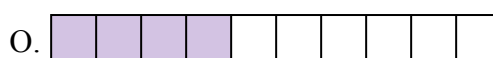
12)  $\frac{1}{10} + \frac{1}{10} + \frac{1}{10} + \frac{1}{10} + \frac{1}{10}$




13)  $\frac{1}{8} + \frac{1}{8} + \frac{1}{8}$



14)  $\frac{1}{8} + \frac{1}{8} + \frac{1}{8} + \frac{1}{8} + \frac{1}{8} + \frac{1}{8}$



15)  $\frac{1}{8} + \frac{1}{8} + \frac{1}{8} + \frac{1}{8}$



**ОТВЕТЫ**

об.       E      

1.       K      

2.       D      

3.       B      

4.       G      

5.       P      

6.       A      

7.       O      

8.       M      

9.       J      

10.      H      

11.      L      

12.      C      

13.      F      

14.      N      

15.      I