




Найдите соответствующий ответ и напишите его.

Ответы

об) $\frac{1}{5} + \frac{1}{5} + \frac{1}{5}$


об. Р

1) $\frac{1}{5} + \frac{1}{5} + \frac{1}{5} + \frac{1}{5}$



1. _____

2) $\frac{1}{4} + \frac{1}{4}$



2. _____

3) $\frac{1}{12} + \frac{1}{12} + \frac{1}{12} + \frac{1}{12} + \frac{1}{12} + \frac{1}{12} + \frac{1}{12}$




3. _____

4) $\frac{1}{4} + \frac{1}{4} + \frac{1}{4}$



4. _____

5) $\frac{1}{10} + \frac{1}{10} + \frac{1}{10} + \frac{1}{10}$



6. _____

6) $\frac{1}{12} + \frac{1}{12} + \frac{1}{12}$




7. _____

7) $\frac{1}{12} + \frac{1}{12} + \frac{1}{12} + \frac{1}{12} + \frac{1}{12} + \frac{1}{12}$



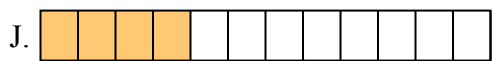
8. _____

8) $\frac{1}{8} + \frac{1}{8} + \frac{1}{8} + \frac{1}{8}$



9. _____

9) $\frac{1}{5} + \frac{1}{5}$




10. _____

10) $\frac{1}{3} + \frac{1}{3}$




11. _____

11) $\frac{1}{12} + \frac{1}{12} + \frac{1}{12} + \frac{1}{12}$



12. _____

12) $\frac{1}{12} + \frac{1}{12}$




13. _____

13) $\frac{1}{6} + \frac{1}{6} + \frac{1}{6}$




14. _____

14) $\frac{1}{8} + \frac{1}{8} + \frac{1}{8} + \frac{1}{8} + \frac{1}{8}$



15. _____

15) $\frac{1}{10} + \frac{1}{10} + \frac{1}{10} + \frac{1}{10} + \frac{1}{10}$





Найдите соответствующий ответ и напишите его.

об) $\frac{1}{5} + \frac{1}{5} + \frac{1}{5}$



1) $\frac{1}{5} + \frac{1}{5} + \frac{1}{5} + \frac{1}{5}$



2) $\frac{1}{4} + \frac{1}{4}$




3) $\frac{1}{12} + \frac{1}{12} + \frac{1}{12} + \frac{1}{12} + \frac{1}{12} + \frac{1}{12} + \frac{1}{12}$



4) $\frac{1}{4} + \frac{1}{4} + \frac{1}{4}$




5) $\frac{1}{10} + \frac{1}{10} + \frac{1}{10} + \frac{1}{10}$




6) $\frac{1}{12} + \frac{1}{12} + \frac{1}{12}$



7) $\frac{1}{12} + \frac{1}{12} + \frac{1}{12} + \frac{1}{12} + \frac{1}{12} + \frac{1}{12}$




8) $\frac{1}{8} + \frac{1}{8} + \frac{1}{8} + \frac{1}{8}$




9) $\frac{1}{5} + \frac{1}{5}$




10) $\frac{1}{3} + \frac{1}{3}$



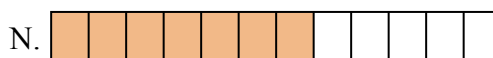
11) $\frac{1}{12} + \frac{1}{12} + \frac{1}{12} + \frac{1}{12}$




12) $\frac{1}{12} + \frac{1}{12}$




13) $\frac{1}{6} + \frac{1}{6} + \frac{1}{6}$



14) $\frac{1}{8} + \frac{1}{8} + \frac{1}{8} + \frac{1}{8} + \frac{1}{8}$



15) $\frac{1}{10} + \frac{1}{10} + \frac{1}{10} + \frac{1}{10} + \frac{1}{10}$

ОТВЕТЫоб. P 1. F 2. A 3. N 4. C 5. K 6. B 7. M 8. E 9. L 10. G 11. J 12. D 13. I 14. O 15. H