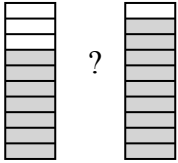


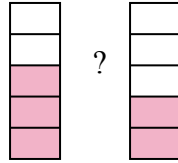


Сравните числители дробей, используя 'больше', 'меньше' или 'равно'.

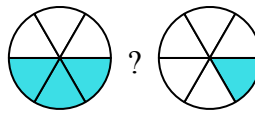
об)



1)



2)



**ОТВЕТЫ**

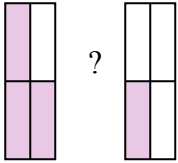
об.  $\frac{7}{10}$  <  $\frac{9}{10}$

1. \_\_\_\_\_

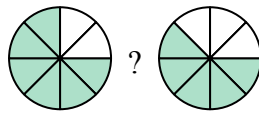
2. \_\_\_\_\_

3. \_\_\_\_\_

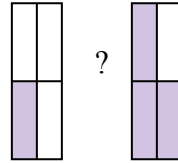
3)



4)



5)



4. \_\_\_\_\_

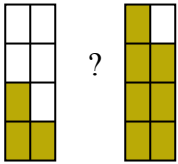
5. \_\_\_\_\_

6. \_\_\_\_\_

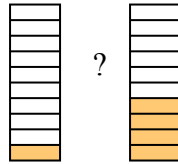
7. \_\_\_\_\_

8. \_\_\_\_\_

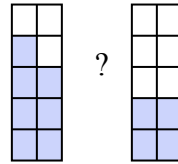
6)



7)



8)



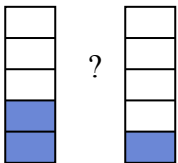
9. \_\_\_\_\_

10. \_\_\_\_\_

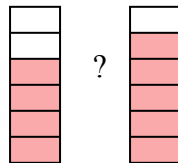
11. \_\_\_\_\_

12. \_\_\_\_\_

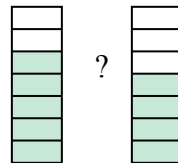
9)



10)



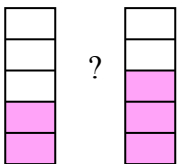
11)



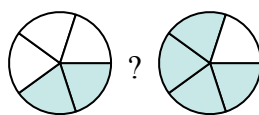
13. \_\_\_\_\_

14. \_\_\_\_\_

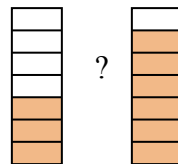
12)



13)

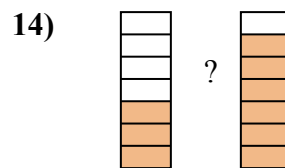
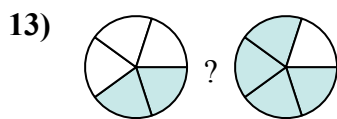
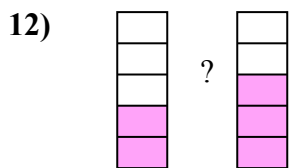
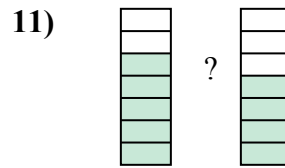
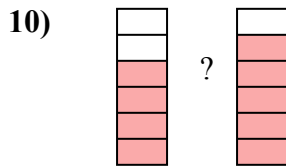
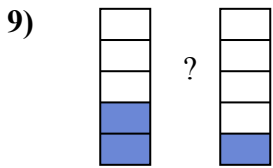
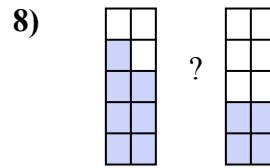
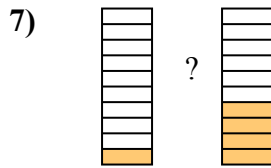
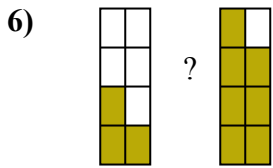
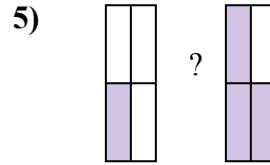
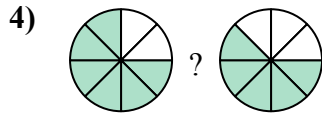
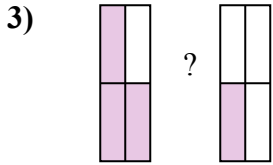
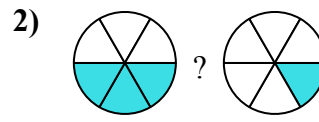
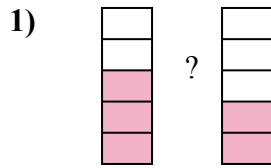



14)





Сравните числители дробей, используя 'больше', 'меньше' или 'равно'.

**ОТВЕТЫ**

об.	$\frac{7}{10}$	<	$\frac{9}{10}$
1.	$\frac{3}{5}$	>	$\frac{2}{5}$
2.	$\frac{3}{6}$	>	$\frac{1}{6}$
3.	$\frac{3}{4}$	>	$\frac{1}{4}$
4.	$\frac{6}{8}$	>	$\frac{5}{8}$
5.	$\frac{1}{4}$	<	$\frac{3}{4}$
6.	$\frac{3}{8}$	<	$\frac{7}{8}$
7.	$\frac{1}{10}$	<	$\frac{4}{10}$
8.	$\frac{7}{10}$	>	$\frac{4}{10}$
9.	$\frac{2}{5}$	>	$\frac{1}{5}$
10.	$\frac{4}{6}$	<	$\frac{5}{6}$
11.	$\frac{5}{7}$	>	$\frac{4}{7}$
12.	$\frac{2}{5}$	<	$\frac{3}{5}$
13.	$\frac{2}{5}$	<	$\frac{4}{5}$
14.	$\frac{3}{7}$	<	$\frac{6}{7}$