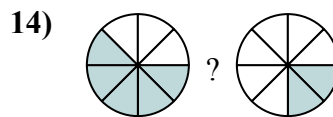
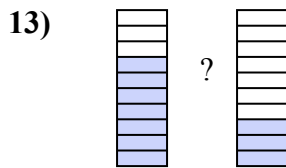
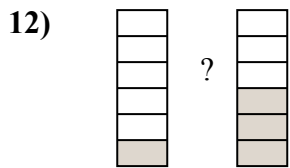
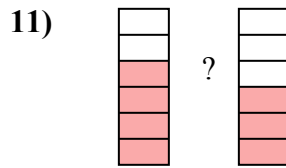
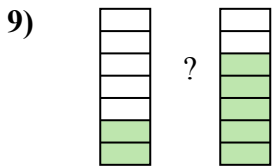
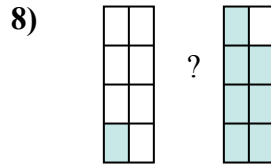
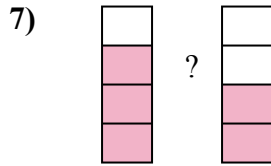
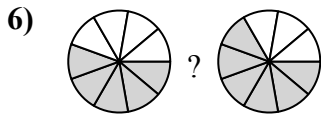
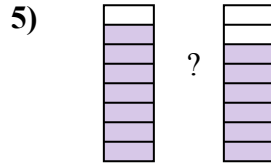
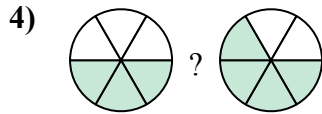
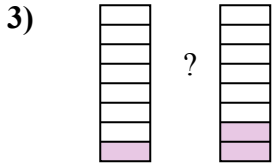
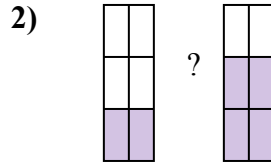
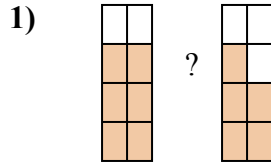
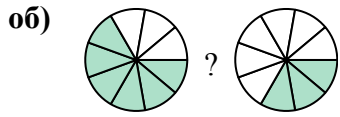




Сравните числители дробей, используя 'больше', 'меньше' или 'равно'.



ОТВЕТЫ

об. $\frac{6}{9}$ $>$ $\frac{3}{9}$

1. _____

2. _____

3. _____

4. _____

5. _____

6. _____

7. _____

8. _____

9. _____

10. _____

11. _____

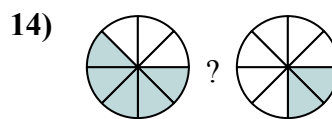
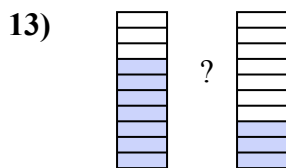
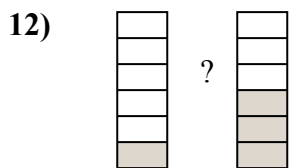
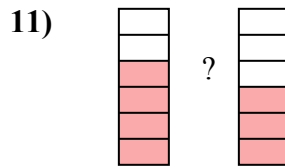
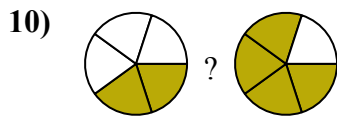
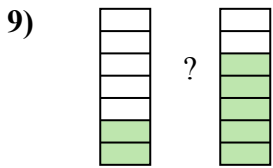
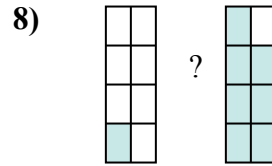
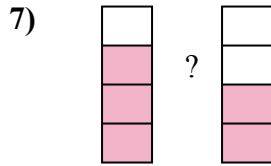
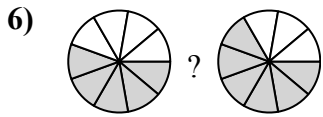
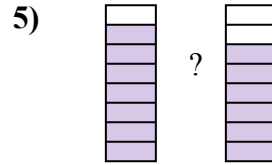
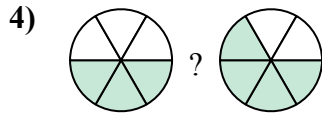
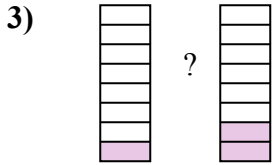
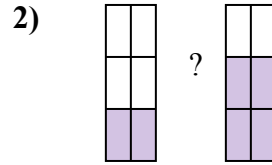
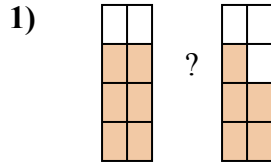
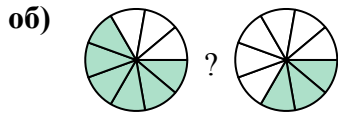
12. _____

13. _____

14. _____



Сравните числители дробей, используя 'больше', 'меньше' или 'равно'.

**ОТВЕТЫ**

| | | | |
|-----|----------------|---|----------------|
| об. | $\frac{6}{9}$ | > | $\frac{3}{9}$ |
| 1. | $\frac{6}{8}$ | > | $\frac{5}{8}$ |
| 2. | $\frac{2}{6}$ | < | $\frac{4}{6}$ |
| 3. | $\frac{1}{8}$ | < | $\frac{2}{8}$ |
| 4. | $\frac{3}{6}$ | < | $\frac{4}{6}$ |
| 5. | $\frac{7}{8}$ | > | $\frac{6}{8}$ |
| 6. | $\frac{5}{9}$ | < | $\frac{6}{9}$ |
| 7. | $\frac{3}{4}$ | > | $\frac{2}{4}$ |
| 8. | $\frac{1}{8}$ | < | $\frac{7}{8}$ |
| 9. | $\frac{2}{7}$ | < | $\frac{5}{7}$ |
| 10. | $\frac{2}{5}$ | < | $\frac{4}{5}$ |
| 11. | $\frac{4}{6}$ | > | $\frac{3}{6}$ |
| 12. | $\frac{1}{6}$ | < | $\frac{3}{6}$ |
| 13. | $\frac{7}{10}$ | > | $\frac{3}{10}$ |
| 14. | $\frac{5}{8}$ | > | $\frac{2}{8}$ |