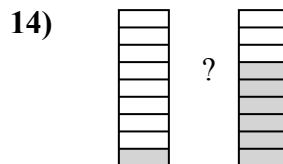
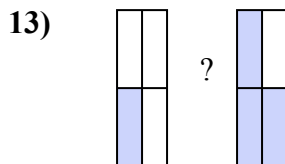
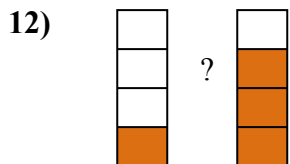
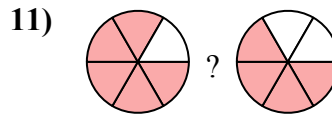
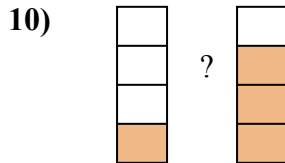
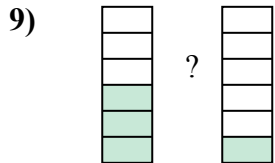
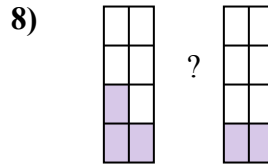
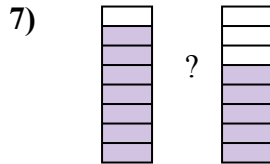
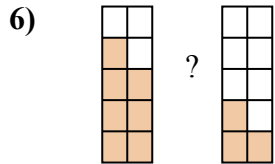
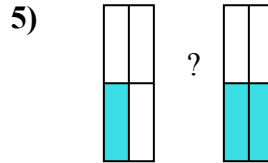

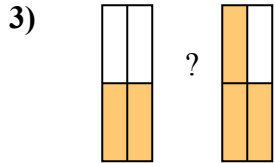
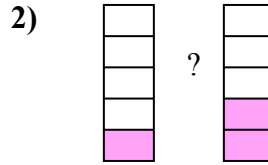
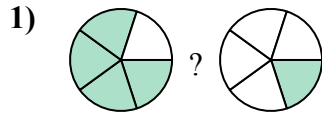
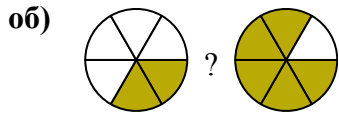




Сравните числители дробей, используя 'больше', 'меньше' или 'равно'.



ОТВЕТЫ

об. $\frac{2}{6}$ < $\frac{5}{6}$

1. _____

2. _____

3. _____

4. _____

5. _____

6. _____

7. _____

8. _____

9. _____

10. _____

11. _____

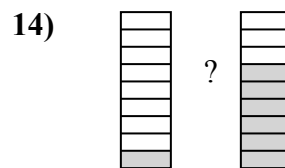
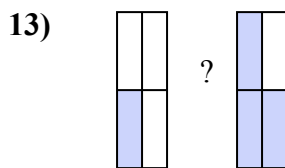
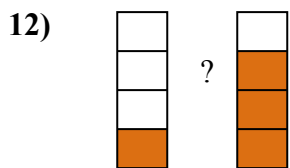
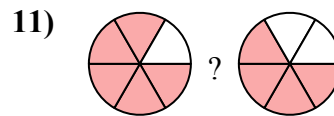
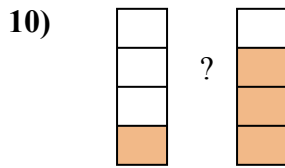
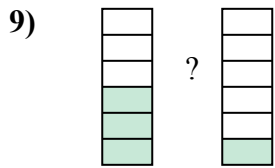
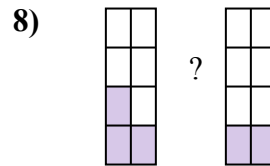
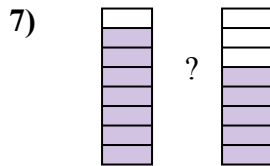
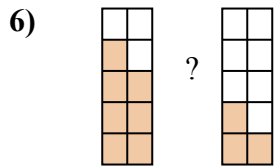
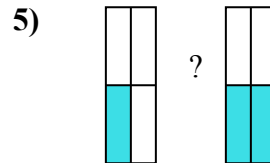
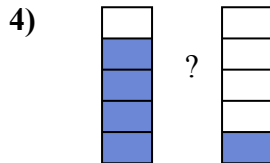
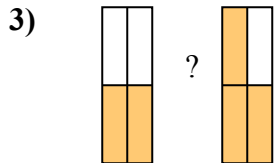
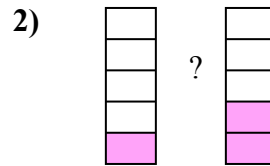
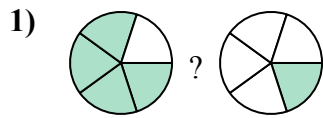
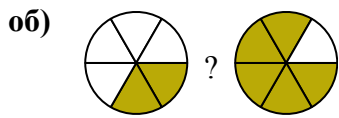
12. _____

13. _____

14. _____



Сравните числители дробей, используя 'больше', 'меньше' или 'равно'.

**ОТВЕТЫ**

об.	$\frac{2}{6}$	<	$\frac{5}{6}$
1.	$\frac{4}{5}$	>	$\frac{1}{5}$
2.	$\frac{1}{5}$	<	$\frac{2}{5}$
3.	$\frac{2}{4}$	<	$\frac{3}{4}$
4.	$\frac{4}{5}$	>	$\frac{1}{5}$
5.	$\frac{1}{4}$	<	$\frac{2}{4}$
6.	$\frac{7}{10}$	>	$\frac{3}{10}$
7.	$\frac{7}{8}$	>	$\frac{5}{8}$
8.	$\frac{3}{8}$	>	$\frac{2}{8}$
9.	$\frac{3}{6}$	>	$\frac{1}{6}$
10.	$\frac{1}{4}$	<	$\frac{3}{4}$
11.	$\frac{5}{6}$	>	$\frac{4}{6}$
12.	$\frac{1}{4}$	<	$\frac{3}{4}$
13.	$\frac{1}{4}$	<	$\frac{3}{4}$
14.	$\frac{1}{9}$	<	$\frac{6}{9}$