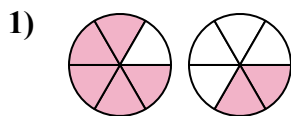




Определите под какой буквой находятся соответствующие дроби.

ОТВЕТЫ

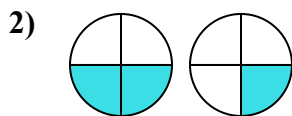


A. $\frac{5}{1} < \frac{2}{4}$

B. $\frac{5}{6} < \frac{2}{6}$

C. $\frac{6}{5} > \frac{6}{2}$

D. $\frac{5}{6} > \frac{2}{6}$

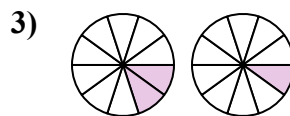


A. $\frac{2}{2} > \frac{1}{3}$

B. $\frac{4}{2} > \frac{4}{1}$

C. $\frac{2}{4} < \frac{1}{4}$

D. $\frac{2}{4} > \frac{1}{4}$

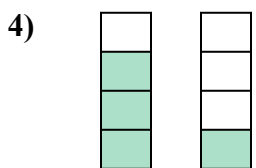


A. $\frac{2}{10} > \frac{1}{10}$

B. $\frac{2}{10} < \frac{1}{10}$

C. $\frac{2}{8} < \frac{1}{9}$

D. $\frac{8}{2} > \frac{9}{1}$



A. $\frac{3}{1} > \frac{1}{3}$

B. $\frac{4}{3} > \frac{4}{1}$

C. $\frac{3}{1} < \frac{1}{3}$

D. $\frac{3}{4} > \frac{1}{4}$

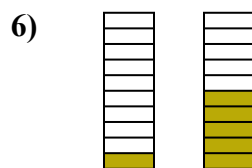


A. $\frac{2}{4} < \frac{3}{3}$

B. $\frac{6}{2} > \frac{6}{3}$

C. $\frac{2}{6} < \frac{3}{6}$

D. $\frac{4}{2} > \frac{3}{3}$

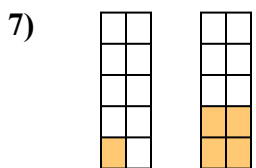


A. $\frac{1}{9} < \frac{5}{5}$

B. $\frac{9}{1} < \frac{5}{5}$

C. $\frac{10}{1} > \frac{10}{5}$

D. $\frac{1}{10} < \frac{5}{10}$

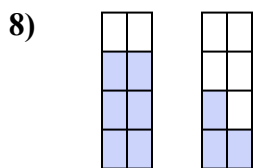


A. $\frac{9}{1} > \frac{6}{4}$

B. $\frac{10}{1} > \frac{10}{4}$

C. $\frac{1}{10} < \frac{4}{10}$

D. $\frac{1}{10} > \frac{4}{10}$

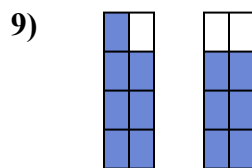


A. $\frac{6}{8} > \frac{3}{8}$

B. $\frac{8}{6} > \frac{8}{3}$

C. $\frac{6}{2} < \frac{3}{5}$

D. $\frac{2}{6} > \frac{5}{3}$



A. $\frac{1}{7} > \frac{2}{6}$

B. $\frac{7}{8} > \frac{6}{8}$

C. $\frac{7}{1} < \frac{6}{2}$

D. $\frac{1}{7} < \frac{2}{6}$

1. _____

2. _____

3. _____

4. _____

5. _____

6. _____

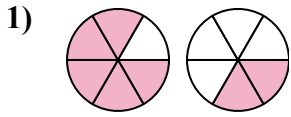
7. _____

8. _____

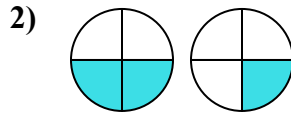
9. _____



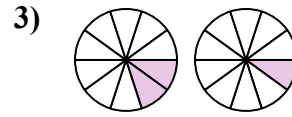
Определите под какой буквой находятся соответствующие дроби.



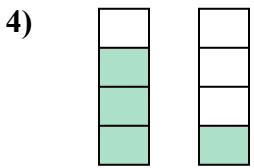
- A. $\frac{5}{1} < \frac{2}{4}$
 B. $\frac{5}{6} < \frac{2}{6}$
 C. $\frac{6}{5} > \frac{6}{2}$
 D. $\frac{5}{6} > \frac{2}{6}$



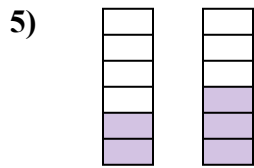
- A. $\frac{2}{2} > \frac{1}{3}$
 B. $\frac{4}{2} > \frac{4}{1}$
 C. $\frac{2}{4} < \frac{1}{4}$
 D. $\frac{2}{4} > \frac{1}{4}$



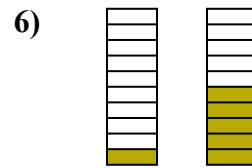
- A. $\frac{2}{10} > \frac{1}{10}$
 B. $\frac{2}{10} < \frac{1}{10}$
 C. $\frac{2}{8} < \frac{1}{9}$
 D. $\frac{8}{2} > \frac{9}{1}$



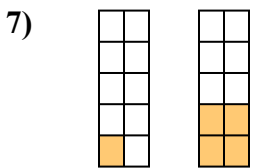
- A. $\frac{3}{1} > \frac{1}{3}$
 B. $\frac{4}{3} > \frac{4}{1}$
 C. $\frac{3}{1} < \frac{1}{3}$
 D. $\frac{3}{4} > \frac{1}{4}$



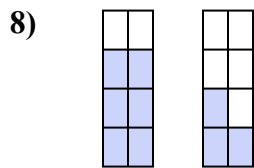
- A. $\frac{2}{4} < \frac{3}{3}$
 B. $\frac{6}{2} > \frac{6}{3}$
 C. $\frac{2}{6} < \frac{3}{6}$
 D. $\frac{4}{2} > \frac{3}{3}$



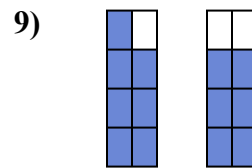
- A. $\frac{1}{9} < \frac{5}{5}$
 B. $\frac{9}{1} < \frac{5}{5}$
 C. $\frac{10}{1} > \frac{10}{5}$
 D. $\frac{1}{10} < \frac{5}{10}$



- A. $\frac{9}{1} > \frac{6}{4}$
 B. $\frac{10}{1} > \frac{10}{4}$
 C. $\frac{1}{10} < \frac{4}{10}$
 D. $\frac{1}{10} > \frac{4}{10}$



- A. $\frac{6}{8} > \frac{3}{8}$
 B. $\frac{8}{6} > \frac{8}{3}$
 C. $\frac{6}{2} < \frac{3}{5}$
 D. $\frac{2}{6} > \frac{5}{3}$



- A. $\frac{1}{7} > \frac{2}{6}$
 B. $\frac{7}{8} > \frac{6}{8}$
 C. $\frac{7}{1} < \frac{6}{2}$
 D. $\frac{1}{7} < \frac{2}{6}$

ОТВЕТЫ

1. **D**
 2. **D**
 3. **A**
 4. **D**
 5. **C**
 6. **D**
 7. **C**
 8. **A**
 9. **B**