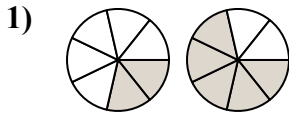




Определите под какой буквой находятся соответствующие дроби.

ОТВЕТЫ

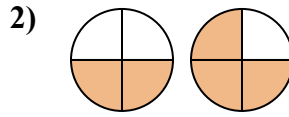


A. $\frac{5}{2} < \frac{2}{5}$

B. $\frac{2}{5} > \frac{5}{2}$

C. $\frac{7}{2} > \frac{7}{5}$

D. $\frac{2}{7} < \frac{5}{7}$

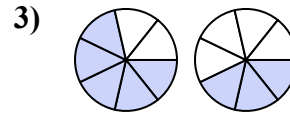


A. $\frac{2}{2} < \frac{1}{3}$

B. $\frac{2}{2} > \frac{3}{1}$

C. $\frac{2}{4} < \frac{3}{4}$

D. $\frac{2}{2} < \frac{3}{1}$

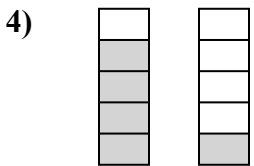


A. $\frac{5}{7} > \frac{3}{7}$

B. $\frac{5}{2} > \frac{3}{4}$

C. $\frac{2}{5} > \frac{4}{3}$

D. $\frac{5}{7} < \frac{3}{7}$

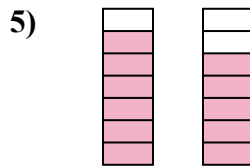


A. $\frac{4}{1} > \frac{1}{4}$

B. $\frac{1}{4} < \frac{4}{1}$

C. $\frac{4}{5} > \frac{1}{5}$

D. $\frac{5}{4} > \frac{5}{1}$

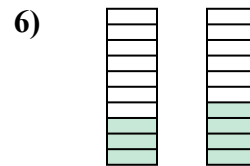


A. $\frac{1}{6} < \frac{2}{5}$

B. $\frac{6}{7} > \frac{5}{7}$

C. $\frac{6}{1} < \frac{5}{2}$

D. $\frac{6}{7} < \frac{5}{7}$

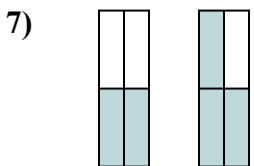


A. $\frac{10}{3} > \frac{10}{4}$

B. $\frac{3}{10} < \frac{4}{10}$

C. $\frac{7}{3} > \frac{6}{4}$

D. $\frac{3}{7} > \frac{4}{6}$

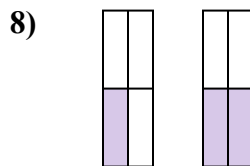


A. $\frac{4}{2} > \frac{4}{3}$

B. $\frac{2}{2} < \frac{3}{1}$

C. $\frac{2}{4} < \frac{3}{4}$

D. $\frac{2}{2} < \frac{1}{3}$

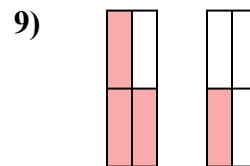


A. $\frac{1}{3} > \frac{2}{2}$

B. $\frac{1}{4} > \frac{2}{4}$

C. $\frac{1}{4} < \frac{2}{4}$

D. $\frac{1}{3} < \frac{2}{2}$



A. $\frac{1}{3} > \frac{3}{1}$

B. $\frac{3}{4} > \frac{1}{4}$

C. $\frac{1}{3} < \frac{3}{1}$

D. $\frac{3}{1} < \frac{1}{3}$

1. _____

2. _____

3. _____

4. _____

5. _____

6. _____

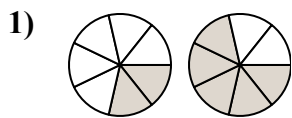
7. _____

8. _____

9. _____



Определите под какой буквой находятся соответствующие дроби.

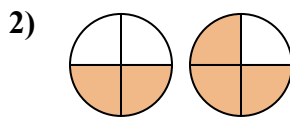


A. $\frac{5}{2} < \frac{2}{5}$

B. $\frac{2}{5} > \frac{5}{2}$

C. $\frac{7}{2} > \frac{7}{5}$

D. $\frac{2}{7} < \frac{5}{7}$

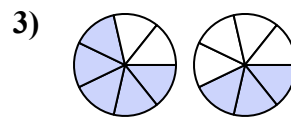


A. $\frac{2}{2} < \frac{1}{3}$

B. $\frac{2}{2} > \frac{3}{1}$

C. $\frac{2}{4} < \frac{3}{4}$

D. $\frac{2}{2} < \frac{3}{1}$

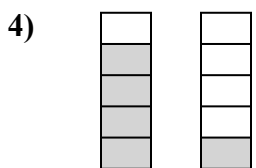


A. $\frac{5}{7} > \frac{3}{7}$

B. $\frac{5}{2} > \frac{3}{4}$

C. $\frac{2}{5} > \frac{4}{3}$

D. $\frac{5}{7} < \frac{3}{7}$

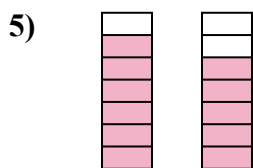


A. $\frac{4}{1} > \frac{1}{4}$

B. $\frac{1}{4} < \frac{4}{1}$

C. $\frac{4}{5} > \frac{1}{5}$

D. $\frac{5}{4} > \frac{5}{1}$

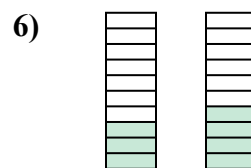


A. $\frac{1}{6} < \frac{2}{5}$

B. $\frac{6}{7} > \frac{5}{7}$

C. $\frac{6}{1} < \frac{5}{2}$

D. $\frac{6}{7} < \frac{5}{7}$

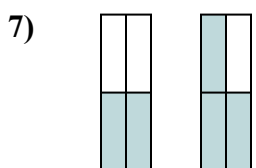


A. $\frac{10}{3} > \frac{10}{4}$

B. $\frac{3}{10} < \frac{4}{10}$

C. $\frac{7}{3} > \frac{6}{4}$

D. $\frac{3}{7} > \frac{4}{6}$

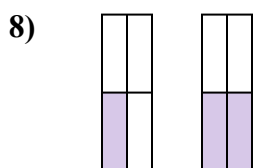


A. $\frac{4}{2} > \frac{4}{3}$

B. $\frac{2}{2} < \frac{3}{1}$

C. $\frac{2}{4} < \frac{3}{4}$

D. $\frac{2}{2} < \frac{1}{3}$

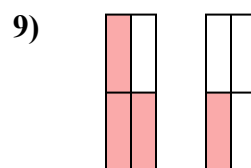


A. $\frac{1}{3} > \frac{2}{2}$

B. $\frac{1}{4} > \frac{2}{4}$

C. $\frac{1}{4} < \frac{2}{4}$

D. $\frac{1}{3} < \frac{2}{2}$



A. $\frac{1}{3} > \frac{3}{1}$

B. $\frac{3}{4} > \frac{1}{4}$

C. $\frac{1}{3} < \frac{3}{1}$

D. $\frac{3}{1} < \frac{1}{3}$

ОТВЕТЫ1. **D**2. **C**3. **A**4. **C**5. **B**6. **B**7. **C**8. **C**9. **B**