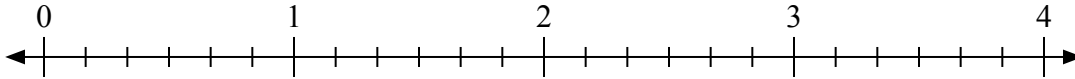




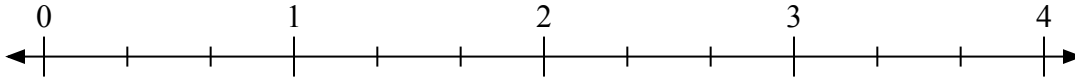
Используйте числовую прямую для решения задачи.

Ответы

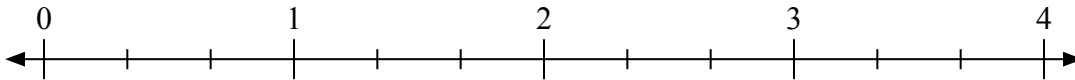
1) $3:\frac{2}{6}$



2) $2:\frac{2}{3}$



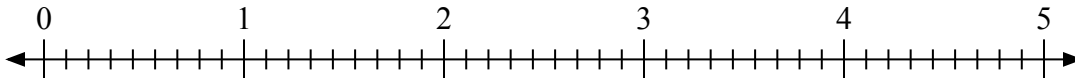
3) $4:\frac{1}{3}$



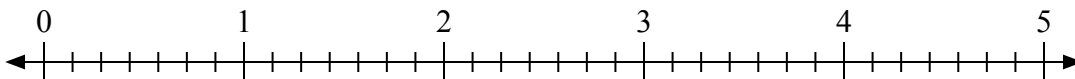
4) $2:\frac{1}{2}$



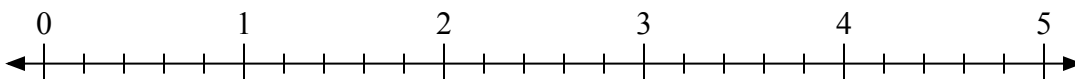
5) $3:\frac{5}{9}$



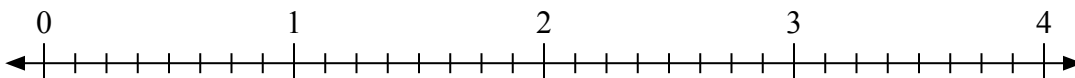
6) $4:\frac{1}{7}$



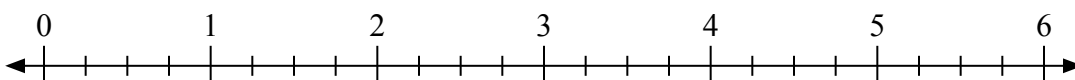
7) $4:\frac{2}{5}$



8) $4:\frac{3}{8}$



9) $2:\frac{1}{4}$



1. _____

2. _____

3. _____

4. _____

5. _____

6. _____

7. _____

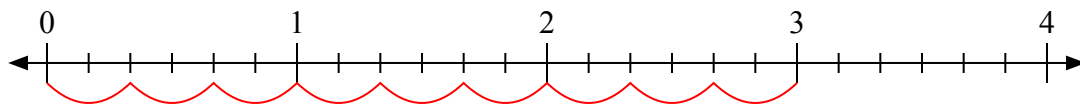
8. _____

9. _____

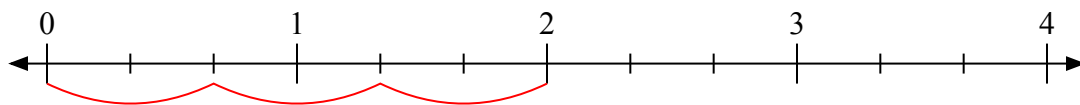


Используйте числовую прямую для решения задачи.

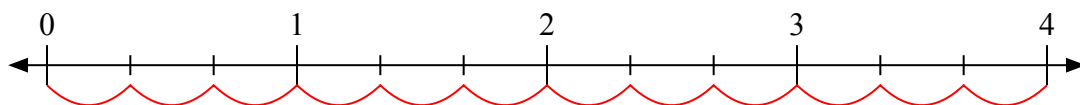
1) $3:\frac{2}{6}$



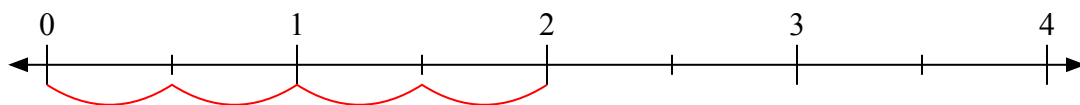
2) $2:\frac{2}{3}$



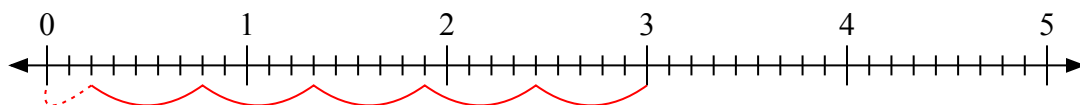
3) $4:\frac{1}{3}$



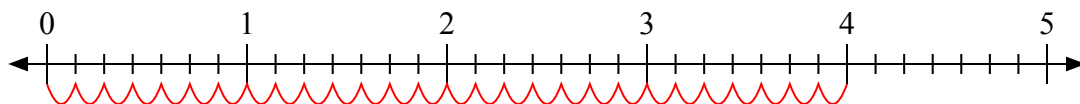
4) $2:\frac{1}{2}$



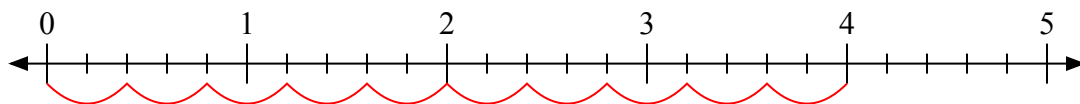
5) $3:\frac{5}{9}$



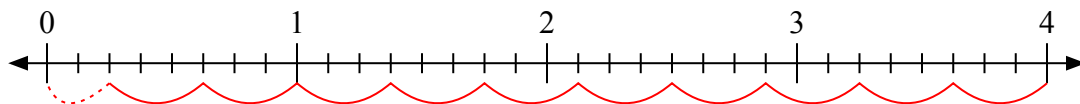
6) $4:\frac{1}{7}$



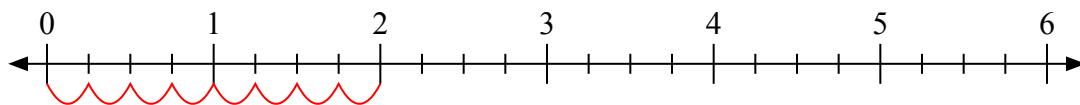
7) $4:\frac{2}{5}$



8) $4:\frac{3}{8}$



9) $2:\frac{1}{4}$



Отвѣты

1. 9

2. 3

3. 12

4. 4

5. $5\frac{2}{5}$

6. 28

7. 10

8. $10\frac{2}{3}$

9. 8