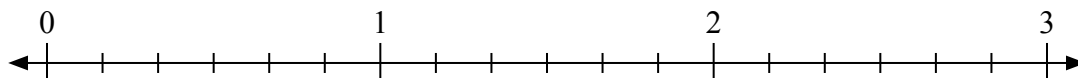




Используйте числовую прямую для решения задачи.

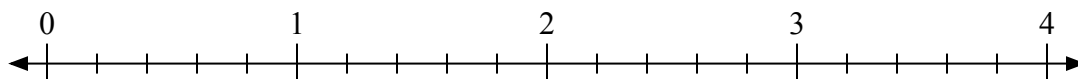
**Отвѣты**

1)  $3:\frac{3}{6}$



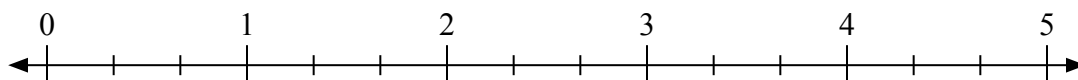
1. \_\_\_\_\_

2)  $2:\frac{4}{5}$



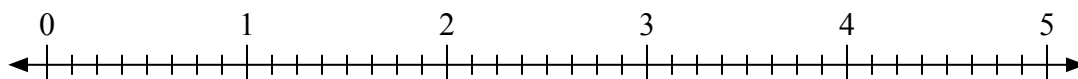
2. \_\_\_\_\_

3)  $5:\frac{1}{3}$



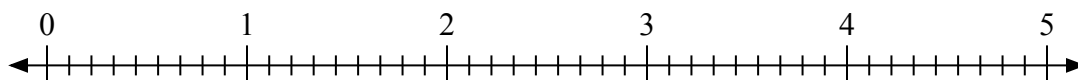
3. \_\_\_\_\_

4)  $3:\frac{5}{8}$



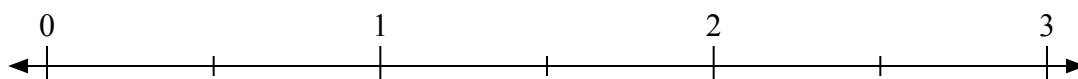
4. \_\_\_\_\_

5)  $3:\frac{7}{9}$



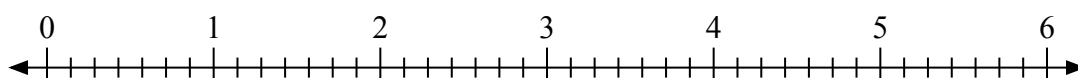
5. \_\_\_\_\_

6)  $3:\frac{1}{2}$



6. \_\_\_\_\_

7)  $5:\frac{3}{7}$



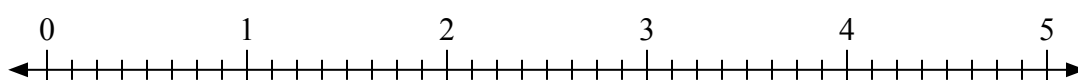
7. \_\_\_\_\_

8)  $5:\frac{1}{2}$



8. \_\_\_\_\_

9)  $4:\frac{4}{8}$

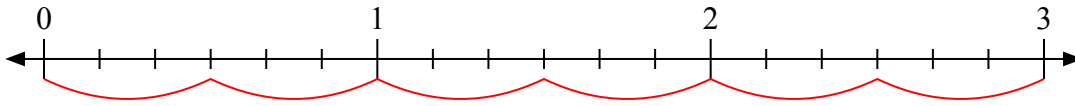


9. \_\_\_\_\_

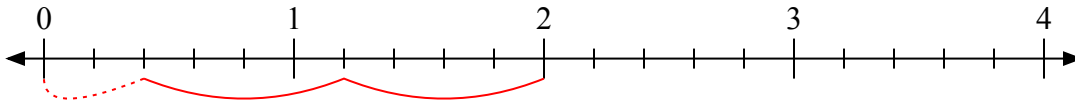


Используйте числовую прямую для решения задачи.

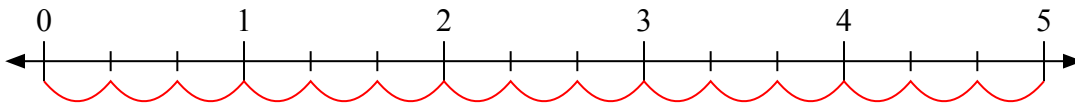
1)  $3:\frac{3}{6}$



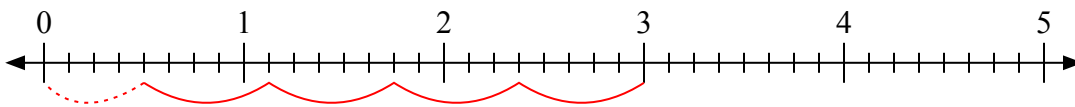
2)  $2:\frac{4}{5}$



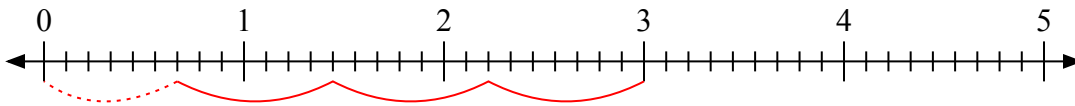
3)  $5:\frac{1}{3}$



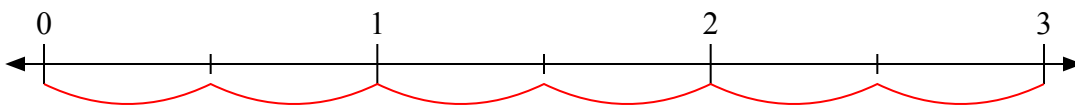
4)  $3:\frac{5}{8}$



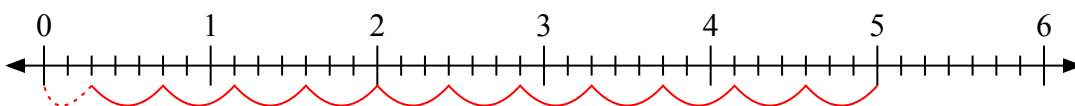
5)  $3:\frac{7}{9}$



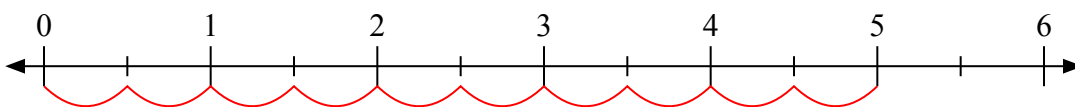
6)  $3:\frac{1}{2}$



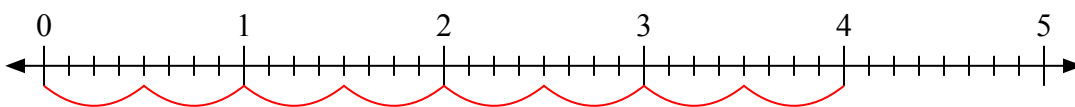
7)  $5:\frac{3}{7}$



8)  $5:\frac{1}{2}$



9)  $4:\frac{4}{8}$



**Ответы**

1. 6

2.  $2\frac{2}{4}$

3. 15

4.  $4\frac{4}{5}$

5.  $3\frac{6}{7}$

6. 6

7.  $11\frac{2}{3}$

8. 10

9. 8