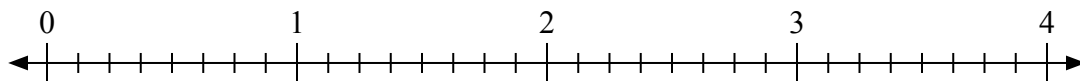




Используйте числовую прямую для решения задачи.

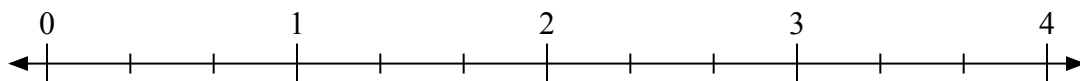
**Ответы**

1)  $2:\frac{1}{8}$



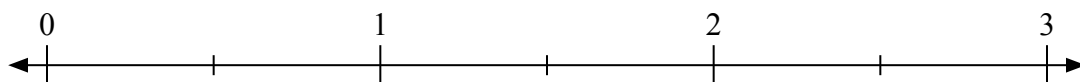
1. \_\_\_\_\_

2)  $2:\frac{2}{3}$



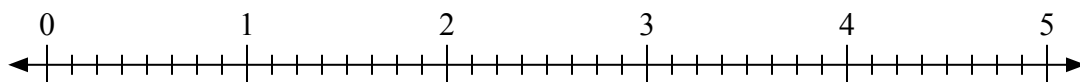
2. \_\_\_\_\_

3)  $2:\frac{1}{2}$



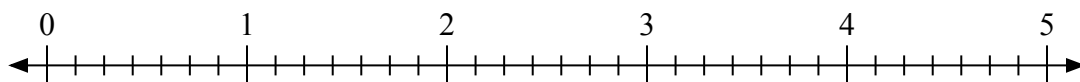
3. \_\_\_\_\_

4)  $3:\frac{5}{8}$



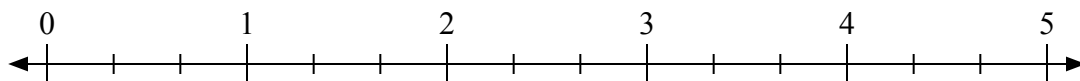
4. \_\_\_\_\_

5)  $2:\frac{6}{7}$



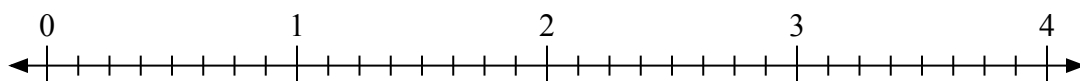
5. \_\_\_\_\_

6)  $4:\frac{1}{3}$



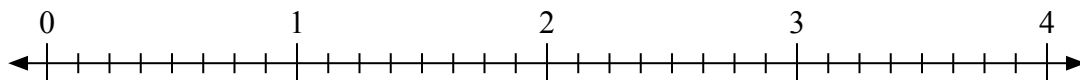
6. \_\_\_\_\_

7)  $2:\frac{3}{8}$



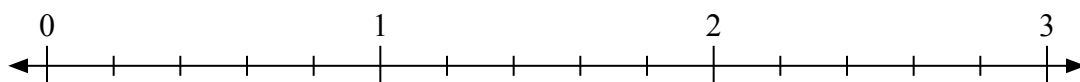
7. \_\_\_\_\_

8)  $2:\frac{2}{8}$



8. \_\_\_\_\_

9)  $2:\frac{3}{5}$

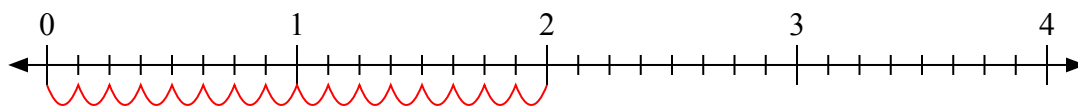


9. \_\_\_\_\_

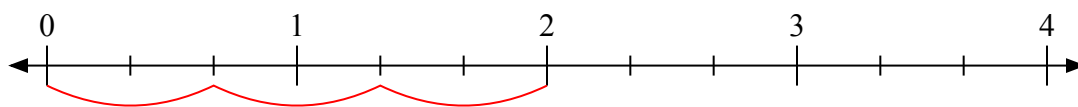


Используйте числовую прямую для решения задачи.

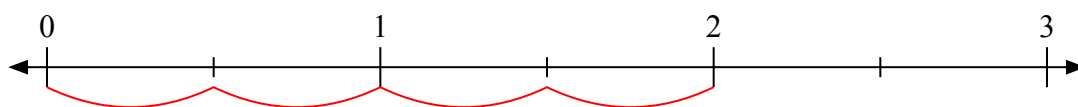
1)  $2 : \frac{1}{8}$



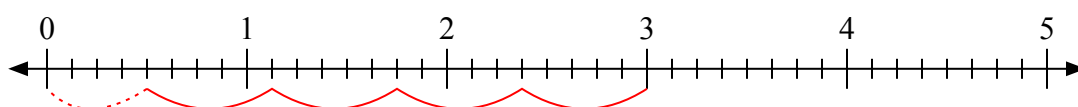
2)  $2 : \frac{2}{3}$



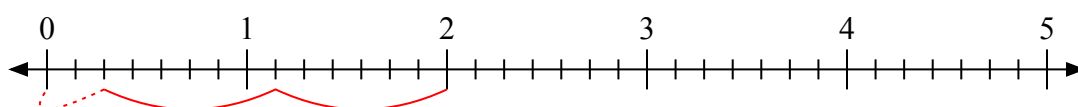
3)  $2 : \frac{1}{2}$



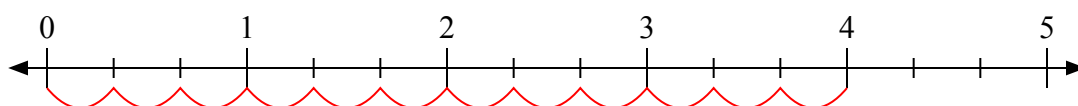
4)  $3 : \frac{5}{8}$



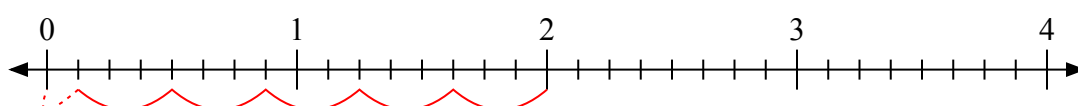
5)  $2 : \frac{6}{7}$



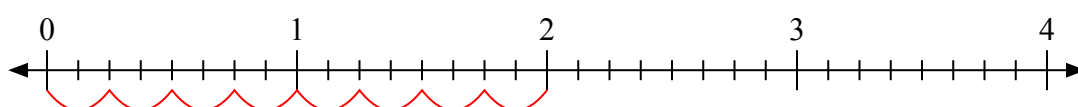
6)  $4 : \frac{1}{3}$



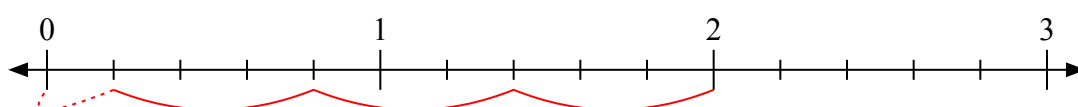
7)  $2 : \frac{3}{8}$



8)  $2 : \frac{2}{8}$



9)  $2 : \frac{3}{5}$



**Отвѣты**

1. 16

2. 3

3. 4

4.  $4 \frac{4}{5}$

5.  $2 \frac{2}{6}$

6. 12

7.  $5 \frac{1}{3}$

8. 8

9.  $3 \frac{1}{3}$