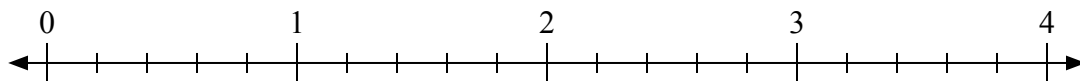




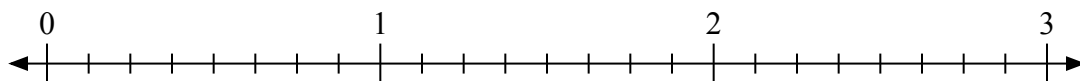
Используйте числовую прямую для решения задачи.

Ответы

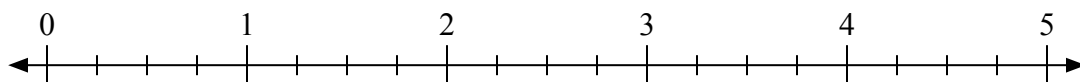
1) $3:\frac{3}{5}$



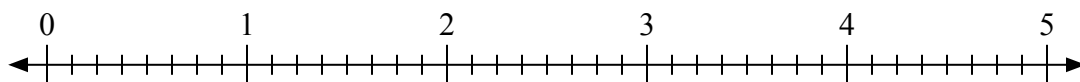
2) $3:\frac{7}{8}$



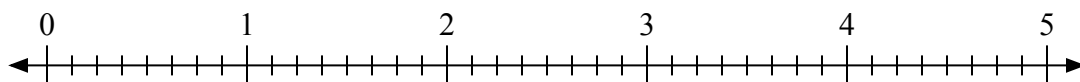
3) $2:\frac{1}{4}$




4) $4:\frac{6}{8}$



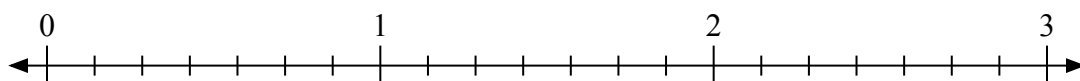
5) $2:\frac{7}{8}$



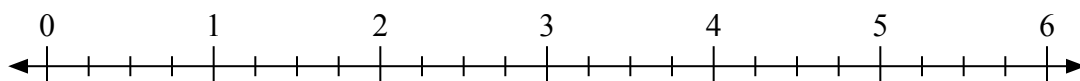
6) $2:\frac{1}{3}$



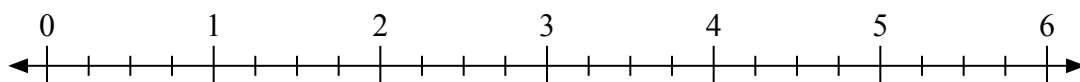
7) $3:\frac{4}{7}$



8) $5:\frac{3}{4}$



9) $6:\frac{3}{4}$



1. _____

2. _____

3. _____

4. _____

5. _____

6. _____

7. _____

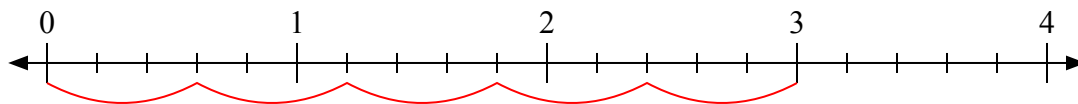
8. _____

9. _____

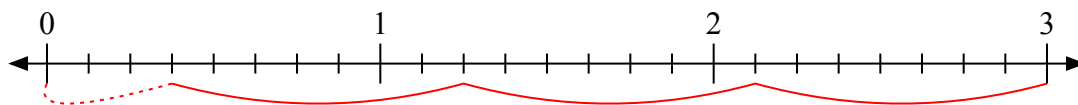


Используйте числовую прямую для решения задачи.

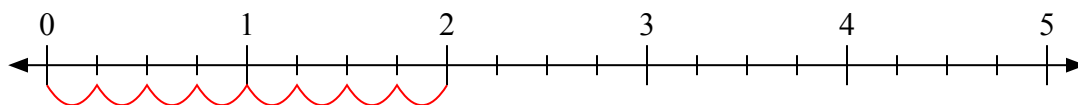
1) $3 : \frac{3}{5}$



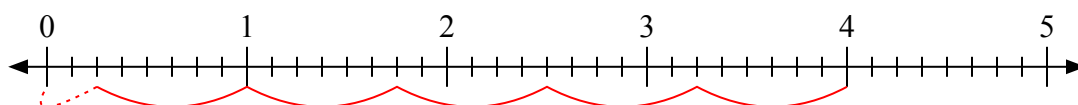
2) $3 : \frac{7}{8}$



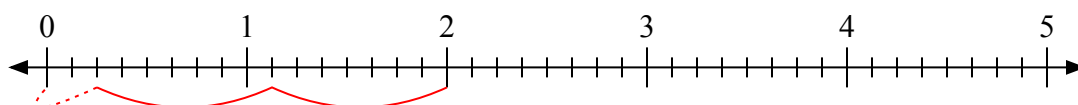
3) $2 : \frac{1}{4}$



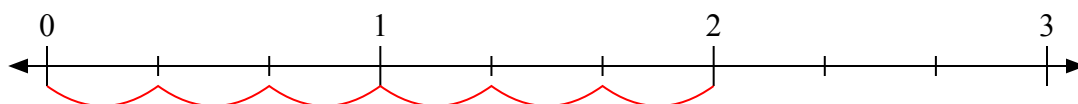
4) $4 : \frac{6}{8}$



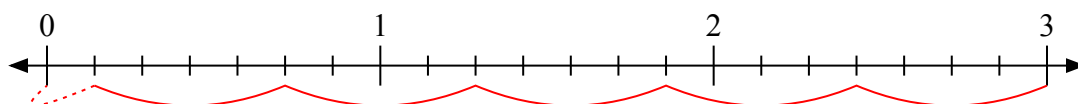
5) $2 : \frac{7}{8}$



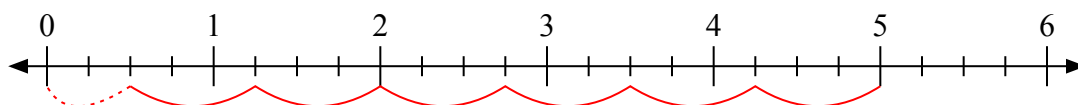
6) $2 : \frac{1}{3}$



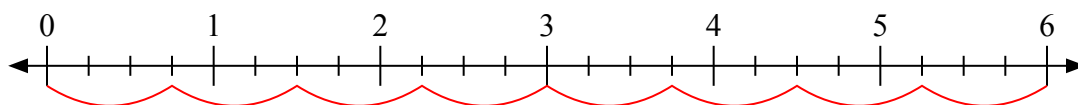
7) $3 : \frac{4}{7}$



8) $5 : \frac{3}{4}$



9) $6 : \frac{3}{4}$



Ответы

1. 5

2. $3 \frac{3}{7}$

3. 8

4. $5 \frac{2}{6}$

5. $2 \frac{2}{7}$

6. 6

7. $5 \frac{1}{4}$

8. $6 \frac{2}{3}$

9. 8