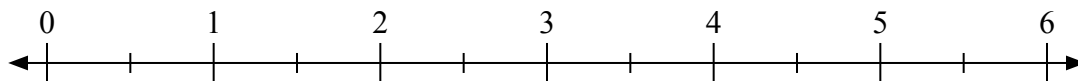




Используйте числовую прямую для решения задачи.

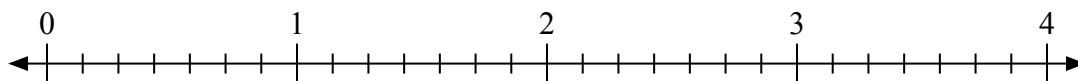
**Отвѣты**

1)  $5 : \frac{1}{2}$



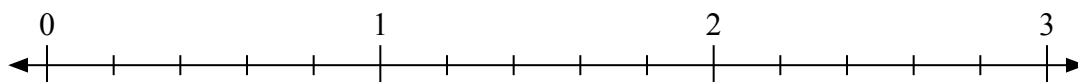
1. \_\_\_\_\_

2)  $4 : \frac{4}{7}$



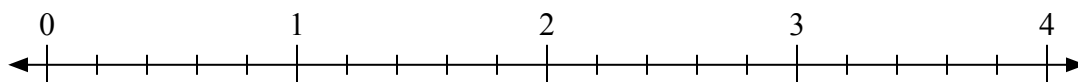
2. \_\_\_\_\_

3)  $3 : \frac{1}{5}$



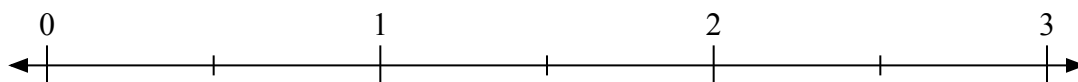
3. \_\_\_\_\_

4)  $2 : \frac{2}{5}$



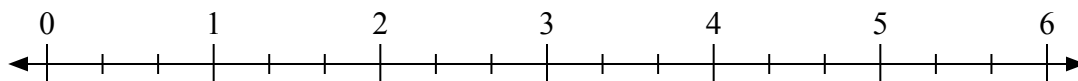
4. \_\_\_\_\_

5)  $2 : \frac{1}{2}$



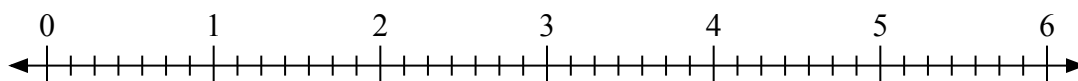
5. \_\_\_\_\_

6)  $3 : \frac{2}{3}$



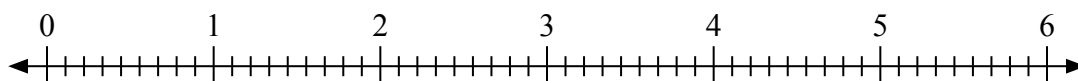
6. \_\_\_\_\_

7)  $2 : \frac{2}{7}$



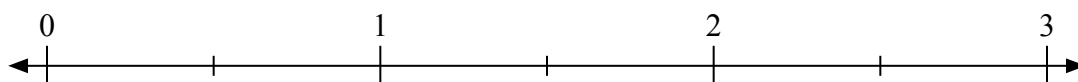
7. \_\_\_\_\_

8)  $2 : \frac{4}{9}$



8. \_\_\_\_\_

9)  $3 : \frac{1}{2}$

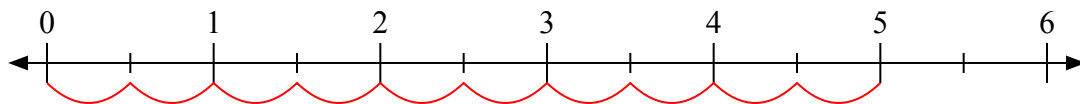


9. \_\_\_\_\_

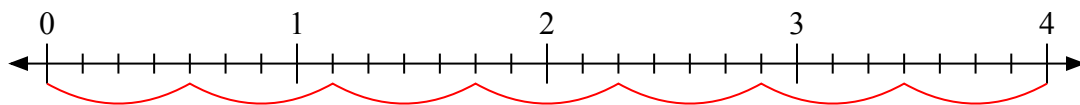


Используйте числовую прямую для решения задачи.

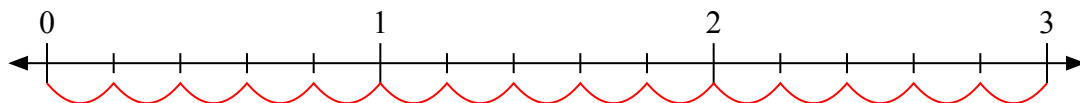
1)  $5 : \frac{1}{2}$



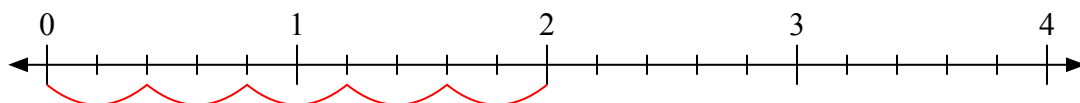
2)  $4 : \frac{4}{7}$



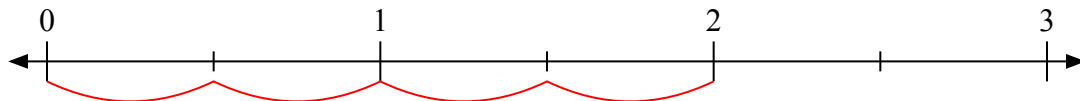
3)  $3 : \frac{1}{5}$



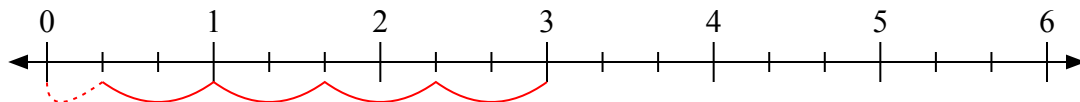
4)  $2 : \frac{2}{5}$



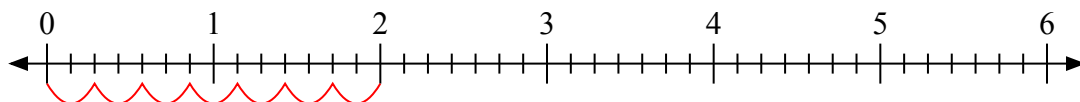
5)  $2 : \frac{1}{2}$



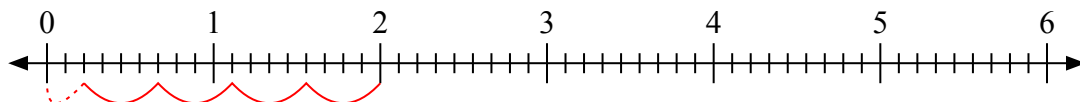
6)  $3 : \frac{2}{3}$



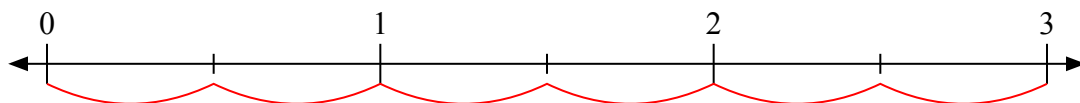
7)  $2 : \frac{2}{7}$



8)  $2 : \frac{4}{9}$



9)  $3 : \frac{1}{2}$



**Отв**

1. 10

2. 7

3. 15

4. 5

5. 4

6. 4 1/2

7. 7

8. 4 2/4

9. 6