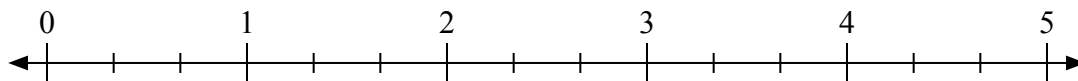




Используйте числовую прямую для решения задачи.


**Ответы**

1)  $2:\frac{2}{3}$



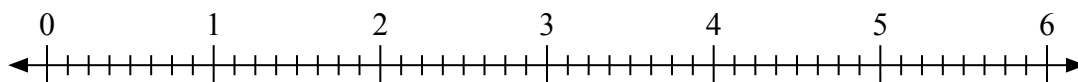
1. \_\_\_\_\_

2)  $2:\frac{1}{3}$



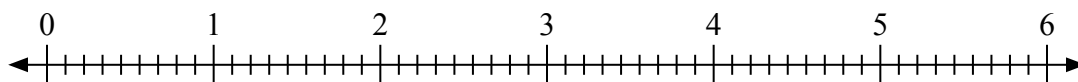
2. \_\_\_\_\_

3)  $4:\frac{3}{8}$



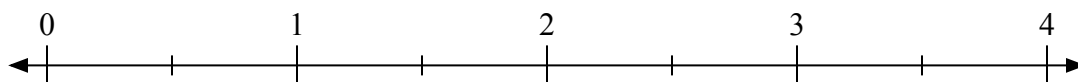
3. \_\_\_\_\_

4)  $6:\frac{8}{9}$



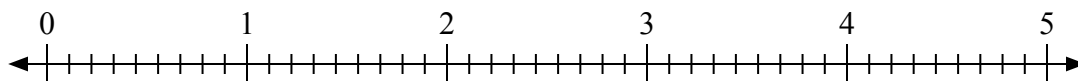
4. \_\_\_\_\_

5)  $2:\frac{1}{2}$



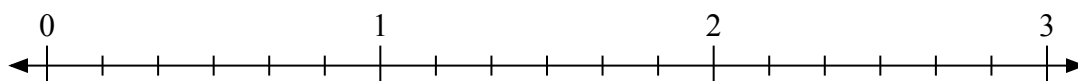
5. \_\_\_\_\_

6)  $3:\frac{8}{9}$



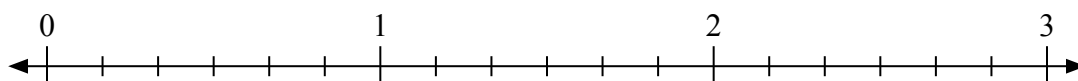
6. \_\_\_\_\_

7)  $2:\frac{3}{6}$



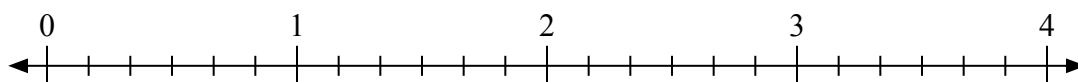
7. \_\_\_\_\_

8)  $2:\frac{4}{6}$



8. \_\_\_\_\_

9)  $3:\frac{5}{6}$

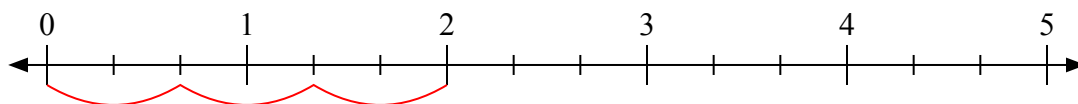


9. \_\_\_\_\_

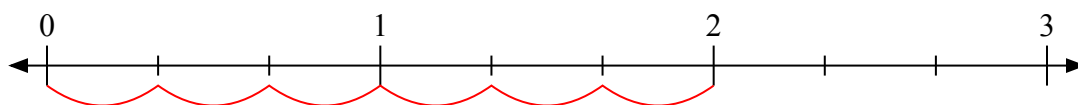


Используйте числовую прямую для решения задачи.

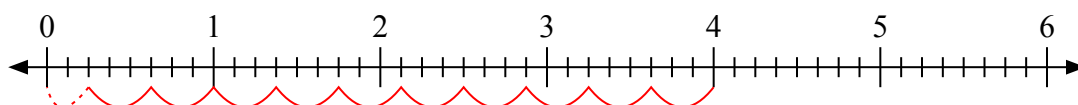
1)  $2 : \frac{2}{3}$



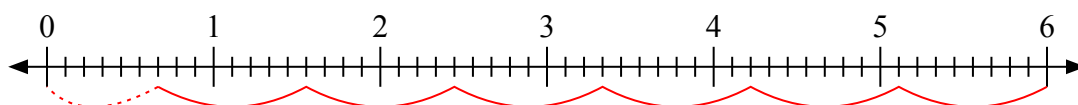
2)  $2 : \frac{1}{3}$



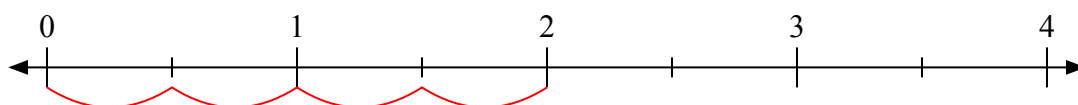
3)  $4 : \frac{3}{8}$



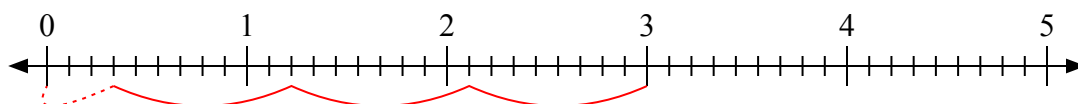
4)  $6 : \frac{8}{9}$



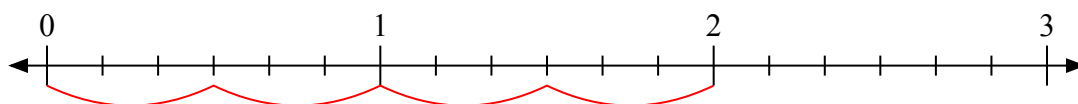
5)  $2 : \frac{1}{2}$



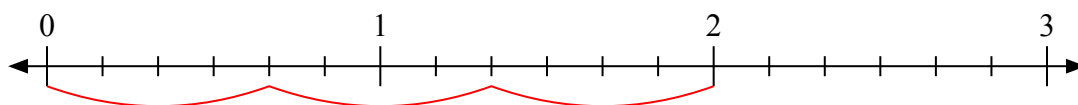
6)  $3 : \frac{8}{9}$



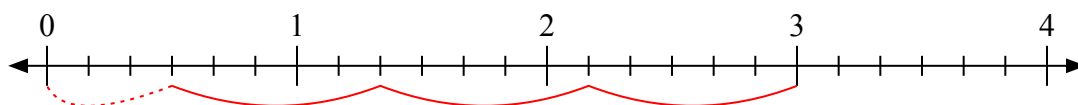
7)  $2 : \frac{3}{6}$



8)  $2 : \frac{4}{6}$



9)  $3 : \frac{5}{6}$



**Ответы**

1. 3

2. 6

3.  $10 \frac{2}{3}$

4.  $6 \frac{6}{8}$

5. 4

6.  $3 \frac{3}{8}$

7. 4

8. 3

9.  $3 \frac{3}{5}$