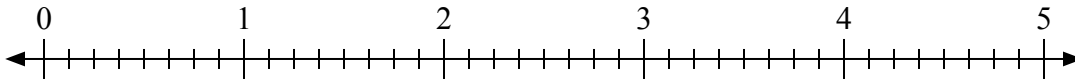




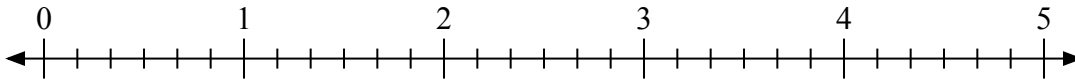
Используйте числовую прямую для решения задачи.

Ответы

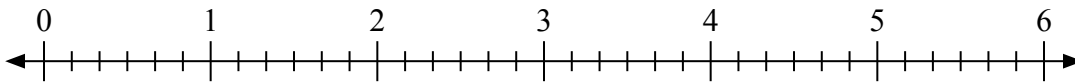
1) $5:\frac{2}{8}$




2) $4:\frac{3}{6}$



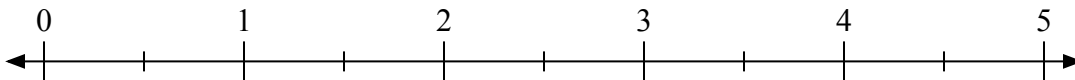
3) $2:\frac{3}{6}$



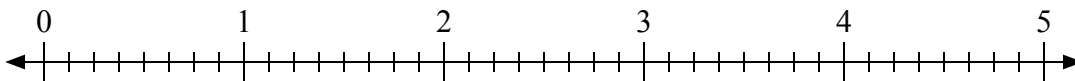
4) $3:\frac{2}{3}$



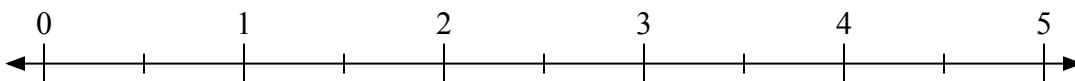
5) $2:\frac{1}{2}$



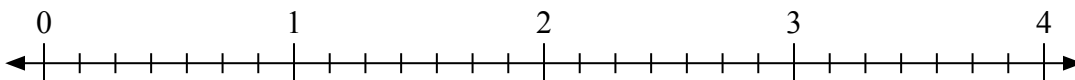
6) $4:\frac{3}{8}$



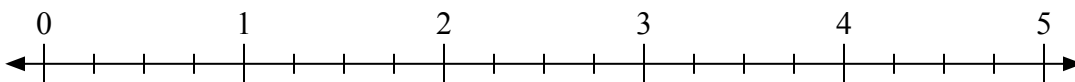
7) $4:\frac{1}{2}$



8) $4:\frac{5}{7}$



9) $3:\frac{3}{4}$



1. _____

2. _____

3. _____

4. _____

5. _____

6. _____

7. _____

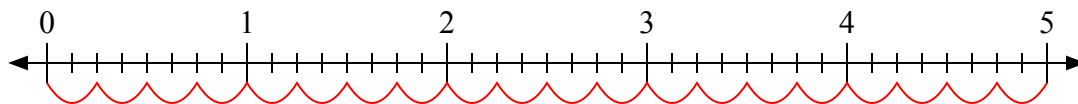
8. _____

9. _____

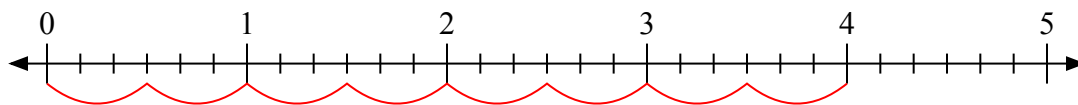


Используйте числовую прямую для решения задачи.

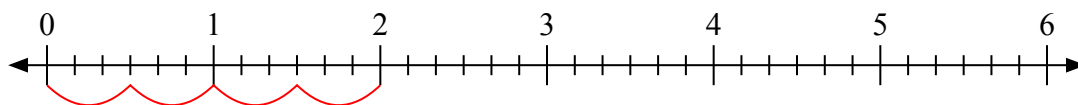
1) $5 : \frac{2}{8}$



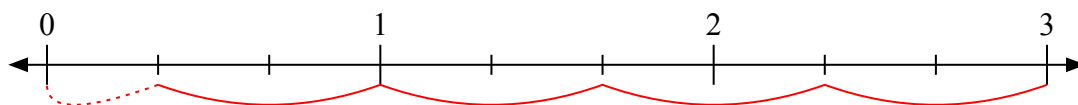
2) $4 : \frac{3}{6}$



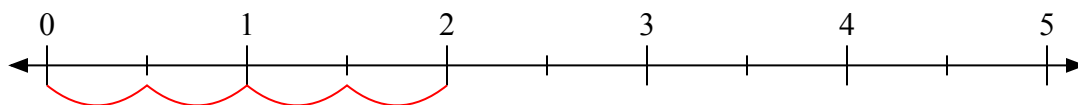
3) $2 : \frac{3}{6}$



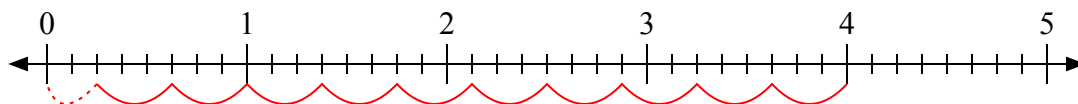
4) $3 : \frac{2}{3}$



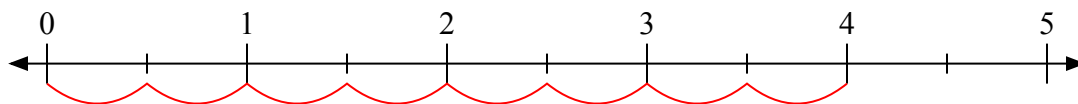
5) $2 : \frac{1}{2}$



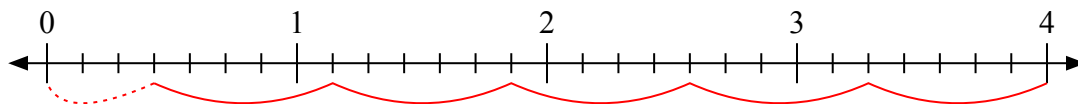
6) $4 : \frac{3}{8}$



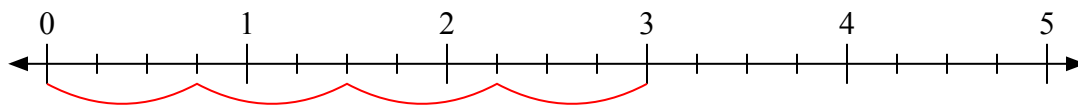
7) $4 : \frac{1}{2}$



8) $4 : \frac{5}{7}$



9) $3 : \frac{3}{4}$



Отвты

1. 20

2. 8

3. 4

4. 4 1/2

5. 4

6. 10 2/3

7. 8

8. 5 3/5

9. 4