




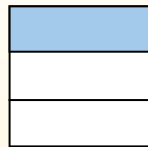
Используйте данное поле с примером, как разделить дробь и целое число.

$$\frac{1}{3} \div 4 = ?$$



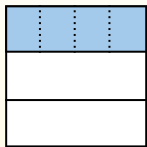
Para resolverlo, comience con un todo.

Divida el conjunto en 3 piezas y complete 1 sección.



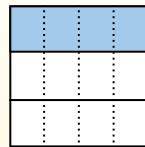
Ahora puedes ver el tamaño de  $\frac{1}{3}$

Em seguida, divida a  $\frac{1}{3}$  em 4 grupos.



Esto muestra el tamaño de cada pieza.

Para calcular el tamaño de cada pieza en comparación con el conjunto, divida el conjunto en 4 grupos.



Each piece is  $\frac{1}{12}$  of the whole.


Or:

$$\frac{1}{3} \div 4 = \frac{1}{12}$$


**ОТВЕТЫ**

1. \_\_\_\_\_
2. \_\_\_\_\_
3. \_\_\_\_\_
4. \_\_\_\_\_
5. \_\_\_\_\_
6. \_\_\_\_\_
7. \_\_\_\_\_
8. \_\_\_\_\_
9. \_\_\_\_\_
10. \_\_\_\_\_
11. \_\_\_\_\_
12. \_\_\_\_\_


1)  $\frac{1}{5} : 2 =$




2)  $\frac{1}{7} : 3 =$




3)  $\frac{1}{6} : 7 =$




4)  $\frac{1}{3} : 4 =$



5)  $\frac{1}{2} : 6 =$




6)  $\frac{1}{5} : 4 =$




7)  $\frac{1}{9} : 8 =$




8)  $\frac{1}{9} : 7 =$



9)  $\frac{1}{2} : 9 =$




10)  $\frac{1}{2} : 3 =$



11)  $\frac{1}{8} : 3 =$




12)  $\frac{1}{9} : 3 =$





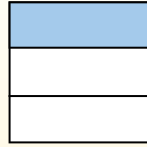
Используйте данное поле с примером, как разделить дробь и целое число.

$$\frac{1}{3} \div 4 = ?$$



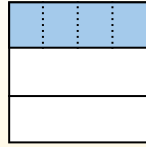
Para resolverlo, comience con un todo.

Divida el conjunto en 3 piezas y complete 1 sección.



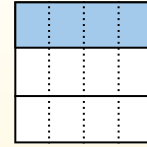
Ahora puedes ver el tamaño de  $\frac{1}{3}$

Em seguida, divida a  $\frac{1}{3}$  em 4 grupos.



Esto muestra el tamaño de cada pieza.

Para calcular el tamaño de cada pieza en comparación con el conjunto, divida el conjunto en 4 grupos.



Each piece is  $\frac{1}{12}$  of the whole.

Or:

$$\frac{1}{3} \div 4 = \frac{1}{12}$$

**ОТВЕТЫ**

1.  $\frac{1}{10}$

2.  $\frac{1}{21}$

3.  $\frac{1}{42}$

4.  $\frac{1}{12}$

5.  $\frac{1}{12}$

6.  $\frac{1}{20}$

7.  $\frac{1}{72}$

8.  $\frac{1}{63}$

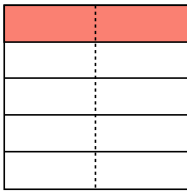
9.  $\frac{1}{18}$

10.  $\frac{1}{6}$

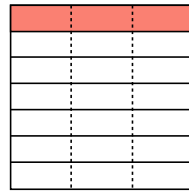
11.  $\frac{1}{24}$

12.  $\frac{1}{27}$

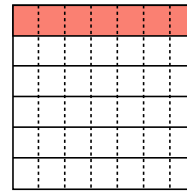
1)  $\frac{1}{5} : 2 =$



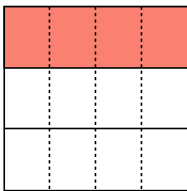
2)  $\frac{1}{7} : 3 =$



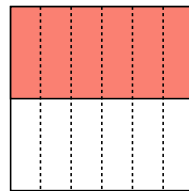
3)  $\frac{1}{6} : 7 =$



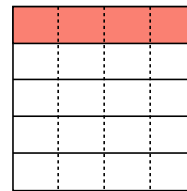
4)  $\frac{1}{3} : 4 =$



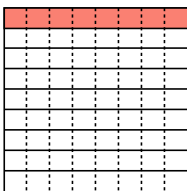
5)  $\frac{1}{2} : 6 =$



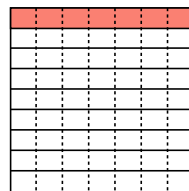
6)  $\frac{1}{5} : 4 =$



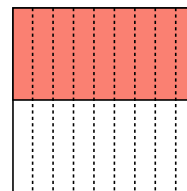
7)  $\frac{1}{9} : 8 =$



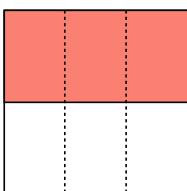
8)  $\frac{1}{9} : 7 =$



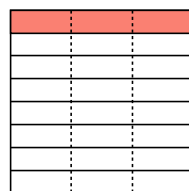
9)  $\frac{1}{2} : 9 =$



10)  $\frac{1}{2} : 3 =$



11)  $\frac{1}{8} : 3 =$



12)  $\frac{1}{9} : 3 =$

