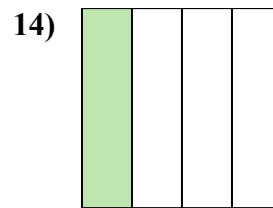
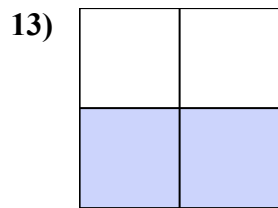
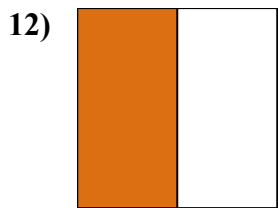
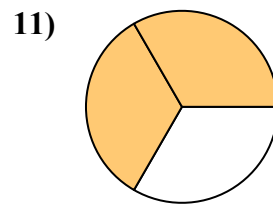
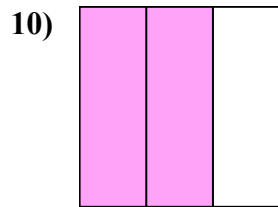
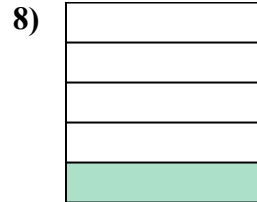
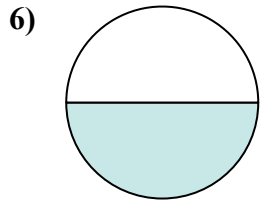
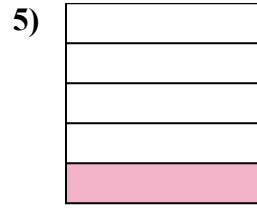
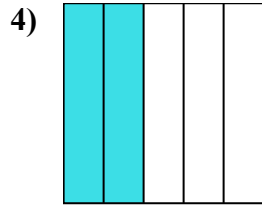
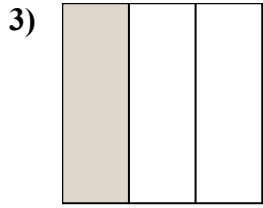
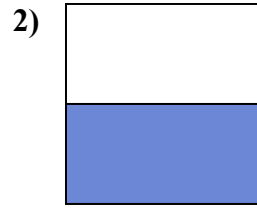
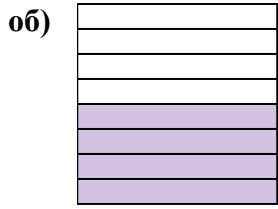




Запишите заштрихованную сумму дробью.



Ответы

об. $\frac{4}{8}$

1. _____

2. _____

3. _____

4. _____

5. _____

6. _____

7. _____

8. _____

9. _____

10. _____

11. _____

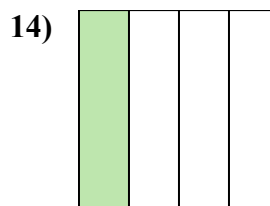
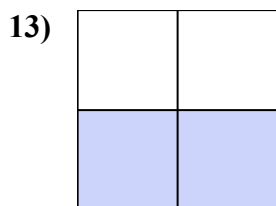
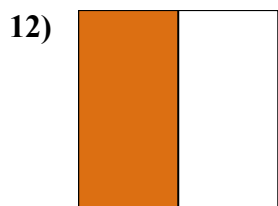
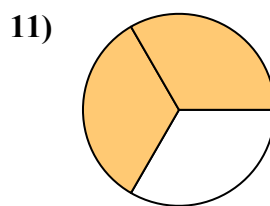
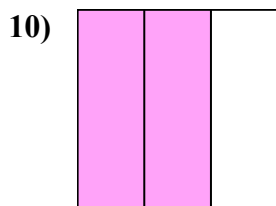
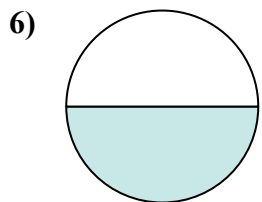
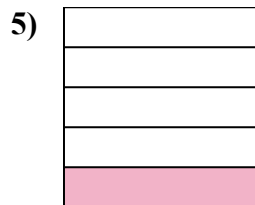
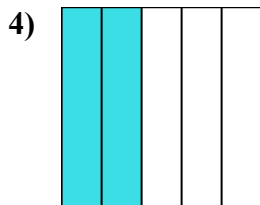
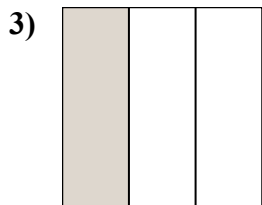
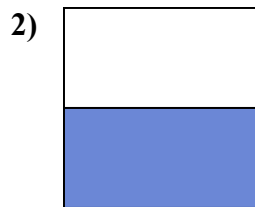


12. _____

13. _____

14. _____



Запишите заштрихованную сумму дробью.



Отвeты

об. 4/8

1. 2/8

2. 1/2

3. 1/3

4. 2/5

5. 1/5

6. 1/2

7. 1/8

8. 1/5

9. 4/4

10. 2/3

11. 2/3

12. 1/2

13. 2/4

14. 1/4