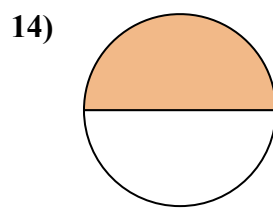
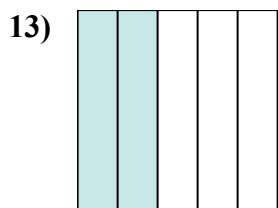
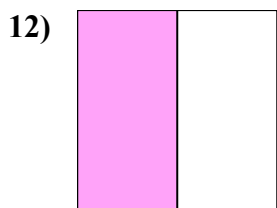

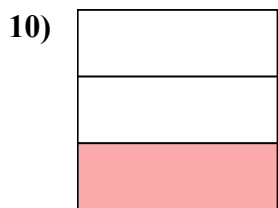
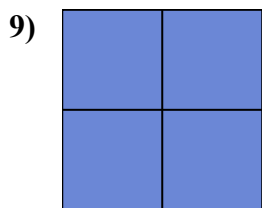
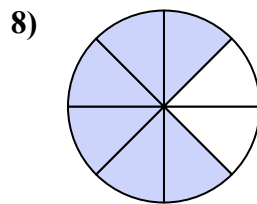
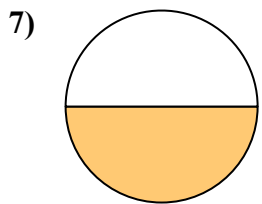
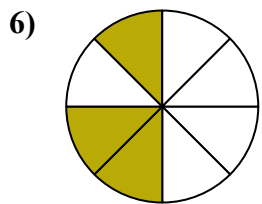
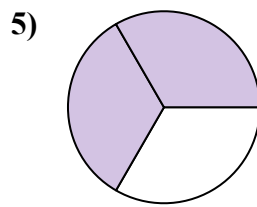
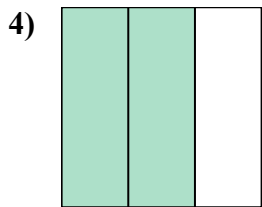
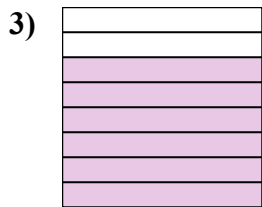
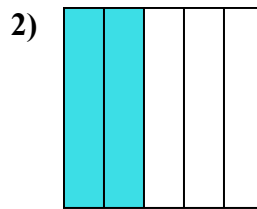
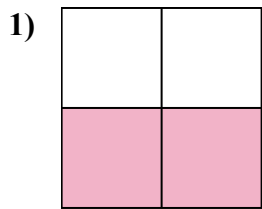
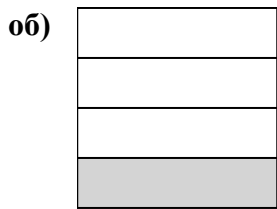




Запишите заштрихованную сумму дробью.



Ответы

об. $\frac{1}{4}$

1. _____

2. _____

3. _____

4. _____

5. _____

6. _____

7. _____

8. _____

9. _____

10. _____

11. _____

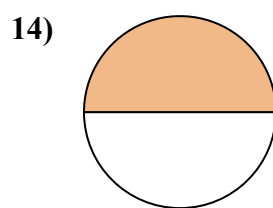
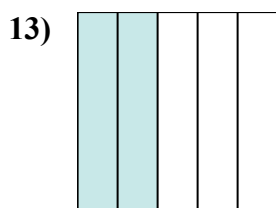
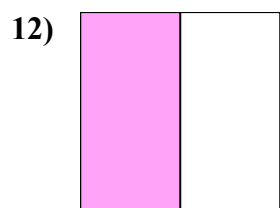

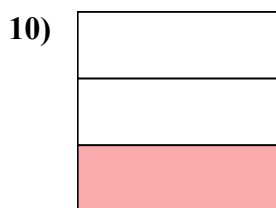
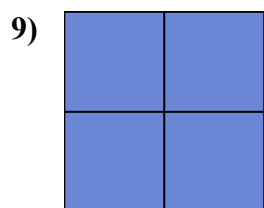
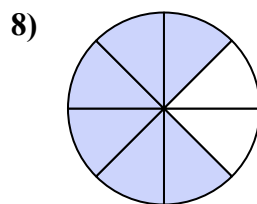
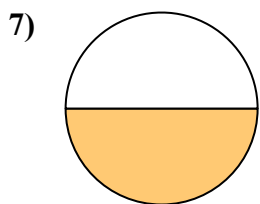
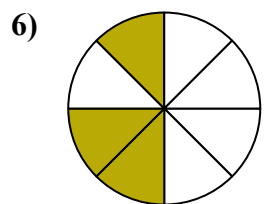
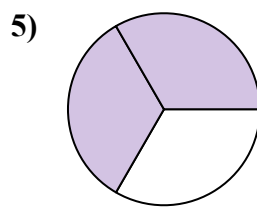
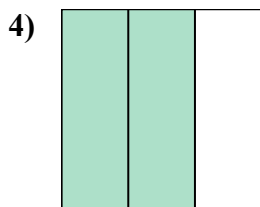
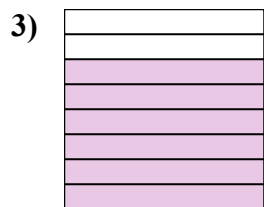
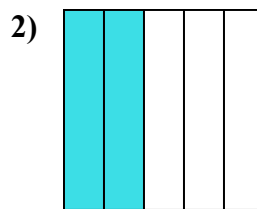
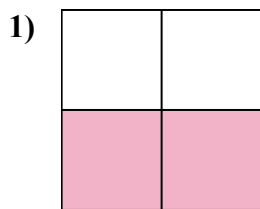
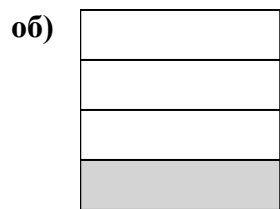
12. _____

13. _____

14. _____



Запишите заштрихованную сумму дробью.



Ответы

об. $\frac{1}{4}$

1. $\frac{2}{4}$

2. $\frac{2}{5}$

3. $\frac{6}{8}$

4. $\frac{2}{3}$

5. $\frac{2}{3}$

6. $\frac{3}{8}$

7. $\frac{1}{2}$

8. $\frac{6}{8}$

9. $\frac{4}{4}$

10. $\frac{1}{3}$

11. $\frac{5}{5}$

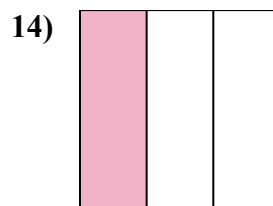
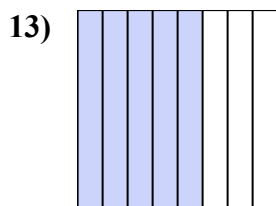
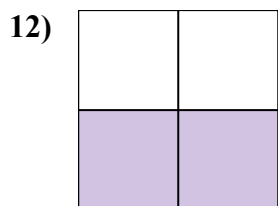
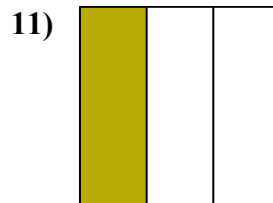
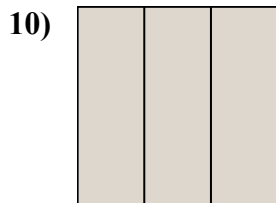
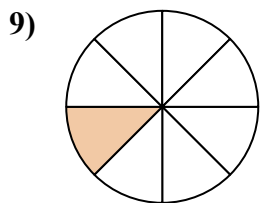
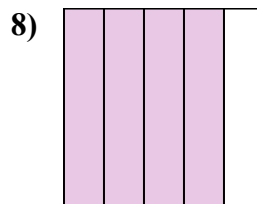
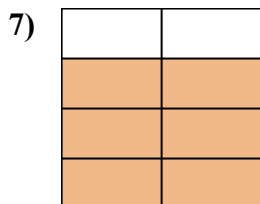
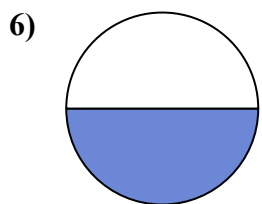
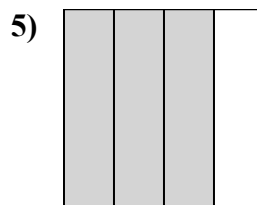

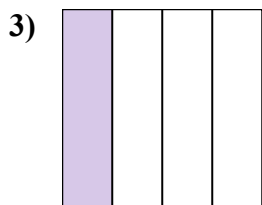
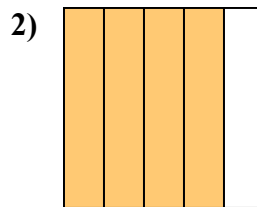
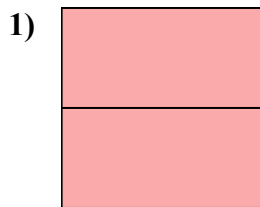
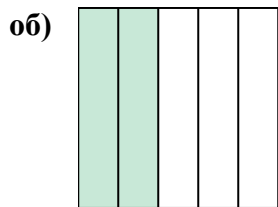
12. $\frac{1}{2}$

13. $\frac{2}{5}$

14. $\frac{1}{2}$



Запишите заштрихованную сумму дробью.



Ответы

об. 2/5

1. _____

2. _____

3. _____

4. _____

5. _____

6. _____

7. _____

8. _____

9. _____

10. _____

11. _____

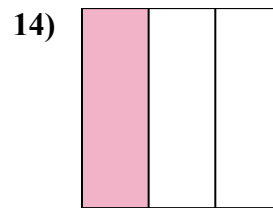
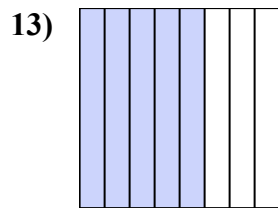
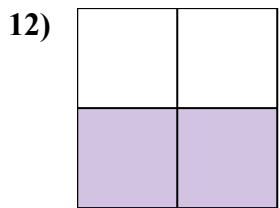
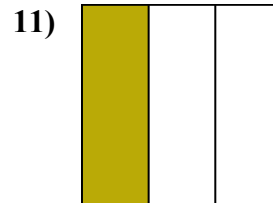
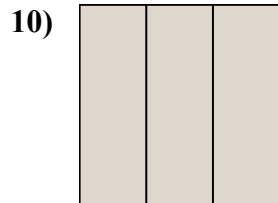
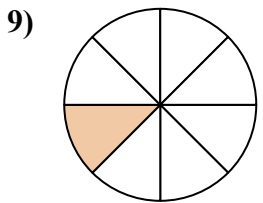
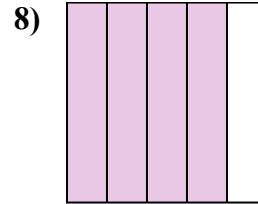
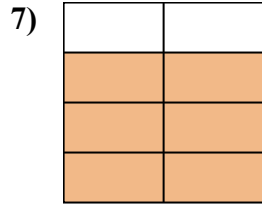
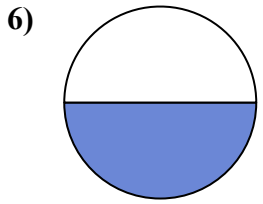
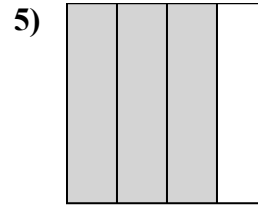
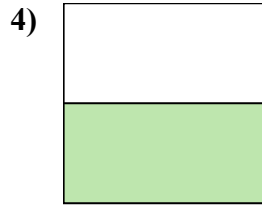
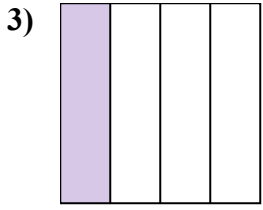
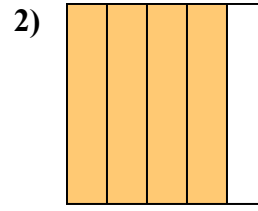
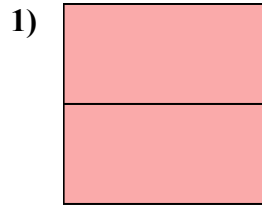
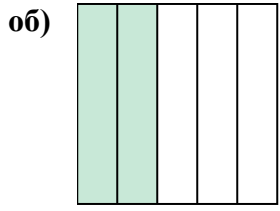
12. _____

13. _____

14. _____



Запишите заштрихованную сумму дробью.



Отвeты

об. 2/5

1. 2/2

2. 4/5

3. 1/4

4. 1/2

5. 3/4

6. 1/2

7. 6/8

8. 4/5

9. 1/8

10. 3/3

11. 1/3

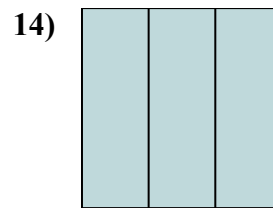
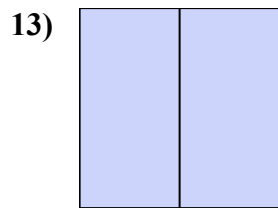
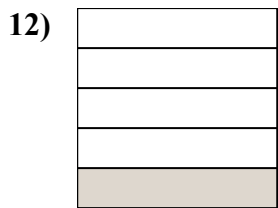
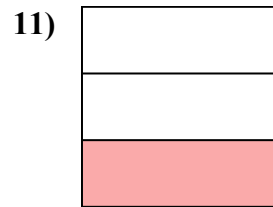
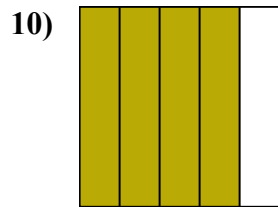

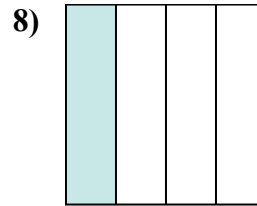
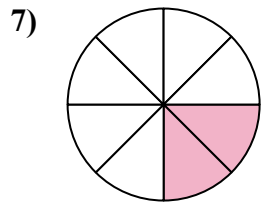
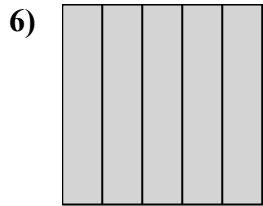
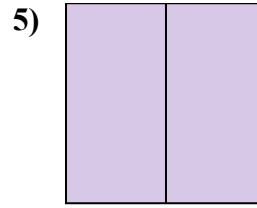
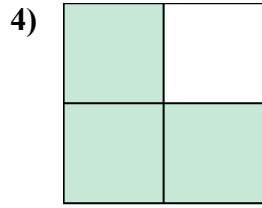
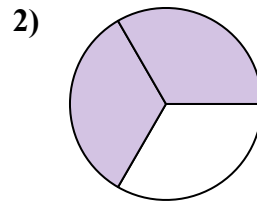
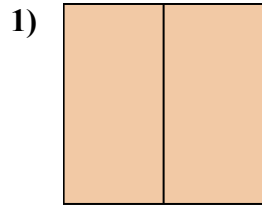
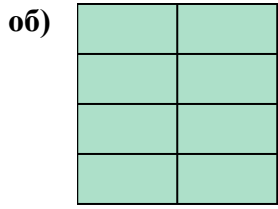
12. 2/4

13. 5/8

14. 1/3



Запишите заштрихованную сумму дробью.



Ответы

об. $\frac{8}{8}$

1. _____

2. _____

3. _____

4. _____

5. _____

6. _____

7. _____

8. _____

9. _____

10. _____

11. _____

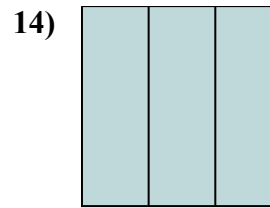
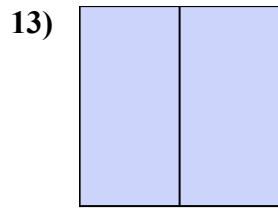
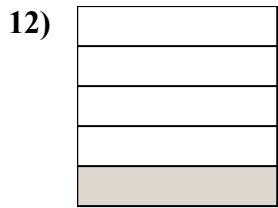
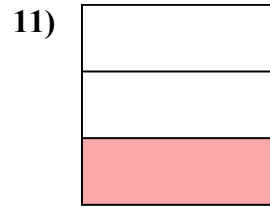
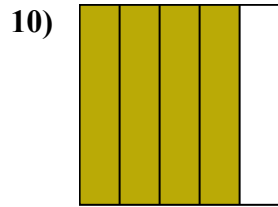
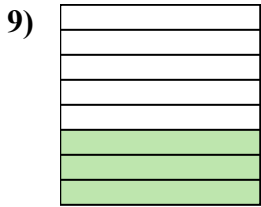
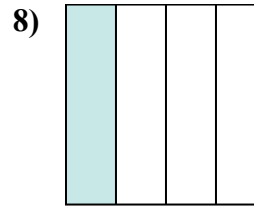
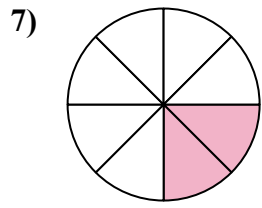
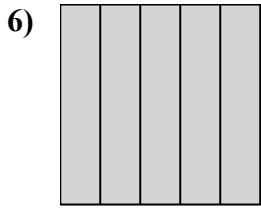
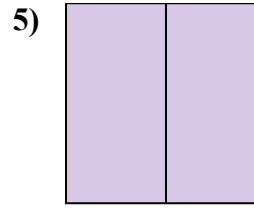
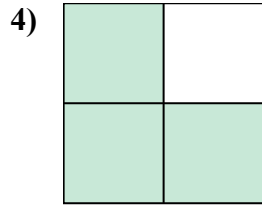
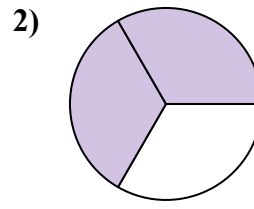
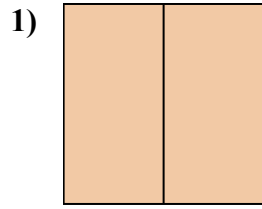
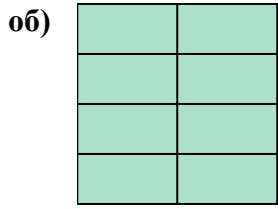
12. _____

13. _____

14. _____



Запишите заштрихованную сумму дробью.



Отвeты

об. $\frac{8}{8}$

1. $\frac{2}{2}$

2. $\frac{2}{3}$

3. $\frac{1}{4}$

4. $\frac{3}{4}$

5. $\frac{2}{2}$

6. $\frac{5}{5}$

7. $\frac{2}{8}$

8. $\frac{1}{4}$

9. $\frac{3}{8}$

10. $\frac{4}{5}$

11. $\frac{1}{3}$

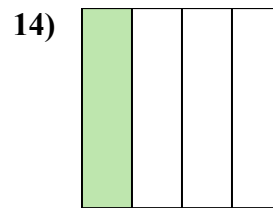
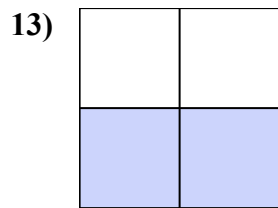
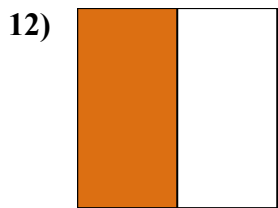
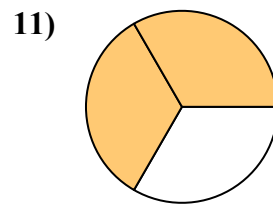
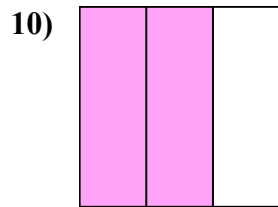
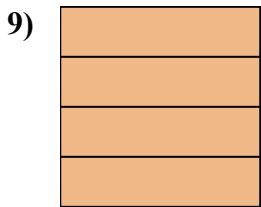
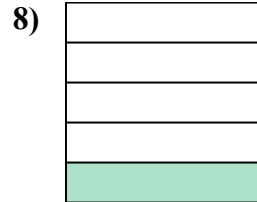
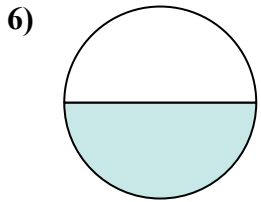
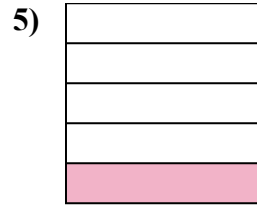
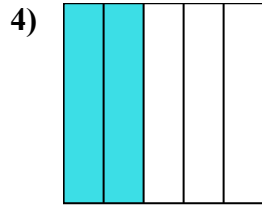
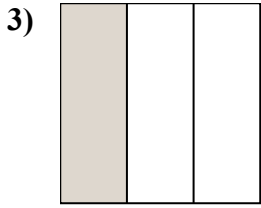
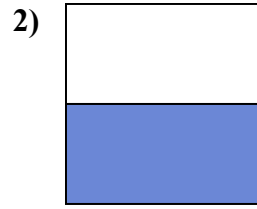
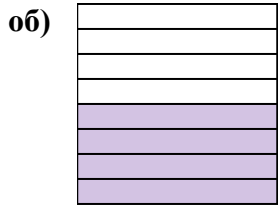
12. $\frac{1}{5}$

13. $\frac{2}{2}$

14. $\frac{3}{3}$



Запишите заштрихованную сумму дробью.



Ответы

об. $\frac{4}{8}$

1. _____

2. _____

3. _____

4. _____

5. _____

6. _____

7. _____

8. _____

9. _____

10. _____

11. _____

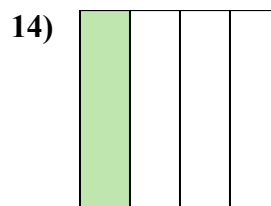
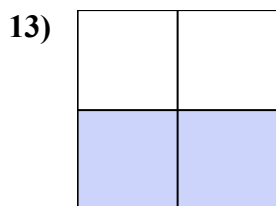
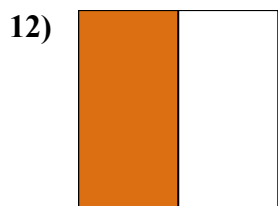
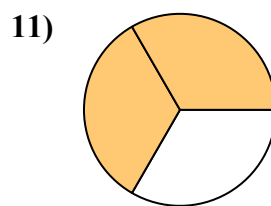
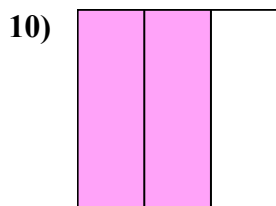

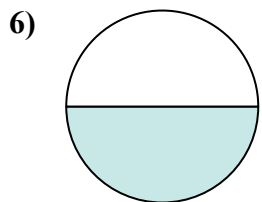
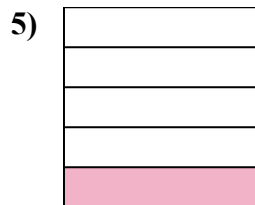
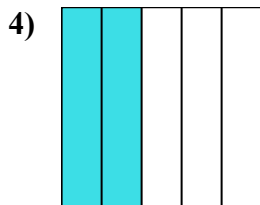
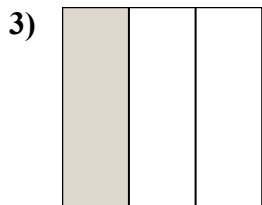
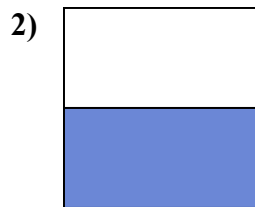


12. _____

13. _____

14. _____



Запишите заштрихованную сумму дробью.



Ответы

об. 4/8

1. 2/8

2. 1/2

3. 1/3

4. 2/5

5. 1/5

6. 1/2

7. 1/8

8. 1/5

9. 4/4

10. 2/3

11. 2/3

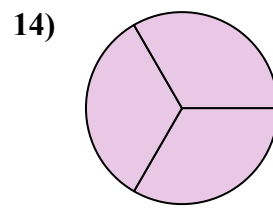
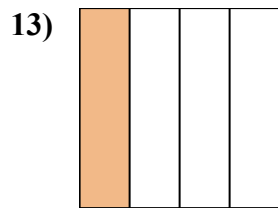
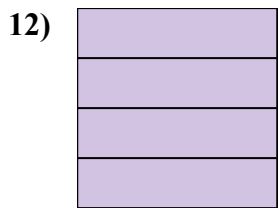
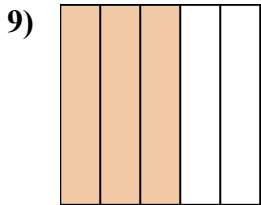
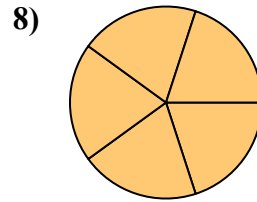
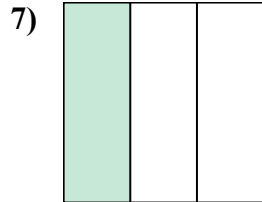
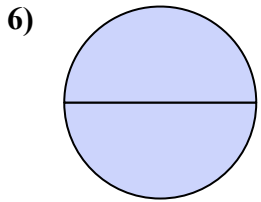
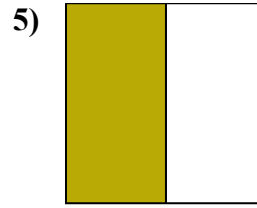
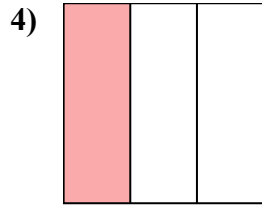
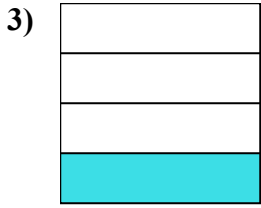
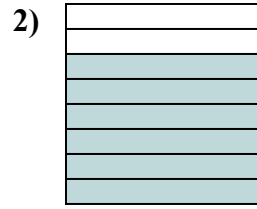
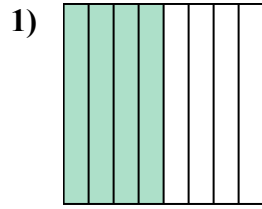
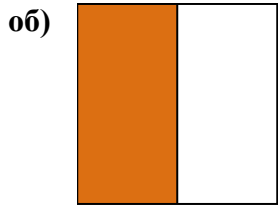
12. 1/2

13. 2/4

14. 1/4



Запишите заштрихованную сумму дробью.



Ответы

об. $\frac{1}{2}$

1.

2.

3.

4.

5.

6.

7.

8.

9.

10.

11.

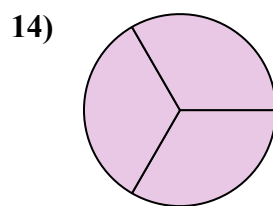
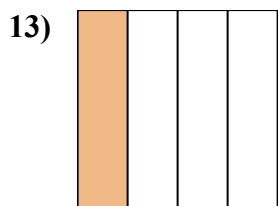
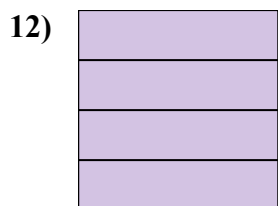
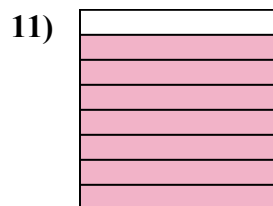
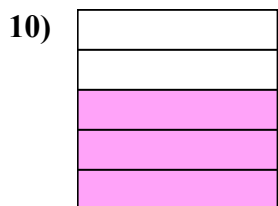
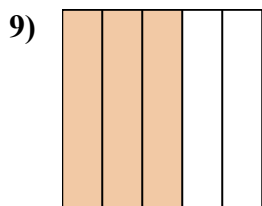
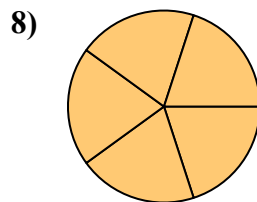
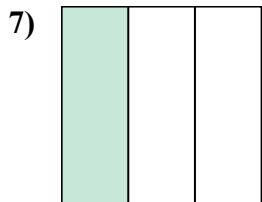
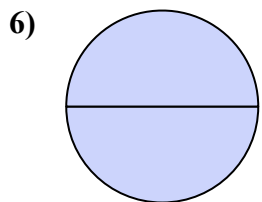
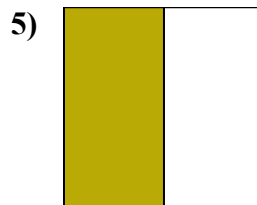
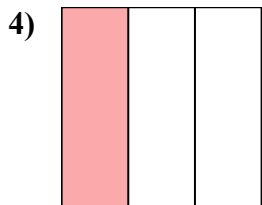


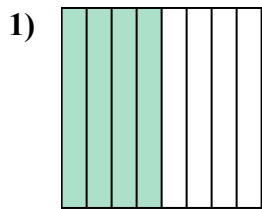
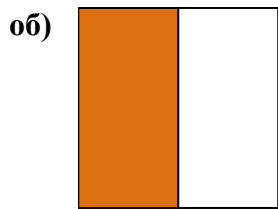
12.

13.

14.



Запишите заштрихованную сумму дробью.



Ответы

об. $\frac{1}{2}$

1. $\frac{4}{8}$

2. $\frac{6}{8}$

3. $\frac{1}{4}$

4. $\frac{1}{3}$

5. $\frac{1}{2}$

6. $\frac{2}{2}$

7. $\frac{1}{3}$

8. $\frac{5}{5}$

9. $\frac{3}{5}$

10. $\frac{3}{5}$

11. $\frac{7}{8}$

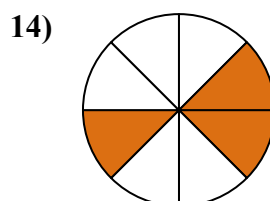
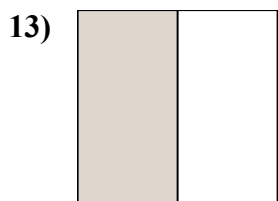
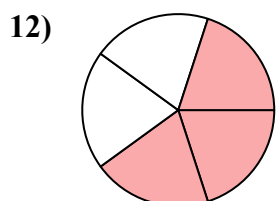
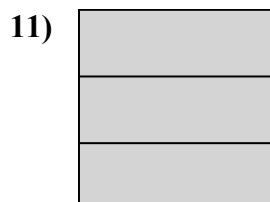
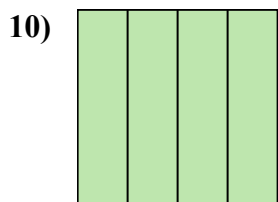
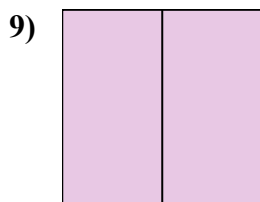
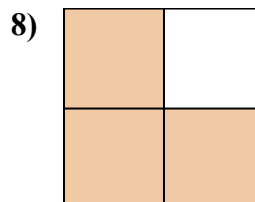

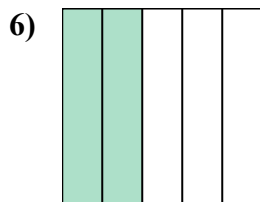

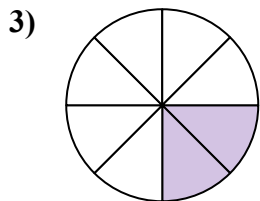
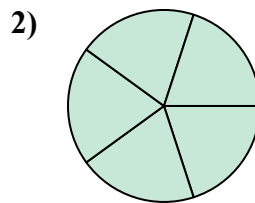
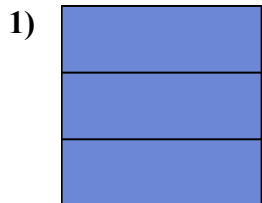
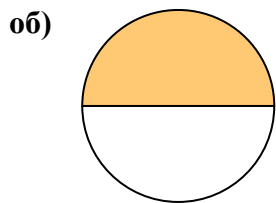
12. $\frac{4}{4}$

13. $\frac{1}{4}$

14. $\frac{3}{3}$



Запишите заштрихованную сумму дробью.



Ответы

об. 1/2

1. _____

2. _____

3. _____

4. _____

5. _____

6. _____

7. _____

8. _____

9. _____

10. _____

11. _____

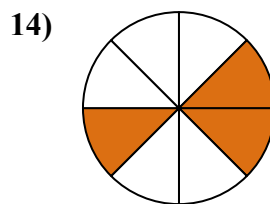
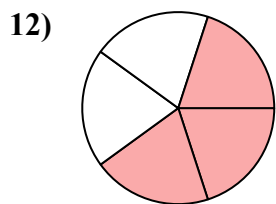
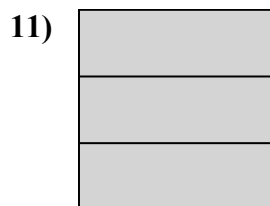
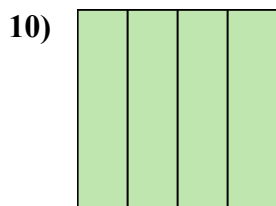
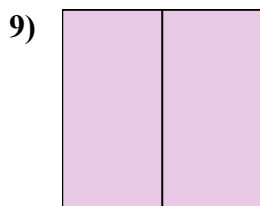
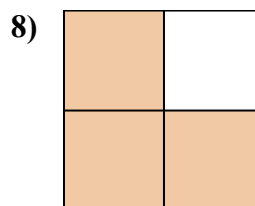
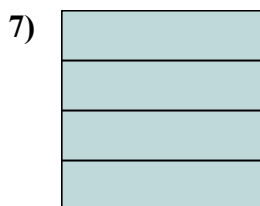
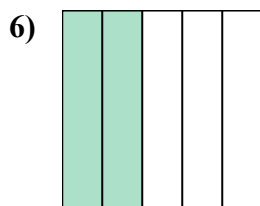

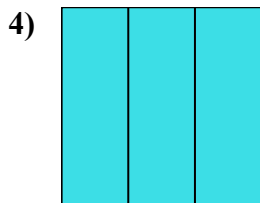
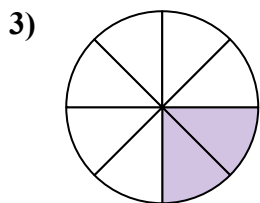
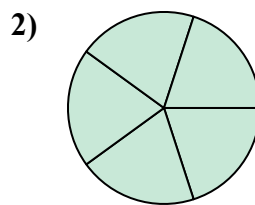
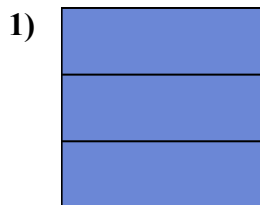
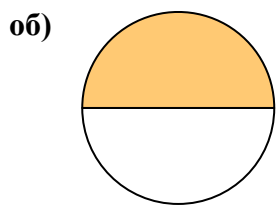
12. _____

13. _____

14. _____



Запишите заштрихованную сумму дробью.



Отвeты

об. 1/2

1. 3/3

2. 5/5

3. 2/8

4. 3/3

5. 1/8

6. 2/5

7. 4/4

8. 3/4

9. 2/2

10. 4/4

11. 3/3

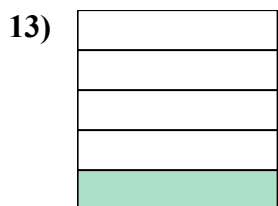
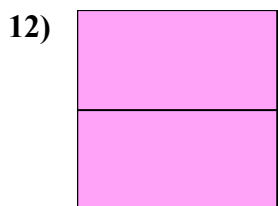
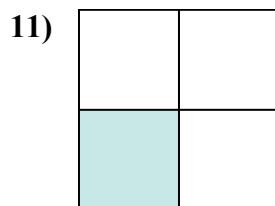
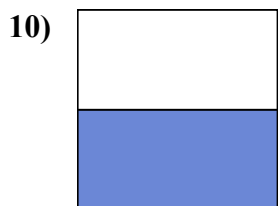
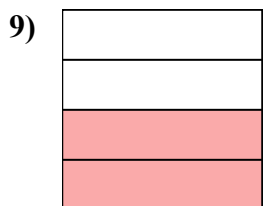
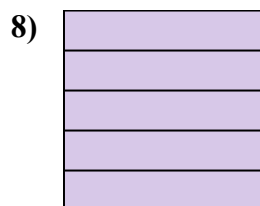
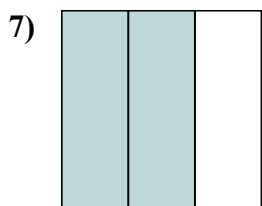
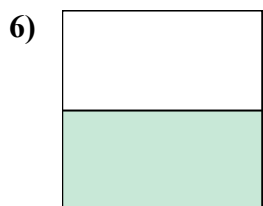
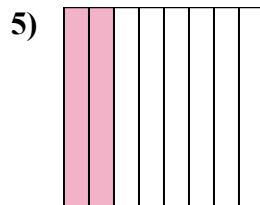
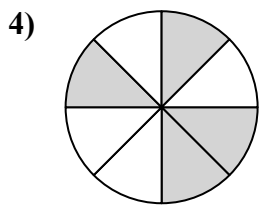
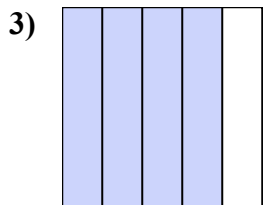
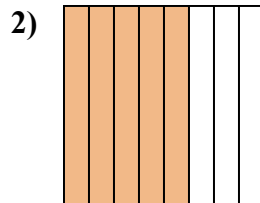
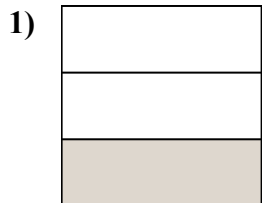
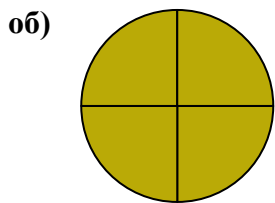
12. 3/5

13. 1/2

14. 3/8



Запишите заштрихованную сумму дробью.

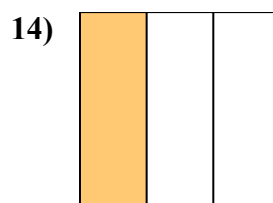
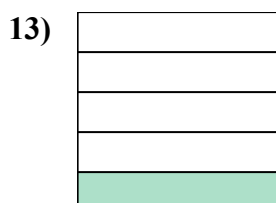
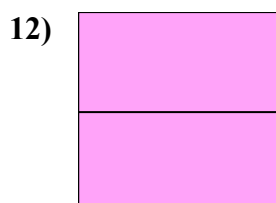
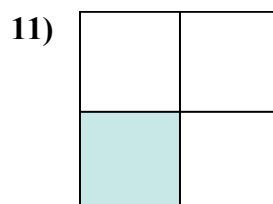
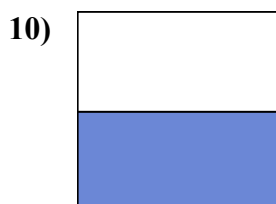
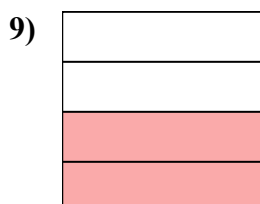
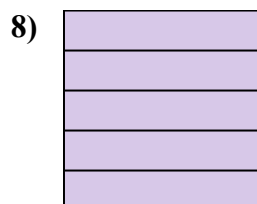
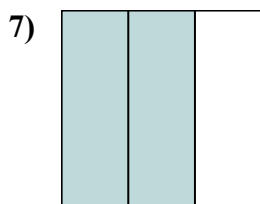
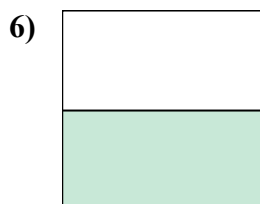
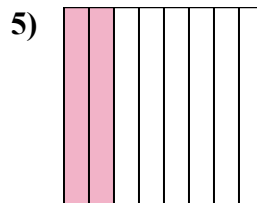
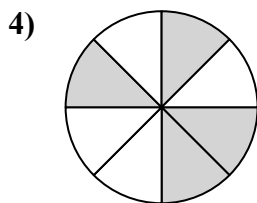
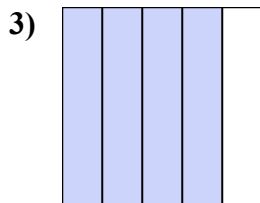
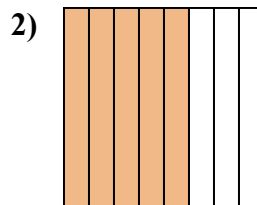
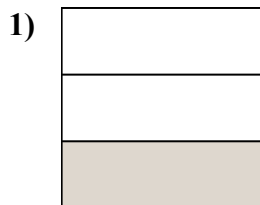
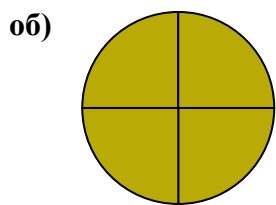


Ответы

- об. $\frac{4}{4}$
1. _____
2. _____
3. _____
4. _____
5. _____
6. _____
7. _____
8. _____
9. _____
10. _____
11. _____
12. _____
13. _____
14. _____



Запишите заштрихованную сумму дробью.



Отвeты

об. 4/4

1. 1/3

2. 5/8

3. 4/5

4. 4/8

5. 2/8

6. 1/2

7. 2/3

8. 5/5

9. 2/4

10. 1/2

11. 1/4

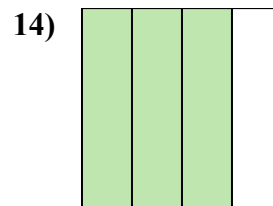
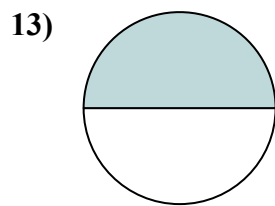
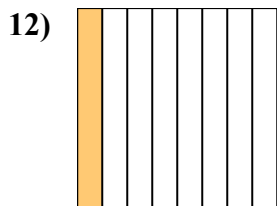
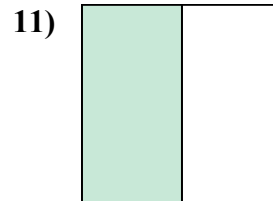
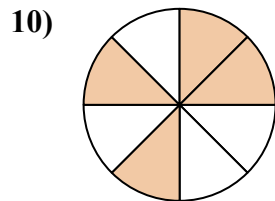
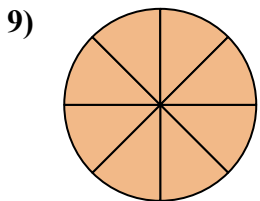
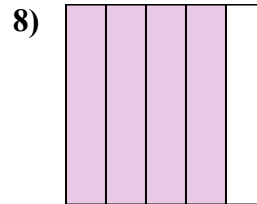
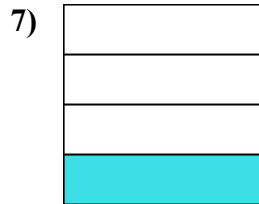
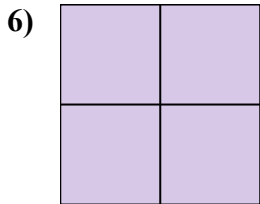
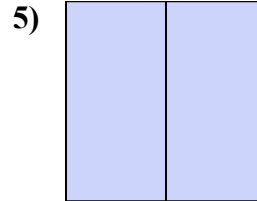
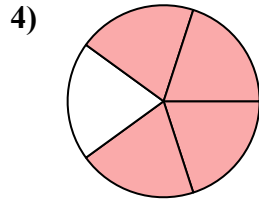
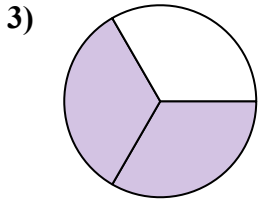
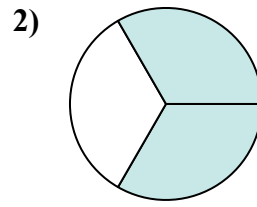
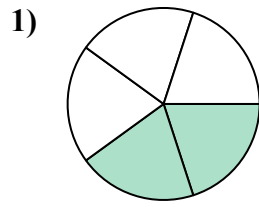
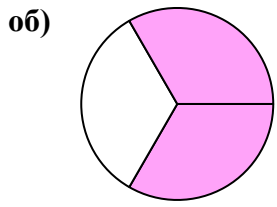
12. 2/2

13. 1/5

14. 1/3



Запишите заштрихованную сумму дробью.



Ответы

об. $\frac{2}{3}$

1.

2.

3.

4.

5.

6.

7.

8.

9.

10.

11.

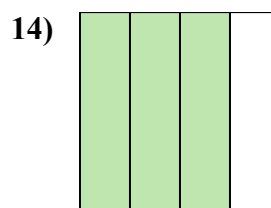
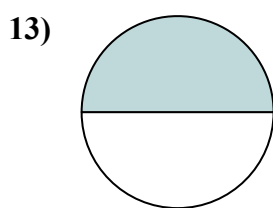
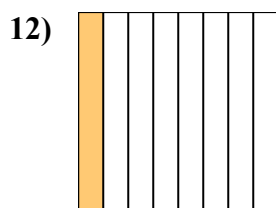
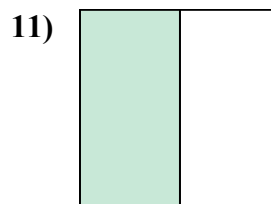
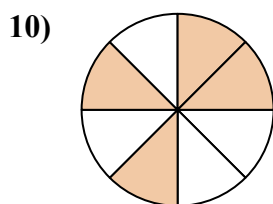
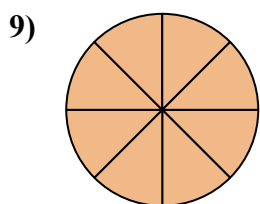
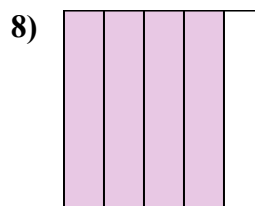

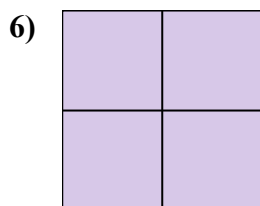
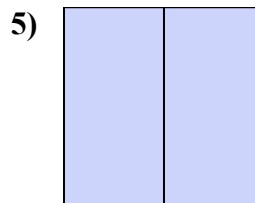
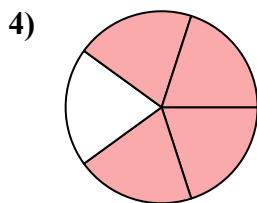
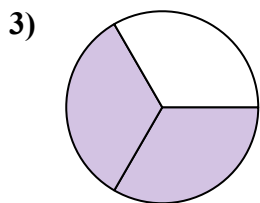
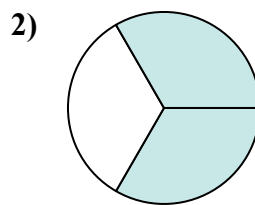
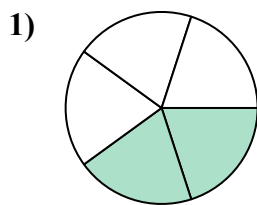
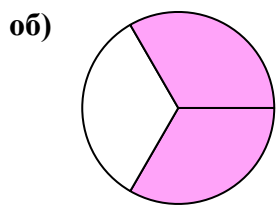
12.

13.

14.



Запишите заштрихованную сумму дробью.



Ответы

об. 2/3

1. 2/5

2. 2/3

3. 2/3

4. 4/5

5. 2/2

6. 4/4

7. 1/4

8. 4/5

9. 8/8

10. 4/8

11. 1/2

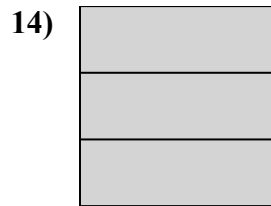

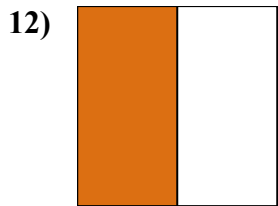
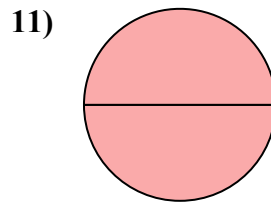
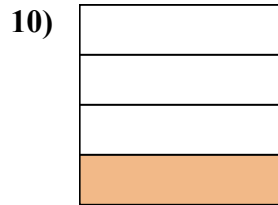

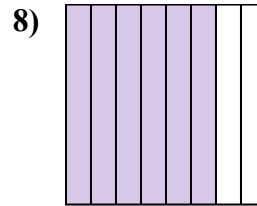
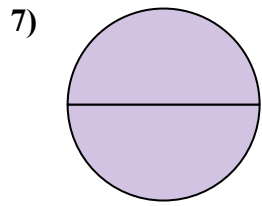
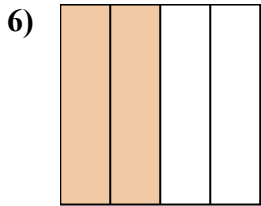
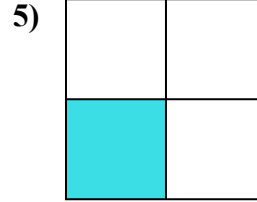
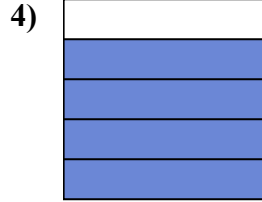
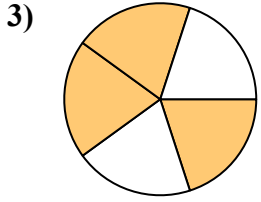
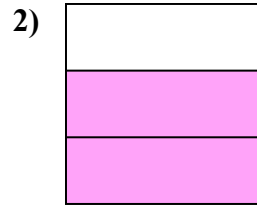
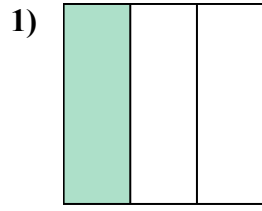
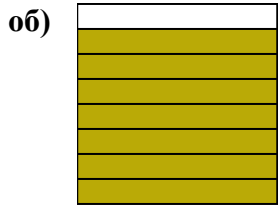
12. 1/8

13. 1/2

14. 3/4



Запишите заштрихованную сумму дробью.

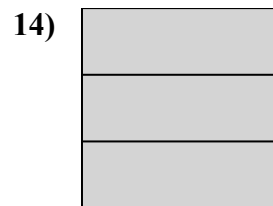

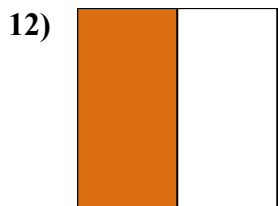
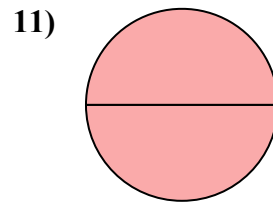
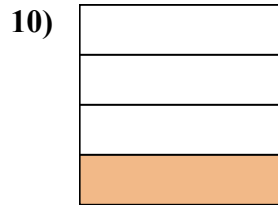
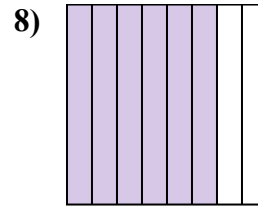
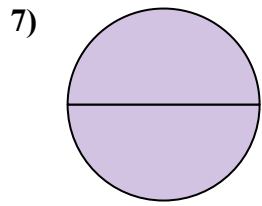
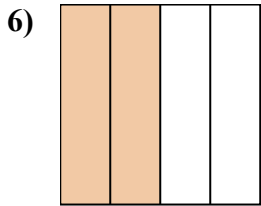
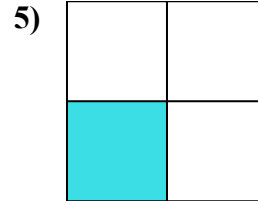
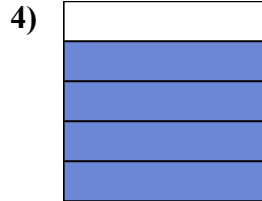
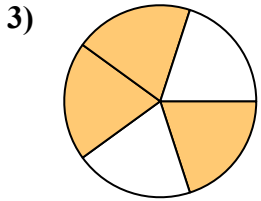
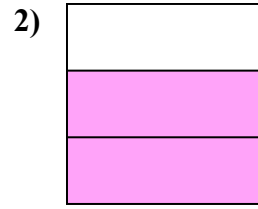
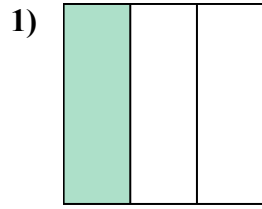
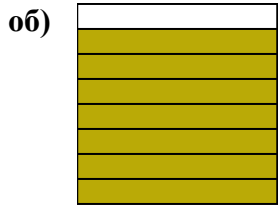


Ответы

- об. $\frac{7}{8}$ _____
1. _____
2. _____
3. _____
4. _____
5. _____
6. _____
7. _____
8. _____
9. _____
10. _____
11. _____
12. _____
13. _____
14. _____



Запишите заштрихованную сумму дробью.



Отвѣты

об. 7/8

1. 1/3

2. 2/3

3. 3/5

4. 4/5

5. 1/4

6. 2/4

7. 2/2

8. 6/8

9. 4/5

10. 1/4

11. 2/2

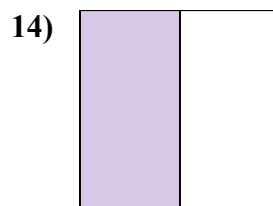
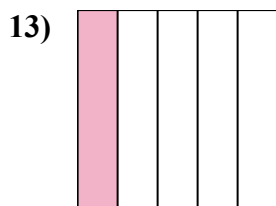
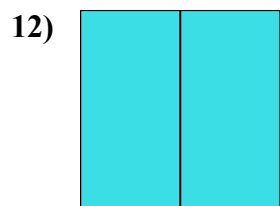
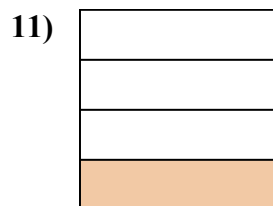
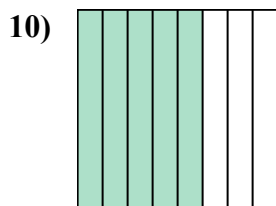
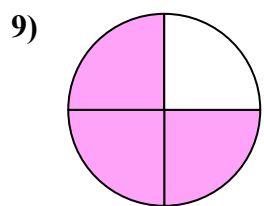
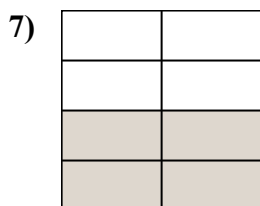
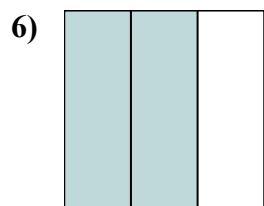

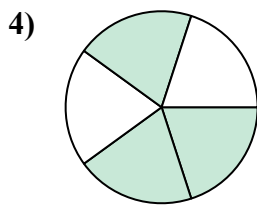
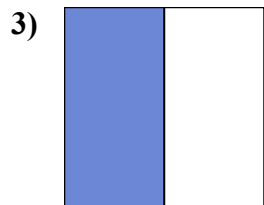
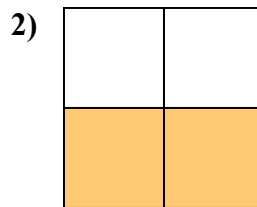
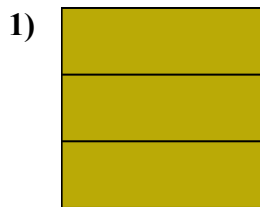
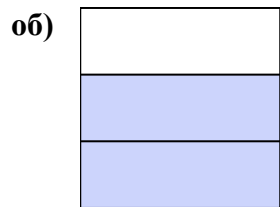
12. 1/2

13. 5/8

14. 3/3



Запишите заштрихованную сумму дробью.



Ответы

об. $\frac{2}{3}$

1. _____

2. _____

3. _____

4. _____

5. _____

6. _____

7. _____

8. _____

9. _____

10. _____

11. _____

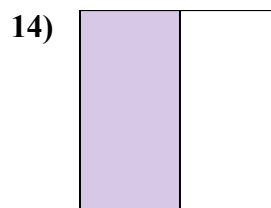
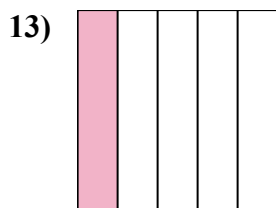
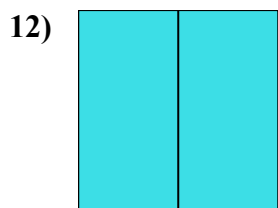
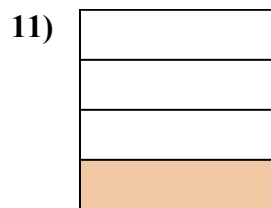
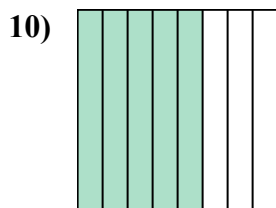
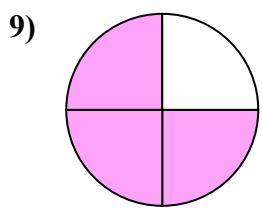
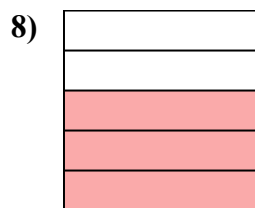
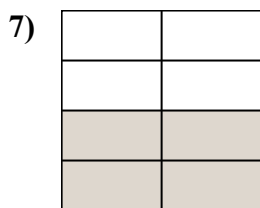
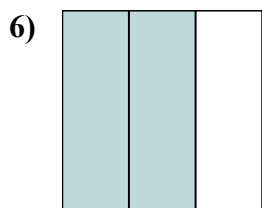

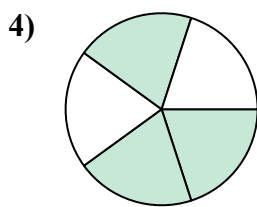
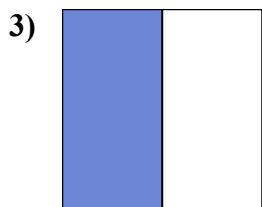
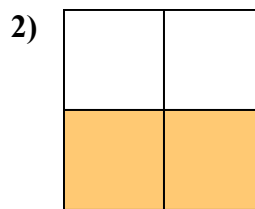
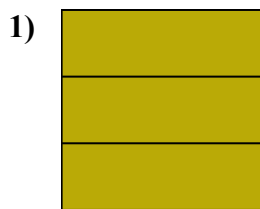
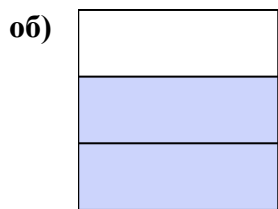
12. _____

13. _____

14. _____



Запишите заштрихованную сумму дробей.



Отвeты

об. 2/3

1. 3/3

2. 2/4

3. 1/2

4. 3/5

5. 3/8

6. 2/3

7. 4/8

8. 3/5

9. 3/4

10. 5/8

11. 1/4

12. 2/2

13. 1/5

14. 1/2