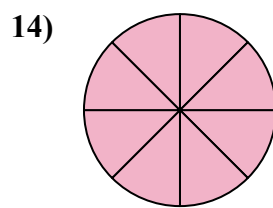
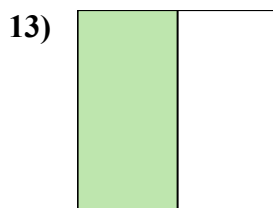
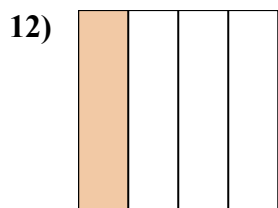
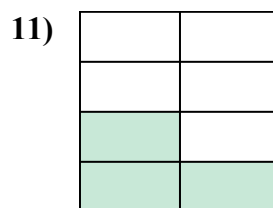
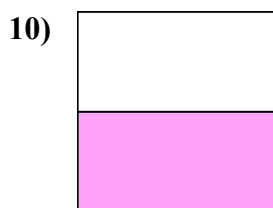
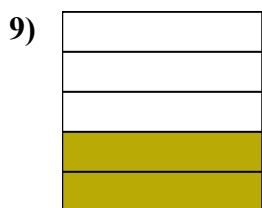
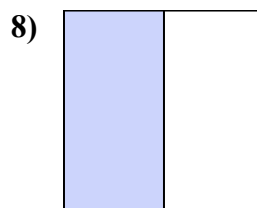
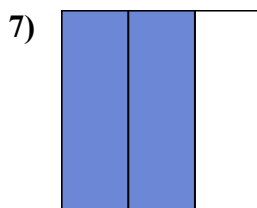
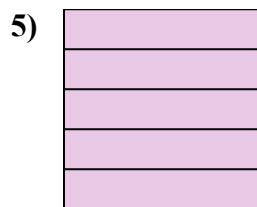
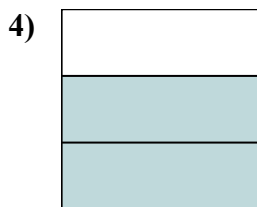
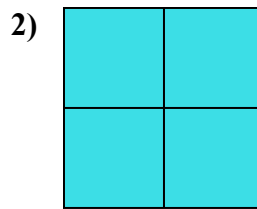
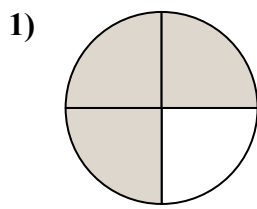
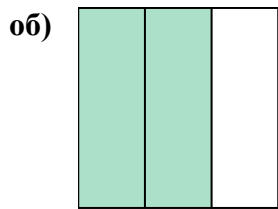




Запишите заштрихованную сумму дробью.



**Ответы**

об.  $\frac{2}{3}$

1. \_\_\_\_\_

2. \_\_\_\_\_

3. \_\_\_\_\_

4. \_\_\_\_\_

5. \_\_\_\_\_

6. \_\_\_\_\_

7. \_\_\_\_\_

8. \_\_\_\_\_

9. \_\_\_\_\_

10. \_\_\_\_\_

11. \_\_\_\_\_

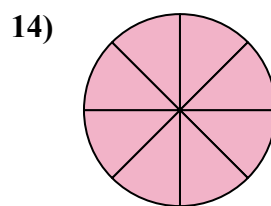
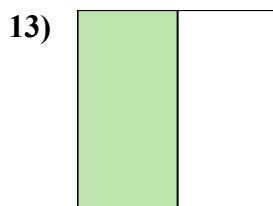
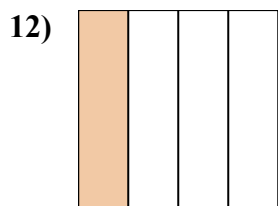
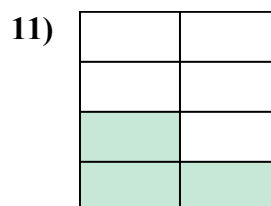
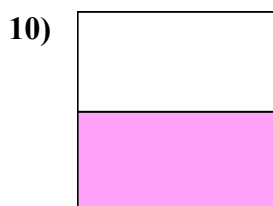

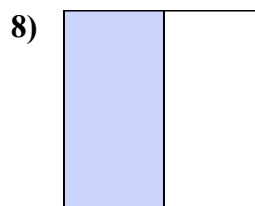
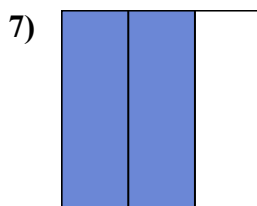
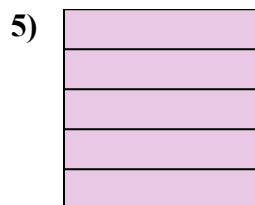
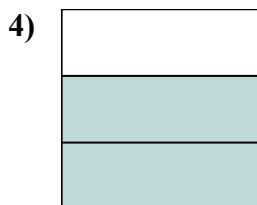
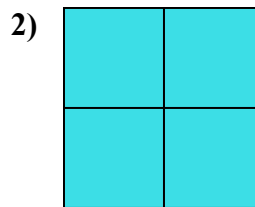
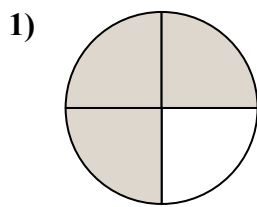
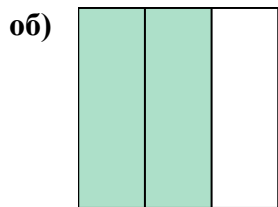
12. \_\_\_\_\_

13. \_\_\_\_\_

14. \_\_\_\_\_



Запишите заштрихованную сумму дробью.



**Ответы**

об.            $\frac{2}{3}$           

1.            $\frac{3}{4}$           

2.            $\frac{4}{4}$           

3.            $\frac{1}{8}$           

4.            $\frac{2}{3}$           

5.            $\frac{5}{5}$           

6.            $\frac{4}{5}$           

7.            $\frac{2}{3}$           

8.            $\frac{1}{2}$           

9.            $\frac{2}{5}$           

10.            $\frac{1}{2}$           

11.            $\frac{3}{8}$           

12.            $\frac{1}{4}$           

13.            $\frac{1}{2}$           

14.            $\frac{8}{8}$