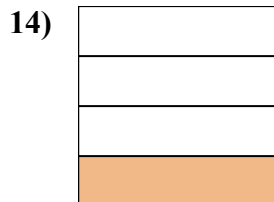
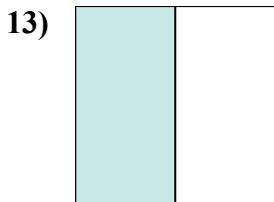
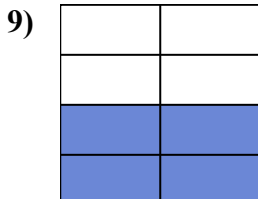
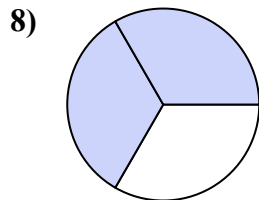

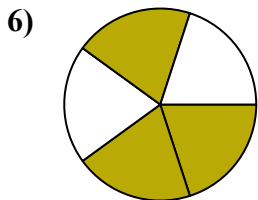
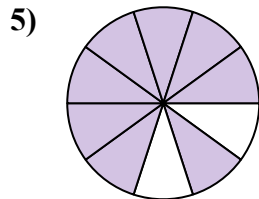
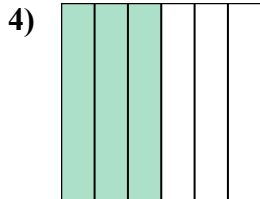
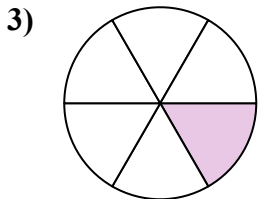
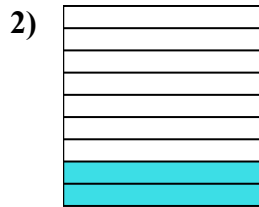
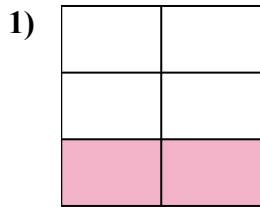




Напишите заштрихованную сумму в форме слова.



**ОТВЕТЫ**

об. **одна половина**

1. \_\_\_\_\_

2. \_\_\_\_\_

3. \_\_\_\_\_

4. \_\_\_\_\_

5. \_\_\_\_\_

6. \_\_\_\_\_

7. \_\_\_\_\_

8. \_\_\_\_\_

9. \_\_\_\_\_

10. \_\_\_\_\_

11. \_\_\_\_\_

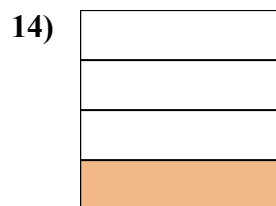
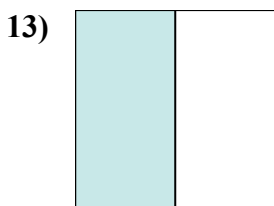
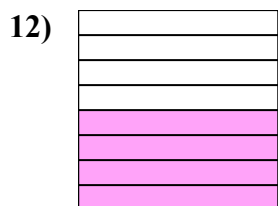
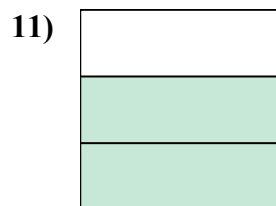

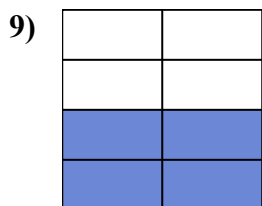
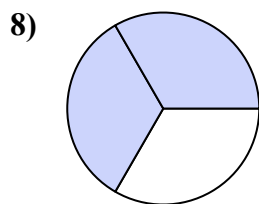
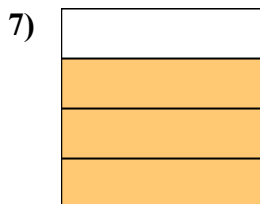
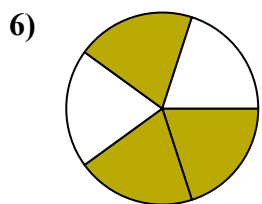
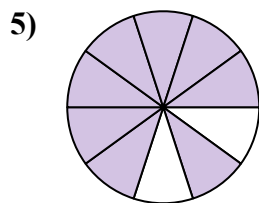
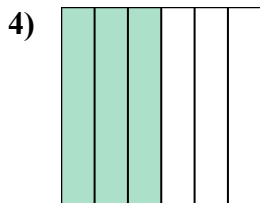
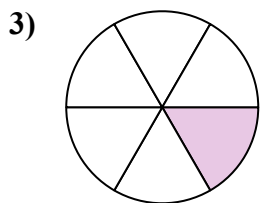

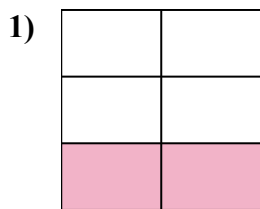
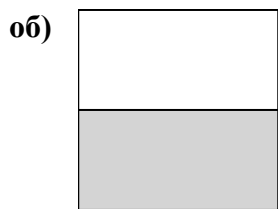
12. \_\_\_\_\_

13. \_\_\_\_\_

14. \_\_\_\_\_



Напишите заштрихованную сумму в форме слова.



**ОТВЕТЫ**

об. одна половина

1. две пятых

2. две девяты

3. одна шестая

4. три шестых

5. восемь десятых

6. три пятых

7. три четверти

8. две третьих

9. четыре седьмых

10. одна десятая

11. две третьих

12. четыре восьмых

13. одна половина

14. одна четвертая